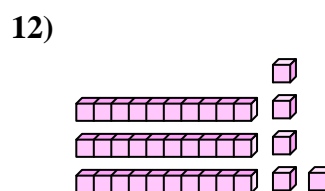
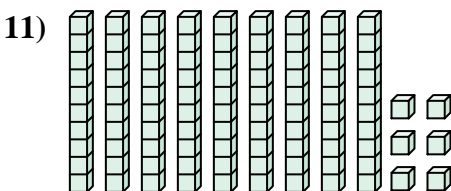
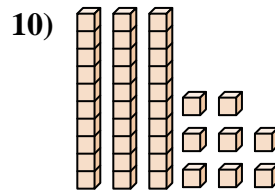
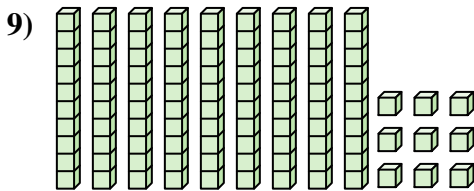
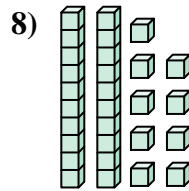
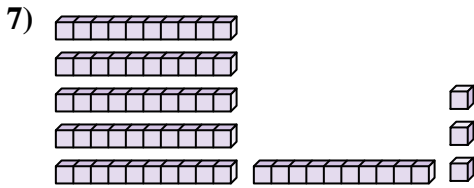
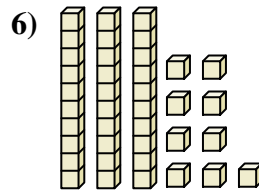
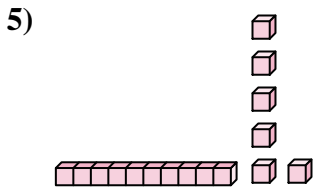
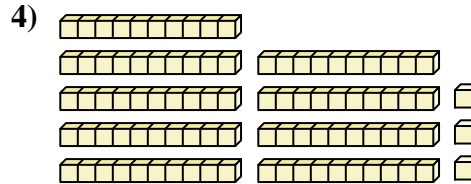
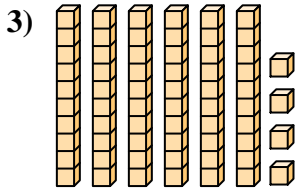
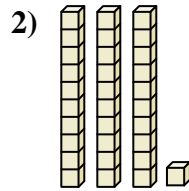
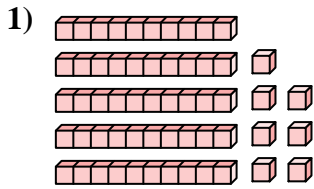




Contar el número total de pequeños bloques.



**Respuestas**

1. \_\_\_\_\_

2. \_\_\_\_\_

3. \_\_\_\_\_

4. \_\_\_\_\_

5. \_\_\_\_\_

6. \_\_\_\_\_

7. \_\_\_\_\_

8. \_\_\_\_\_

9. \_\_\_\_\_

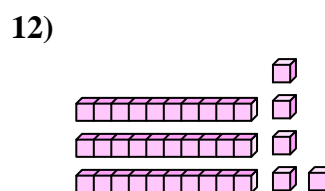
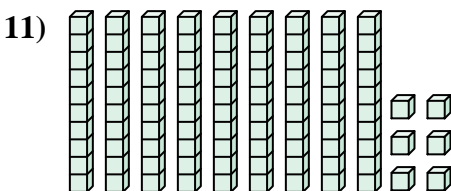
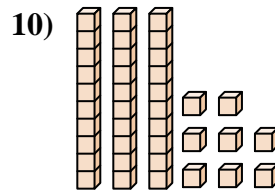
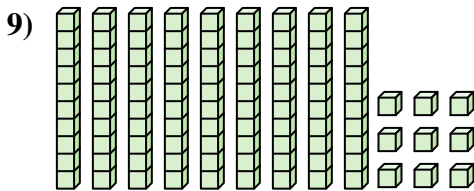
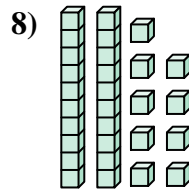
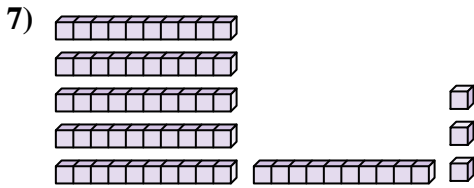
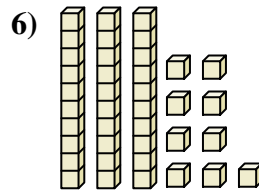
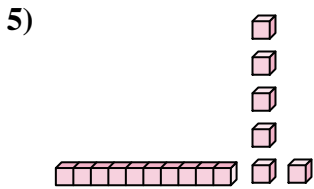
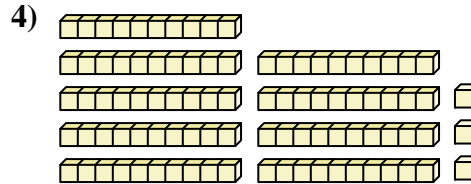
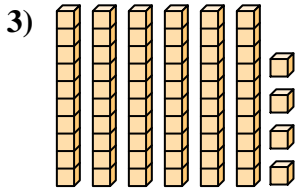
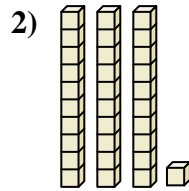
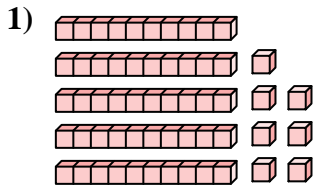
10. \_\_\_\_\_

11. \_\_\_\_\_

12. \_\_\_\_\_



Contar el número total de pequeños bloques.



**Respuestas**

1. 57

2. 31

3. 64

4. 93

5. 16

6. 39

7. 63

8. 29

9. 99

10. 38

11. 96

12. 35



Contar el número total de pequeños bloques.

63	64	99	38	93
57	39	16	29	31

**Respuestas**

1. \_\_\_\_\_
2. \_\_\_\_\_
3. \_\_\_\_\_
4. \_\_\_\_\_
5. \_\_\_\_\_
6. \_\_\_\_\_
7. \_\_\_\_\_
8. \_\_\_\_\_
9. \_\_\_\_\_
10. \_\_\_\_\_

