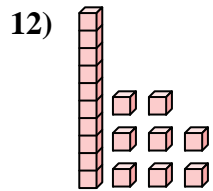
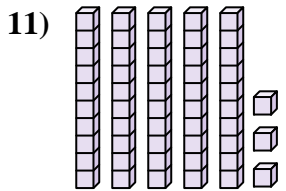
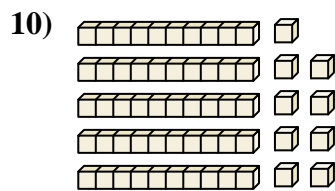
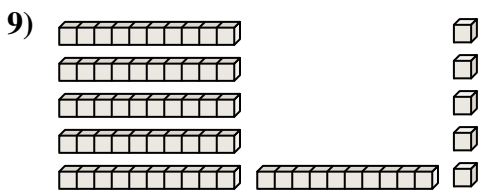
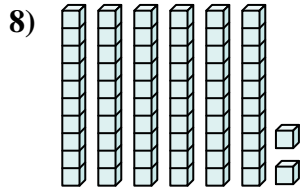
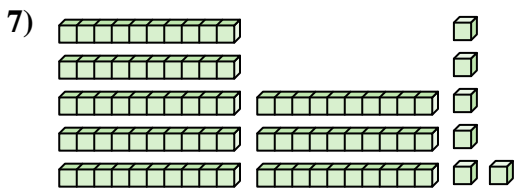
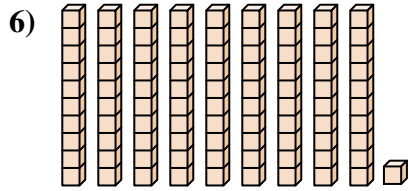
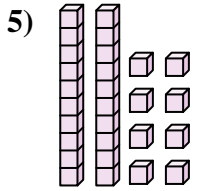
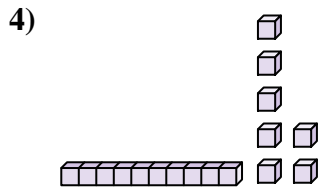
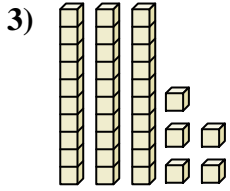
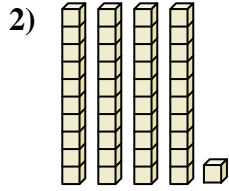
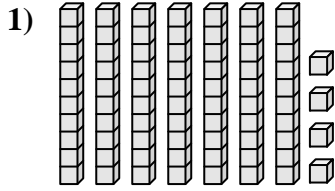




Contar el número total de pequeños bloques.

Respuestas

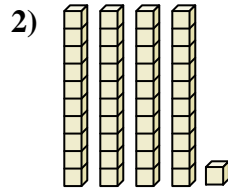
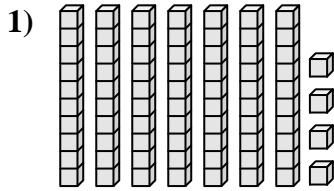


1. _____
2. _____
3. _____
4. _____
5. _____
6. _____
7. _____
8. _____
9. _____
10. _____
11. _____
12. _____



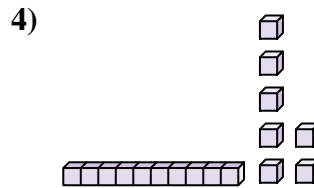
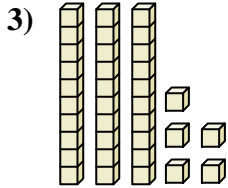
Contar el número total de pequeños bloques.

Respuestas



1. 74

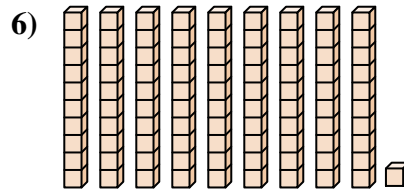
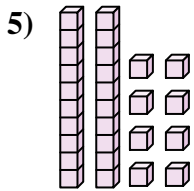
2. 41



3. 35

4. 17

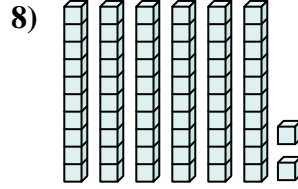
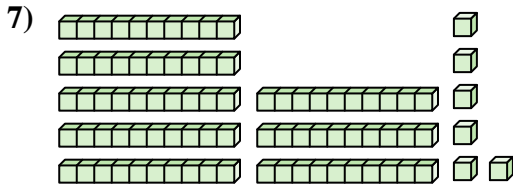
5. 28



6. 91

7. 86

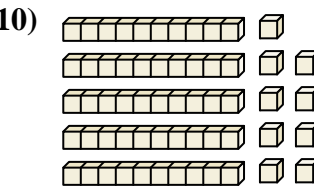
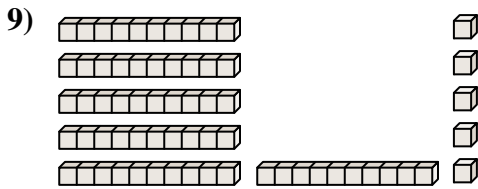
8. 62



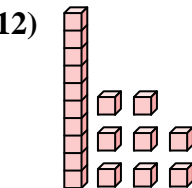
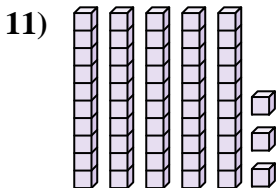
9. 65

10. 59

11. 53



12. 18





Contar el número total de pequeños bloques.

17	35	41	91	74
65	62	28	59	86

Respuestas

1. _____
2. _____
3. _____
4. _____
5. _____
6. _____
7. _____
8. _____
9. _____
10. _____

