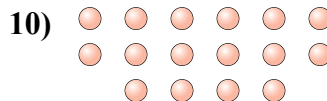
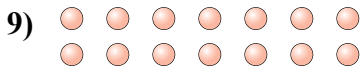
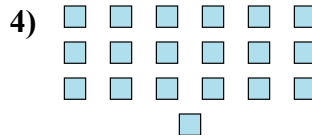
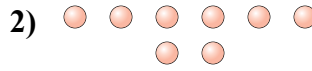




Determinar si el número de formas en la caja es par o impar.



Respuestas

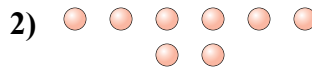
1. _____
2. _____
3. _____
4. _____
5. _____
6. _____
7. _____
8. _____
9. _____
10. _____



Determinar si el número de formas en la caja es par o impar.



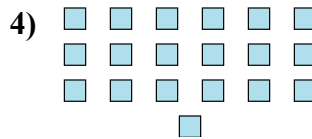
7



8



7



19



7



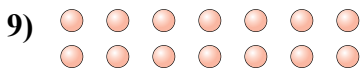
6



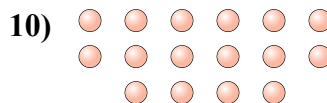
13



7



14



16

Respuestas

1. Impar

2. Par

3. Impar

4. Impar

5. Impar

6. Par

7. Impar

8. Impar

9. Par

10. Par