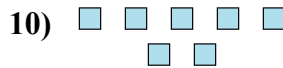
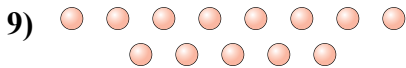
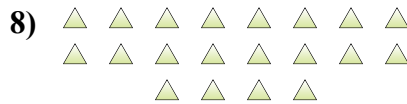
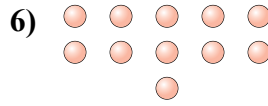

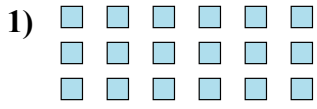




Determinar si el número de formas en la caja es par o impar.

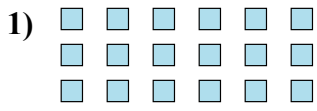


Respuestas

- 1. _____
- 2. _____
- 3. _____
- 4. _____
- 5. _____
- 6. _____
- 7. _____
- 8. _____
- 9. _____
- 10. _____



Determinar si el número de formas en la caja es par o impar.



18



6



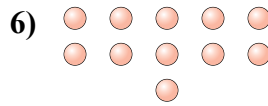
6



17



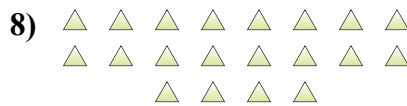
15



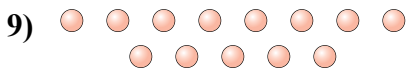
11



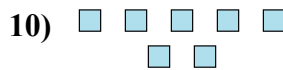
9



20



13



7

Respuestas

1. Par

2. Par

3. Par

4. Impar

5. Impar

6. Impar

7. Impar

8. Par

9. Impar

10. Impar