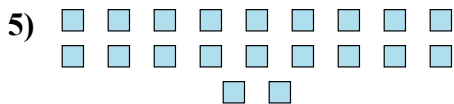

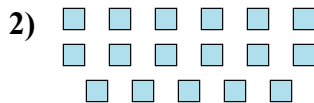




Determinar si el número de formas en la caja es par o impar.

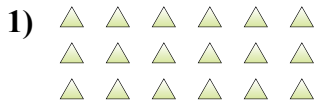


Respuestas

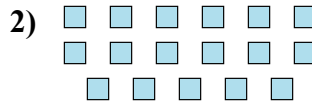
1. _____
2. _____
3. _____
4. _____
5. _____
6. _____
7. _____
8. _____
9. _____
10. _____



Determinar si el número de formas en la caja es par o impar.




18



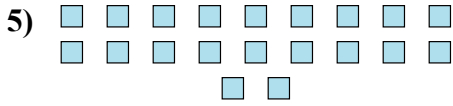
17



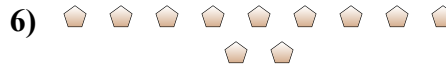
18



20



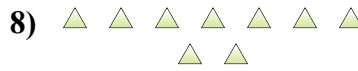
20



11



5



9



15



7

Respuestas

1. Par

2. Impar

3. Par

4. Par

5. Par

6. Impar

7. Impar

8. Impar

9. Impar

10. Impar