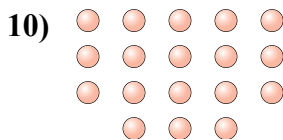
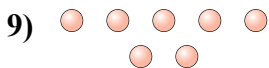
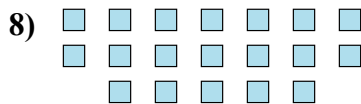
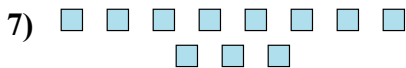
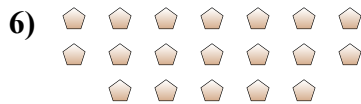
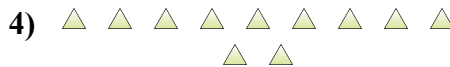
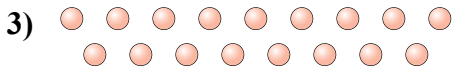
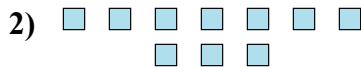
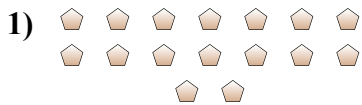




Determinar si el número de formas en la caja es par o impar.

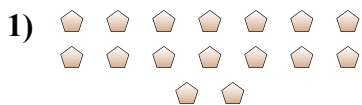


**Respuestas**

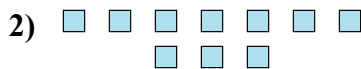
- 1. \_\_\_\_\_
- 2. \_\_\_\_\_
- 3. \_\_\_\_\_
- 4. \_\_\_\_\_
- 5. \_\_\_\_\_
- 6. \_\_\_\_\_
- 7. \_\_\_\_\_
- 8. \_\_\_\_\_
- 9. \_\_\_\_\_
- 10. \_\_\_\_\_



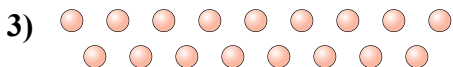
Determinar si el número de formas en la caja es par o impar.



16



10



17



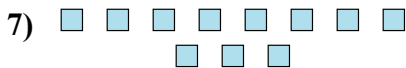
11



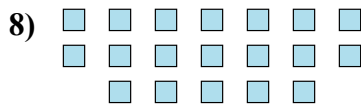
15



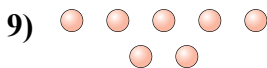
19



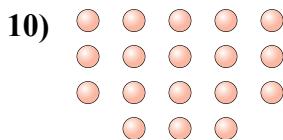
11



19



7



18

Respuestas

1. Par

2. Par

3. Impar

4. Impar

5. Impar

6. Impar

7. Impar

8. Impar

9. Impar

10. Par