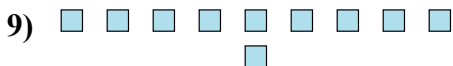
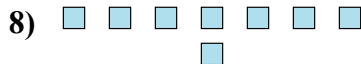

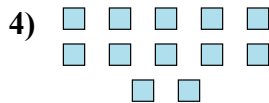




Determinar si el número de formas en la caja es par o impar.



Respuestas

1. _____

2. _____

3. _____

4. _____

5. _____

6. _____

7. _____

8. _____

9. _____

10. _____



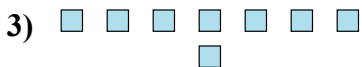
Determinar si el número de formas en la caja es par o impar.



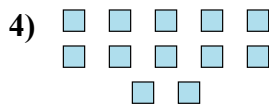
6




9



8



12



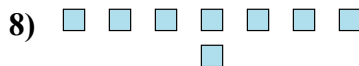
11



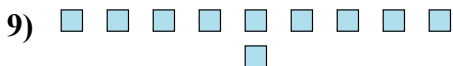
18



20



8



10



6

Respuestas

1. Par

2. Impar

3. Par

4. Par

5. Impar

6. Par

7. Par

8. Par

9. Par

10. Par