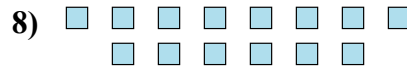

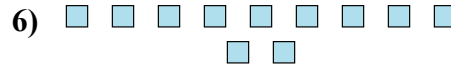
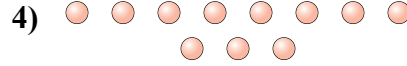
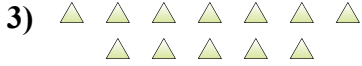




Determinar si el número de formas en la caja es par o impar.



Respuestas

1. _____

2. _____

3. _____

4. _____

5. _____

6. _____

7. _____

8. _____

9. _____

10. _____



Determinar si el número de formas en la caja es par o impar.



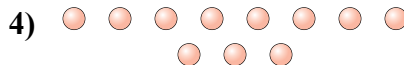
7



16



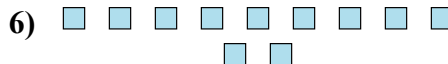
12




11



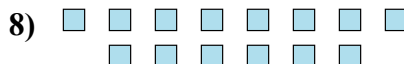
12



11



19



14



13



6

Respuestas

1. Impar
2. Par
3. Par
4. Impar
5. Par
6. Impar
7. Impar
8. Par
9. Impar
10. Par