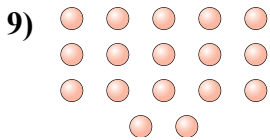
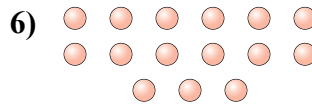
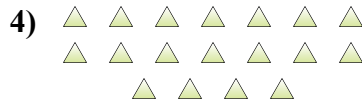
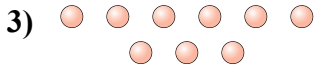




Determinar si el número de formas en la caja es par o impar.



Respuestas

- 1. _____
- 2. _____
- 3. _____
- 4. _____
- 5. _____
- 6. _____
- 7. _____
- 8. _____
- 9. _____
- 10. _____



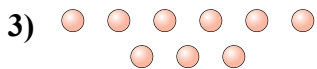
Determinar si el número de formas en la caja es par o impar.



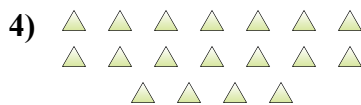
11



10



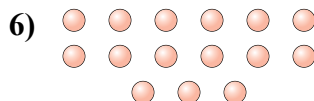
9



18



15



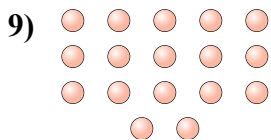
15



20



9



17



14

Respuestas

1. Impar
2. Par
3. Impar
4. Par
5. Impar
6. Impar
7. Par
8. Impar
9. Impar
10. Par