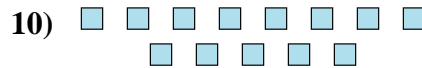
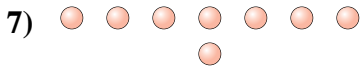
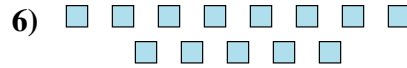
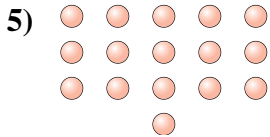
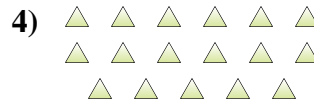





Determinar si el número de formas en la caja es par o impar.



Respuestas

1. _____

2. _____

3. _____

4. _____

5. _____

6. _____

7. _____

8. _____

9. _____


10. _____



Determinar si el número de formas en la caja es par o impar.



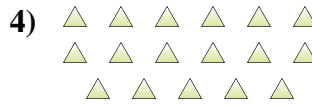
8



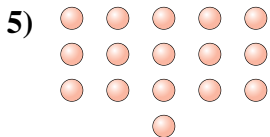
14



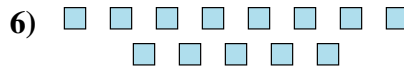
7



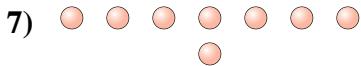
17



16



13



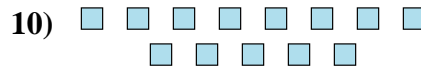
8



7



18



13

Respuestas

1. Par

2. Par

3. Impar

4. Impar

5. Par

6. Impar

7. Par

8. Impar

9. Par

10. Impar