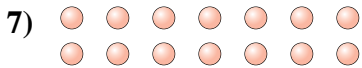
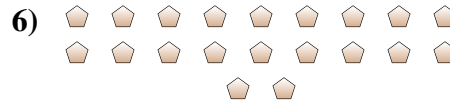
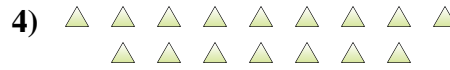
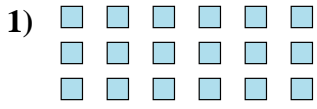




Determinar si el número de formas en la caja es par o impar.

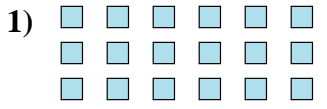


**Respuestas**

1. \_\_\_\_\_
2. \_\_\_\_\_
3. \_\_\_\_\_
4. \_\_\_\_\_
5. \_\_\_\_\_
6. \_\_\_\_\_
7. \_\_\_\_\_
8. \_\_\_\_\_
9. \_\_\_\_\_
10. \_\_\_\_\_



Determinar si el número de formas en la caja es par o impar.



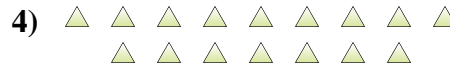
18



8



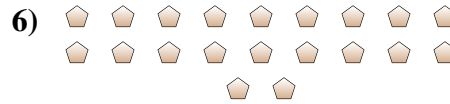
11



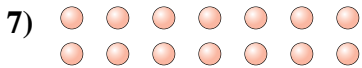
16



16



20



14



14



18



8

Respuestas

1. Par

2. Par

3. Impar

4. Par

5. Par

6. Par

7. Par

8. Par

9. Par

10. Par