




Llenar los espacios vacíos en la recta numérica. Cada recta numérica se incrementa de a 1.

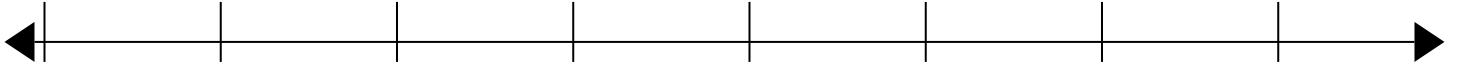
1)

46



2)

22



3)

14



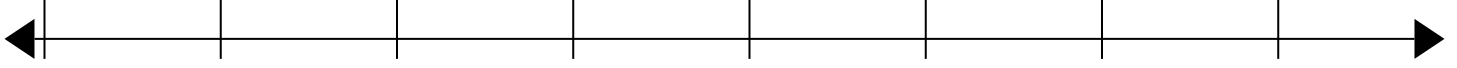
4)

27



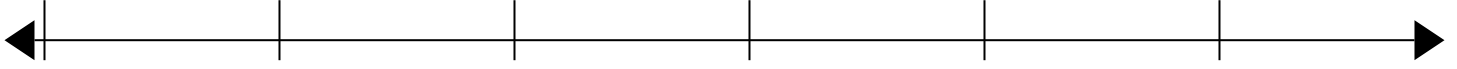
5)

35




6)

41




7)

18



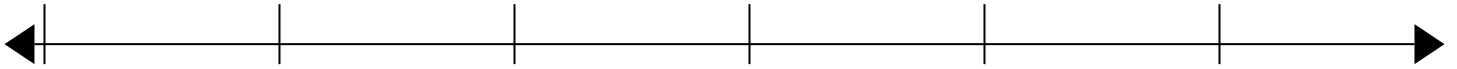
8)

50



9)

24



10)

29





Llenar los espacios vacíos en la recta numérica. Cada recta numérica se incrementa de a 1.

