




Llenar los espacios vacíos en la recta numérica. Cada recta numérica se incrementa de a 1.

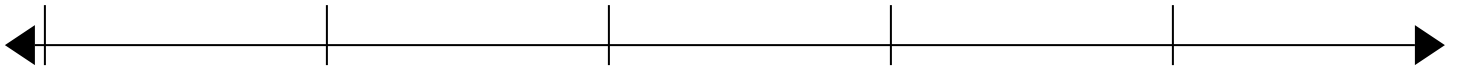
1)

20



2)

24




3)

6



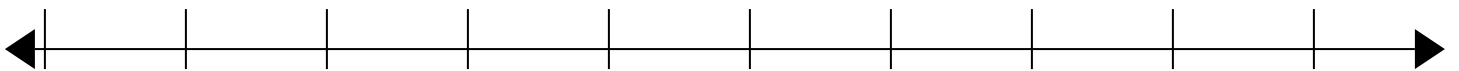
4)

21



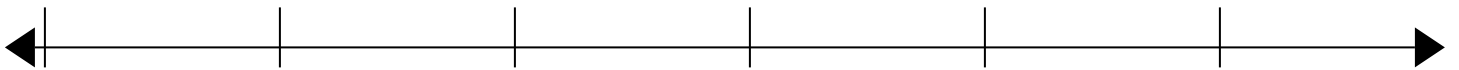
5)

54



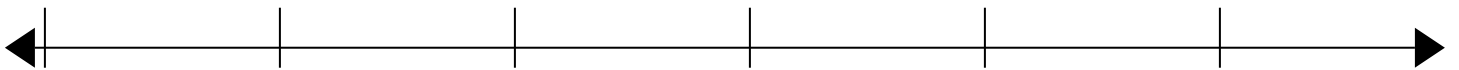
6)

39



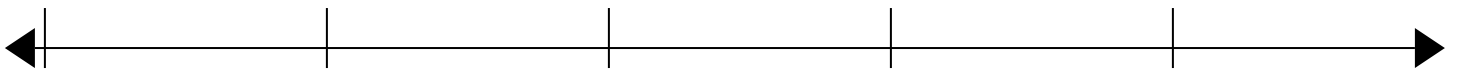
7)

72



8)

3



9)

34



10)

78





Llenar los espacios vacíos en la recta numérica. Cada recta numérica se incrementa de a 1.

