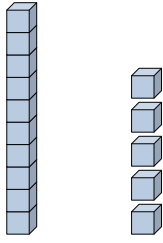


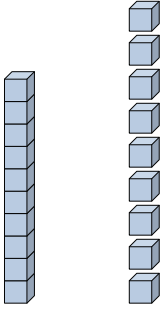


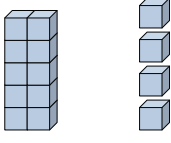
Rellenar los espacios para encontrar las cantidades.

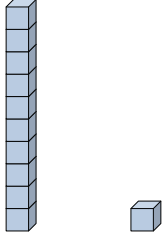
Respuestas

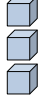
Ej)  1 5
decenas unidades

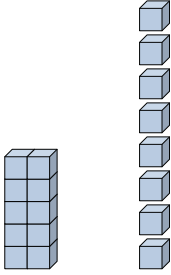
Ej) 0 4
decenas unidades

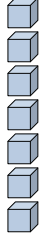
1) 
decenas unidades


2) 
decenas unidades

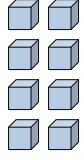
3) 
decenas unidades

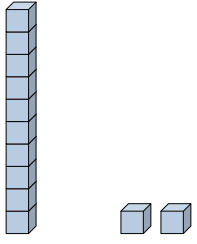
4) 
decenas unidades

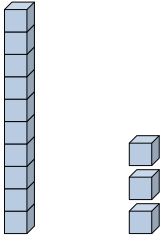
5) 
decenas unidades

6) 
decenas unidades

7) 
decenas unidades

8) 
decenas unidades

9) 
decenas unidades

10) 
decenas unidades

Ej. 15

Ej. 4

1. _____

2. _____

3. _____

4. _____

5. _____

6. _____

7. _____

8. _____

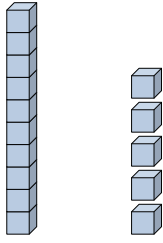
9. _____

10. _____



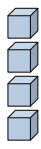
Rellenar los espacios para encontrar las cantidades.

Respuestas

Ej) 

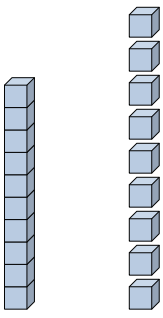
$$\begin{array}{r} 1 \\ \hline \text{decenas} \end{array}$$

$$\begin{array}{r} 5 \\ \hline \text{unidades} \end{array}$$

Ej) 

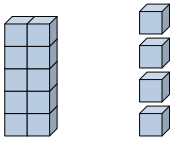
$$\begin{array}{r} 0 \\ \hline \text{decenas} \end{array}$$

$$\begin{array}{r} 4 \\ \hline \text{unidades} \end{array}$$

1) 

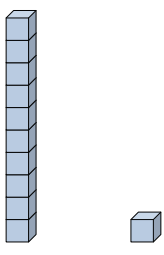
$$\begin{array}{r} 1 \\ \hline \text{decenas} \end{array}$$

$$\begin{array}{r} 9 \\ \hline \text{unidades} \end{array}$$

2) 

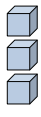
$$\begin{array}{r} 1 \\ \hline \text{decenas} \end{array}$$

$$\begin{array}{r} 4 \\ \hline \text{unidades} \end{array}$$

3) 

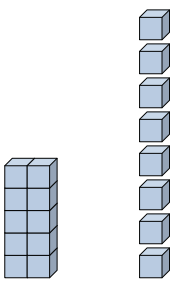
$$\begin{array}{r} 1 \\ \hline \text{decenas} \end{array}$$

$$\begin{array}{r} 1 \\ \hline \text{unidades} \end{array}$$

4) 


$$\begin{array}{r} 0 \\ \hline \text{decenas} \end{array}$$

$$\begin{array}{r} 3 \\ \hline \text{unidades} \end{array}$$

5) 


$$\begin{array}{r} 1 \\ \hline \text{decenas} \end{array}$$

$$\begin{array}{r} 8 \\ \hline \text{unidades} \end{array}$$

6) 

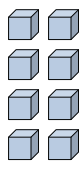
$$\begin{array}{r} 0 \\ \hline \text{decenas} \end{array}$$

$$\begin{array}{r} 7 \\ \hline \text{unidades} \end{array}$$

7) 

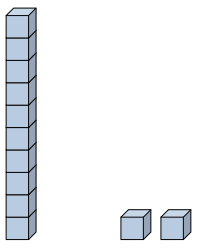
$$\begin{array}{r} 0 \\ \hline \text{decenas} \end{array}$$

$$\begin{array}{r} 2 \\ \hline \text{unidades} \end{array}$$

8) 

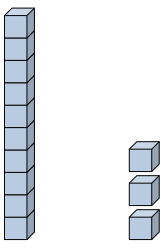
$$\begin{array}{r} 0 \\ \hline \text{decenas} \end{array}$$

$$\begin{array}{r} 8 \\ \hline \text{unidades} \end{array}$$

9) 

$$\begin{array}{r} 1 \\ \hline \text{decenas} \end{array}$$

$$\begin{array}{r} 2 \\ \hline \text{unidades} \end{array}$$

10) 

$$\begin{array}{r} 1 \\ \hline \text{decenas} \end{array}$$

$$\begin{array}{r} 3 \\ \hline \text{unidades} \end{array}$$

Ej. 15

Ej. 4

1. 19

2. 14

3. 11

4. 3

5. 18

6. 7

7. 2

8. 8

9. 12

10. 13