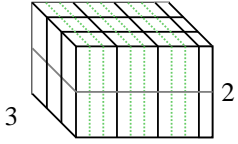


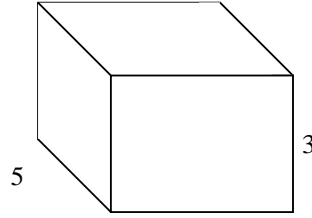


Rellenar cada prisma rectangular con cubos para determinar el volumen. Cada unidad de prisma es medida en cm (no a escala).

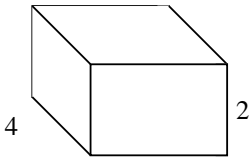
Ej) $3 \frac{1}{3}$



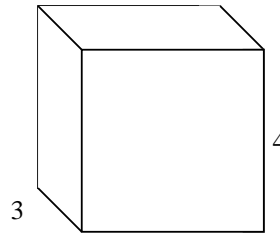
1) $4 \frac{2}{4}$




2) $3 \frac{1}{4}$




3) $4 \frac{1}{2}$



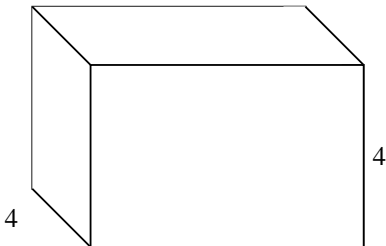
4) $6 \frac{4}{5}$



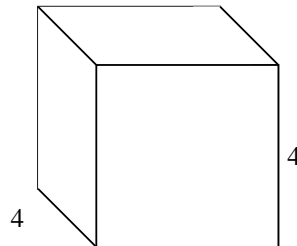
5) $4 \frac{1}{2}$



6) $6 \frac{2}{4}$



7) $4 \frac{2}{3}$



Respuestas

Ej. 20 cm³

1. _____

2. _____

3. _____

4. _____

5. _____

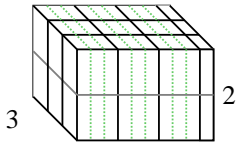
6. _____

7. _____

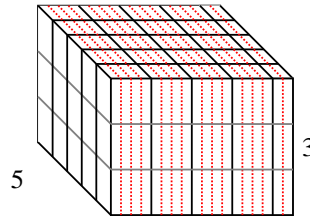


Rellenar cada prisma rectangular con cubos para determinar el volumen. Cada unidad de prisma es medida en cm (no a escala).

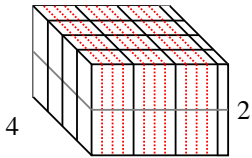
Ej) $3 \frac{1}{3}$



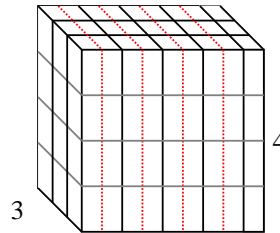
1) $4 \frac{2}{4}$



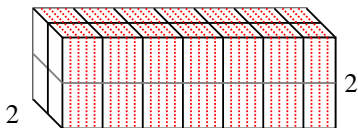
2) $3 \frac{1}{4}$



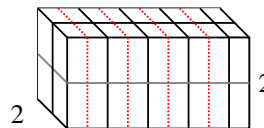
3) $4 \frac{1}{2}$



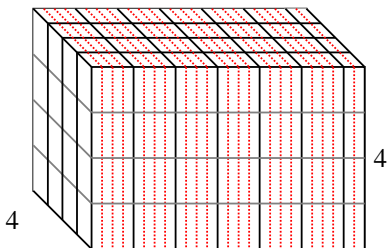
4) $6 \frac{4}{5}$



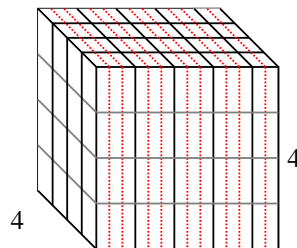
5) $4 \frac{1}{2}$



6) $6 \frac{2}{4}$



7) $4 \frac{2}{3}$



Respuestas

Ej. 20 cm^3

1. $67 \frac{2}{4} \text{ cm}^3$

2. 26 cm^3

3. 54 cm^3

4. $27 \frac{1}{5} \text{ cm}^3$

5. 18 cm^3

6. 104 cm^3

7. $74 \frac{2}{3} \text{ cm}^3$