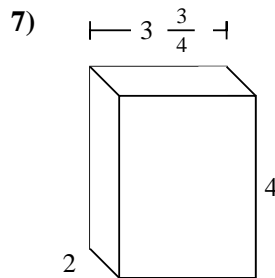
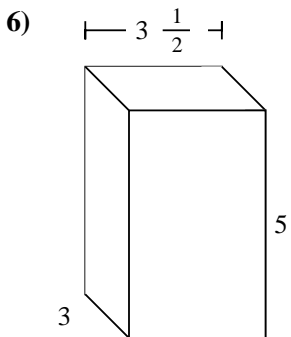
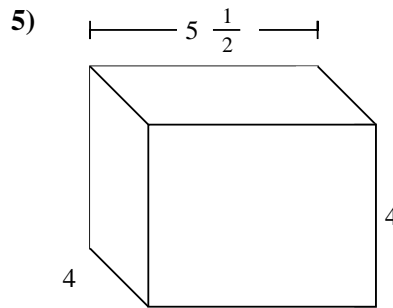
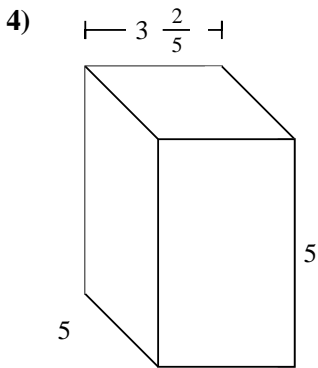
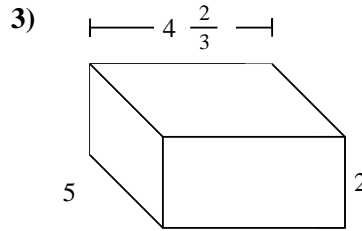
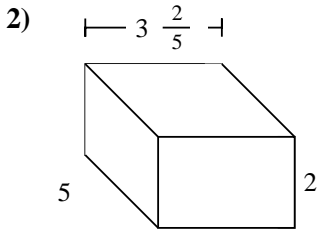
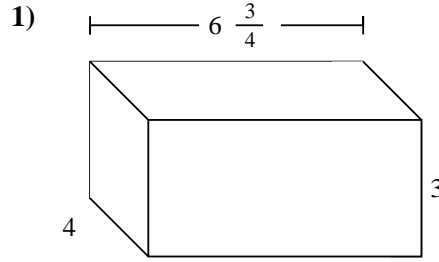
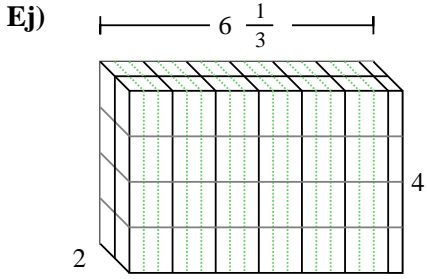




Rellenar cada prisma rectangular con cubos para determinar el volumen. Cada unidad de prisma es medida en cm (no a escala).



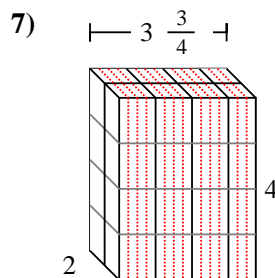
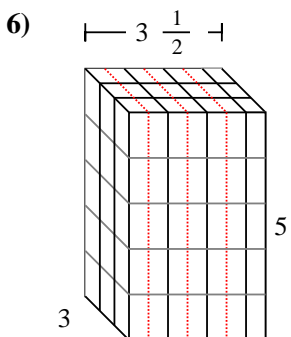
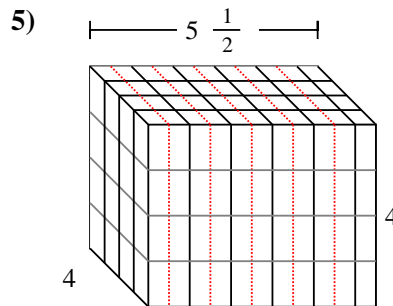
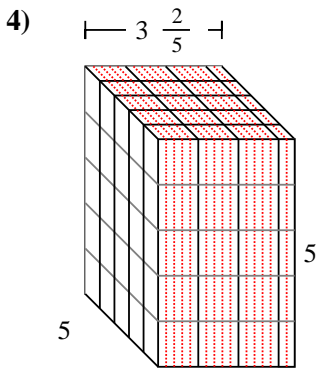
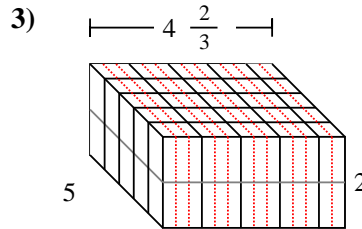
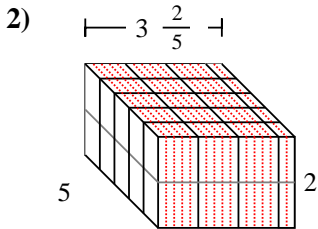
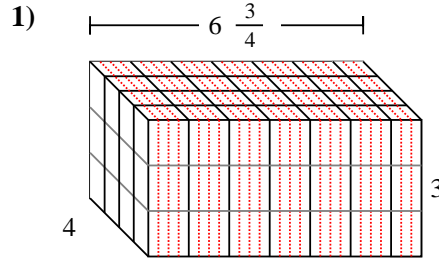
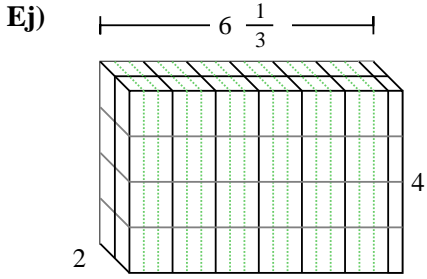
Respuestas

Ej. $50 \frac{2}{3} \text{ cm}^3$

1. _____
2. _____
3. _____
4. _____
5. _____
6. _____
7. _____



Rellenar cada prisma rectangular con cubos para determinar el volumen. Cada unidad de prisma es medida en cm (no a escala).



Respuestas

- Ej. $50 \frac{2}{3} \text{ cm}^3$
1. 81 cm^3
2. 34 cm^3
3. $46 \frac{2}{3} \text{ cm}^3$
4. 85 cm^3
5. 88 cm^3
6. $52 \frac{1}{2} \text{ cm}^3$
7. 30 cm^3