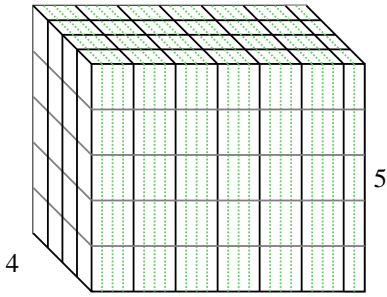


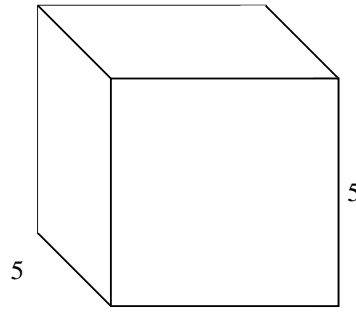


Rellenar cada prisma rectangular con cubos para determinar el volumen. Cada unidad de prisma es medida en cm (no a escala).

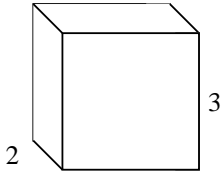
Ej) $6 \frac{2}{4}$



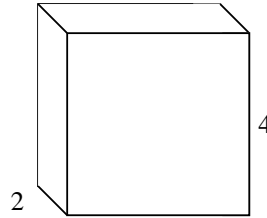
1) $5 \frac{3}{5}$



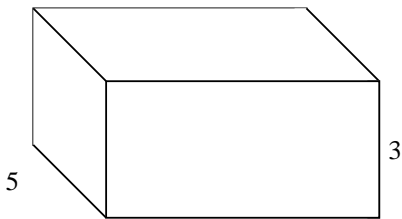
2) $3 \frac{3}{5}$




3) $4 \frac{2}{3}$



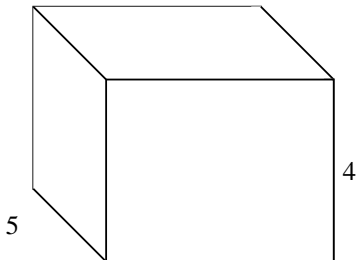
4) $6 \frac{1}{4}$



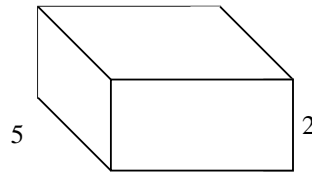
5) $6 \frac{3}{5}$



6) $5 \frac{1}{5}$



7) $4 \frac{3}{4}$



Respuestas

Ej. 130 cm³

1. _____

2. _____

3. _____

4. _____

5. _____

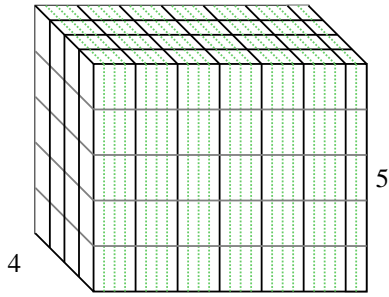
6. _____

7. _____

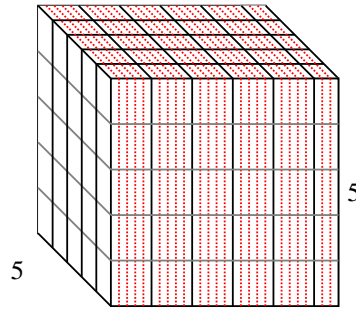


Rellenar cada prisma rectangular con cubos para determinar el volumen. Cada unidad de prisma es medida en cm (no a escala).

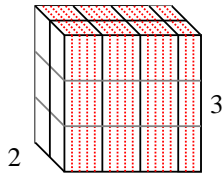
Ej) $6 \frac{2}{4}$



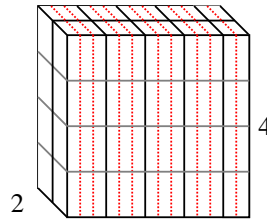
1) $5 \frac{3}{5}$



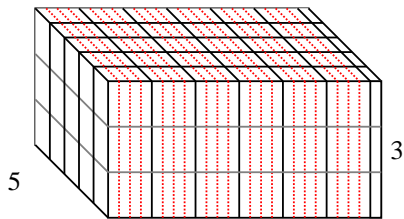
2) $3 \frac{3}{5}$




3) $4 \frac{2}{3}$



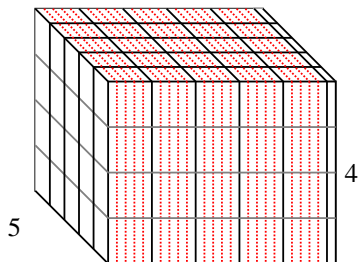
4) $6 \frac{1}{4}$



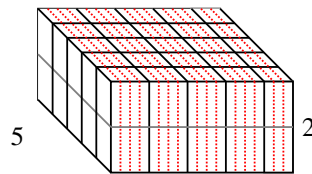
5) $6 \frac{3}{5}$



6) $5 \frac{1}{5}$



7) $4 \frac{3}{4}$



Respuestas

Ej. 130 cm^3

1. 140 cm^3

2. $21 \frac{3}{5} \text{ cm}^3$

3. $37 \frac{1}{3} \text{ cm}^3$

4. $93 \frac{3}{4} \text{ cm}^3$

5. $52 \frac{4}{5} \text{ cm}^3$

6. 104 cm^3

7. $47 \frac{2}{4} \text{ cm}^3$