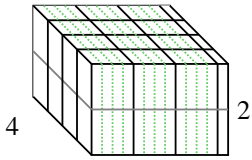


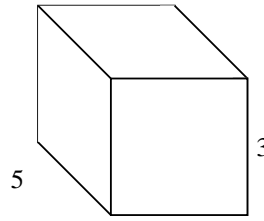


Rellenar cada prisma rectangular con cubos para determinar el volumen. Cada unidad de prisma es medida en cm (no a escala).

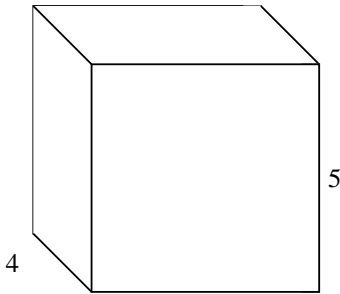
Ej) $3 \frac{1}{4}$



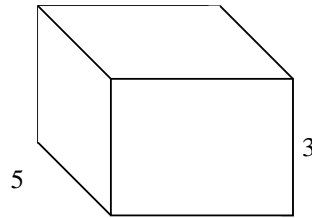
1) $3 \frac{1}{3}$




2) $5 \frac{2}{5}$




3) $4 \frac{1}{4}$



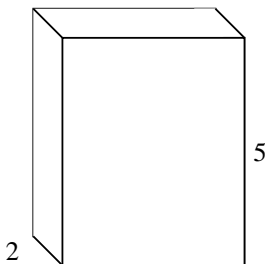
4) $5 \frac{1}{2}$



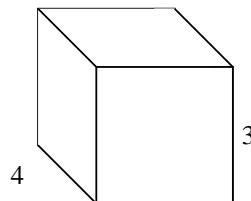
5) $4 \frac{2}{3}$



6) $4 \frac{1}{2}$



7) $3 \frac{1}{2}$



Respuestas

Ej. 26 cm³

1. _____

2. _____

3. _____

4. _____

5. _____

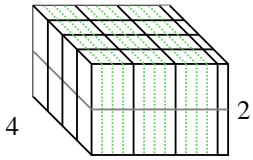
6. _____

7. _____

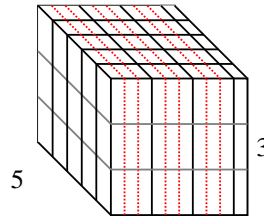


Rellenar cada prisma rectangular con cubos para determinar el volumen. Cada unidad de prisma es medida en cm (no a escala).

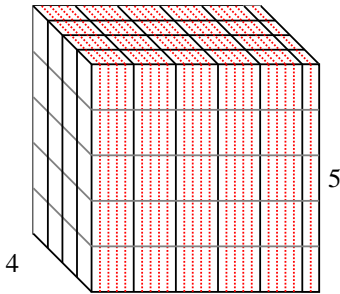
Ej) $3 \frac{1}{4}$



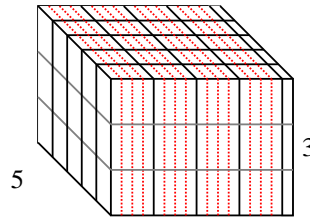
1) $3 \frac{1}{3}$



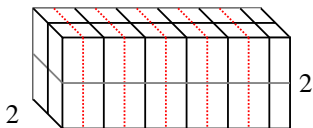
2) $5 \frac{2}{5}$



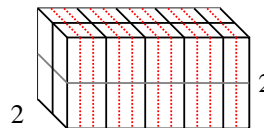
3) $4 \frac{1}{4}$



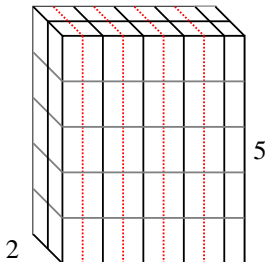
4) $5 \frac{1}{2}$



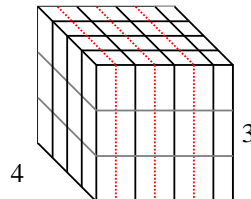
5) $4 \frac{2}{3}$



6) $4 \frac{1}{2}$



7) $3 \frac{1}{2}$



Respuestas

Ej. 26 cm^3

1. 50 cm^3

2. 108 cm^3

3. $63 \frac{3}{4} \text{ cm}^3$

4. 22 cm^3

5. $18 \frac{2}{3} \text{ cm}^3$

6. 45 cm^3

7. 42 cm^3