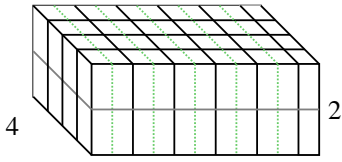


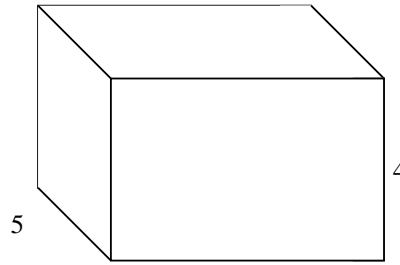


Rellenar cada prisma rectangular con cubos para determinar el volumen. Cada unidad de prisma es medida en cm (no a escala).


Ej) $5 \frac{1}{2}$



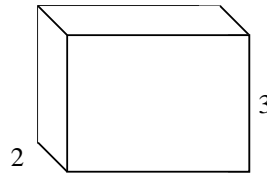
1) $6 \frac{3}{4}$



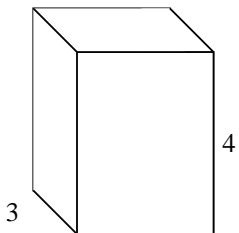
2) $6 \frac{3}{5}$



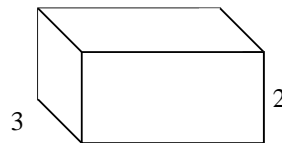
3) $4 \frac{1}{2}$



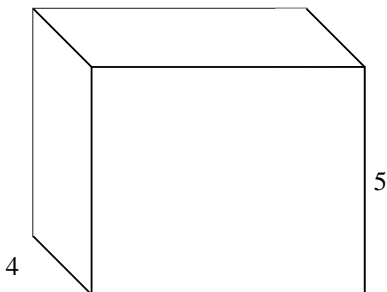
4) $3 \frac{3}{4}$



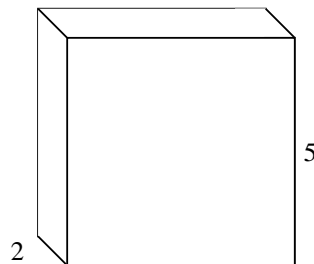
5) $4 \frac{1}{2}$



6) $6 \frac{3}{4}$



7) $5 \frac{3}{4}$



Respuestas

Ej. 44 cm³

1. _____

2. _____

3. _____

4. _____

5. _____

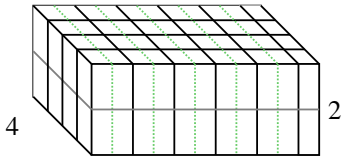
6. _____

7. _____

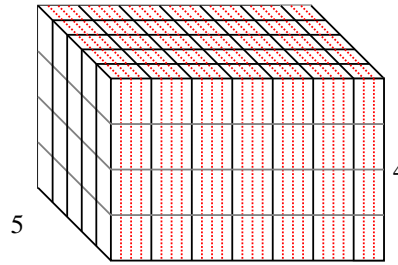


Rellenar cada prisma rectangular con cubos para determinar el volumen. Cada unidad de prisma es medida en cm (no a escala).

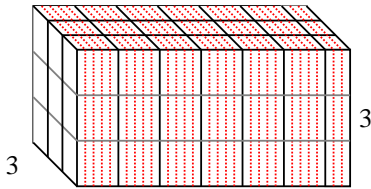
Ej) $5 \frac{1}{2}$



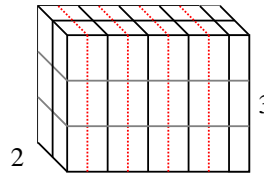
1) $6 \frac{3}{4}$



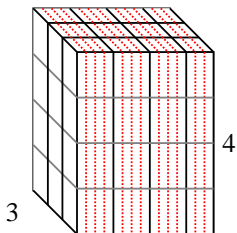
2) $6 \frac{3}{5}$



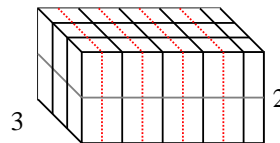
3) $4 \frac{1}{2}$



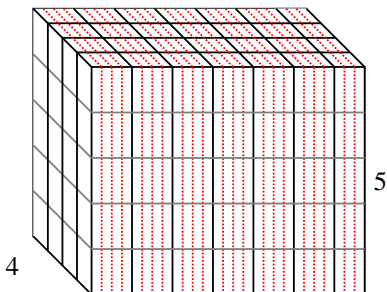
4) $3 \frac{3}{4}$



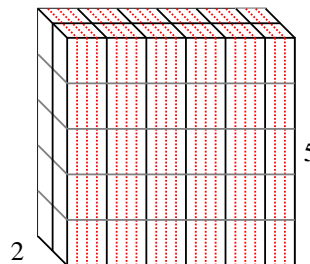
5) $4 \frac{1}{2}$



6) $6 \frac{3}{4}$



7) $5 \frac{3}{4}$



Respuestas

Ej. 44 cm^3

1. 135 cm^3

2. $59 \frac{2}{5} \text{ cm}^3$

3. 27 cm^3

4. 45 cm^3

5. 27 cm^3

6. 135 cm^3

7. $57 \frac{2}{4} \text{ cm}^3$