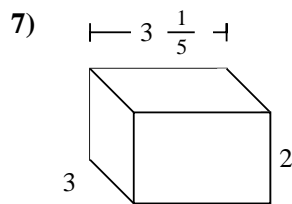
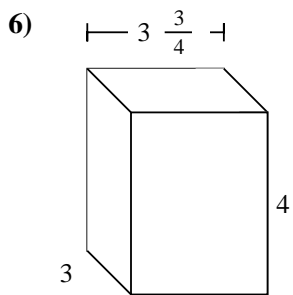
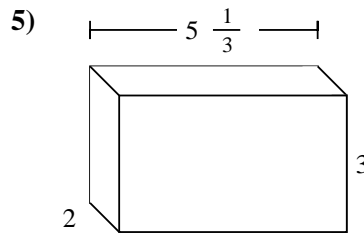
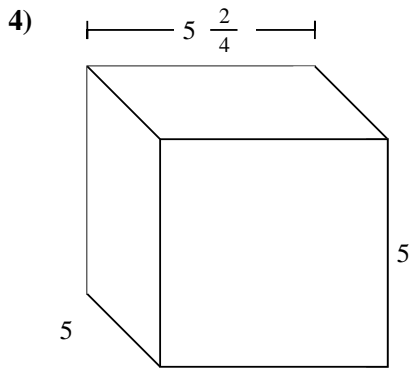
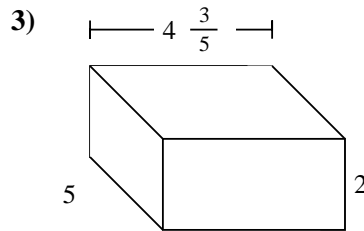
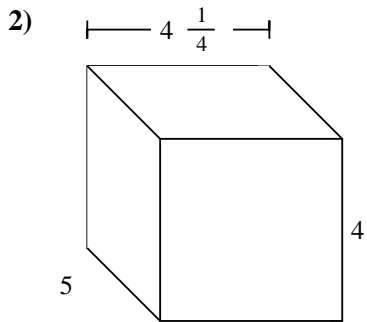
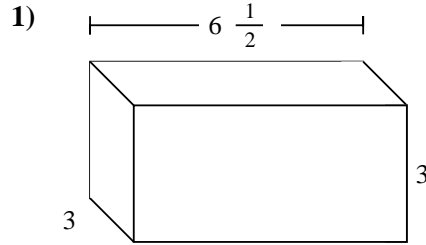
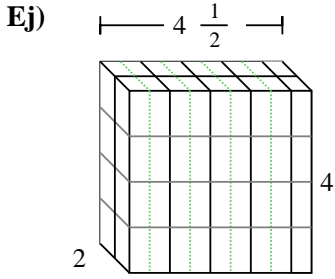




Rellenar cada prisma rectangular con cubos para determinar el volumen. Cada unidad de prisma es medida en cm (no a escala).

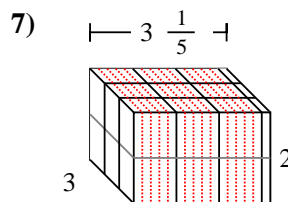
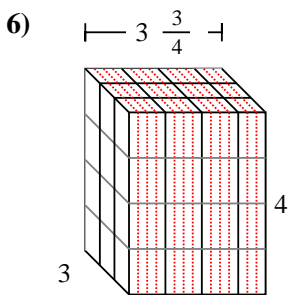
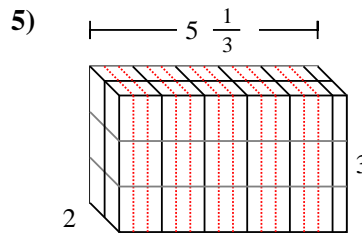
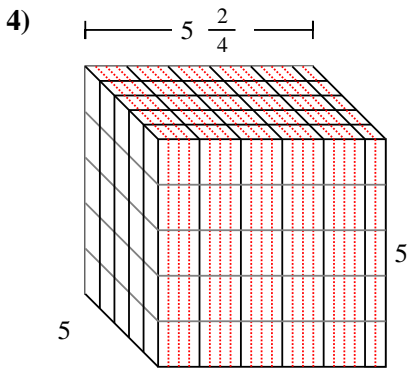
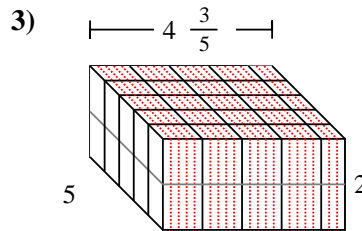
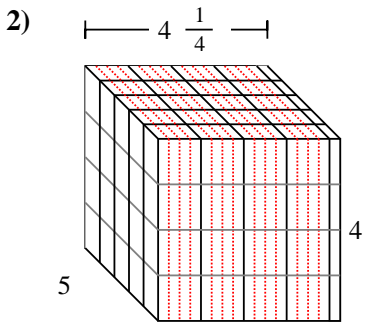
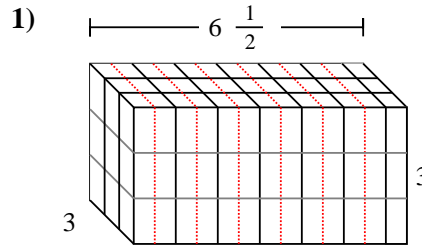
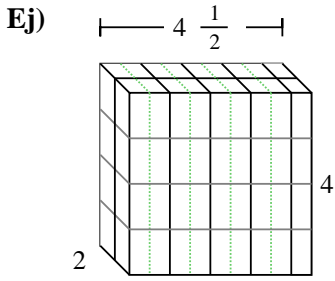


Respuestas

- Ej. 36 cm³
1. _____
2. _____
3. _____
4. _____
5. _____
6. _____
7. _____



Rellenar cada prisma rectangular con cubos para determinar el volumen. Cada unidad de prisma es medida en cm (no a escala).



Respuestas

- Ej. 36 cm^3
1. $58 \frac{1}{2} \text{ cm}^3$
2. 85 cm^3
3. 46 cm^3
4. $137 \frac{2}{4} \text{ cm}^3$
5. 32 cm^3
6. 45 cm^3
7. $19 \frac{1}{5} \text{ cm}^3$