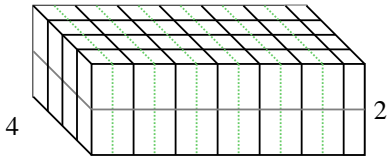


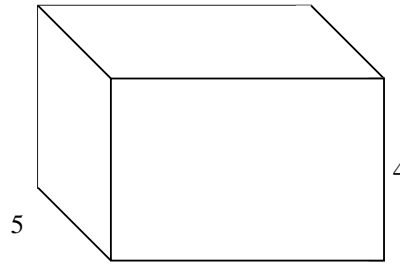


Rellenar cada prisma rectangular con cubos para determinar el volumen. Cada unidad de prisma es medida en cm (no a escala).

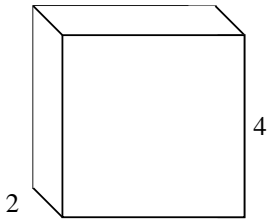
Ej) $6 \frac{1}{2}$



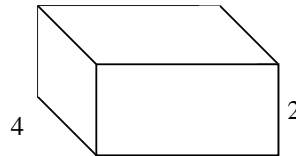
1) $6 \frac{1}{3}$



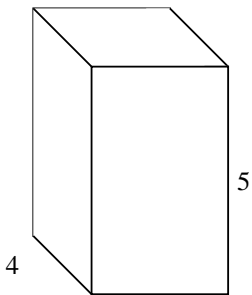
2) $4 \frac{2}{3}$



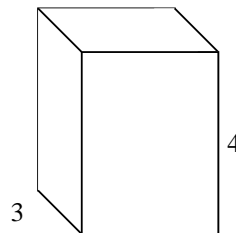
3) $4 \frac{1}{2}$



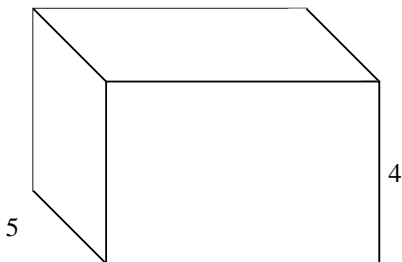
4) $3 \frac{3}{5}$



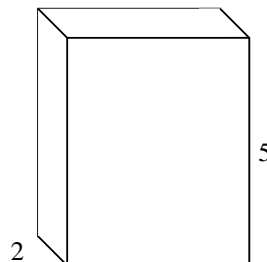
5) $3 \frac{2}{4}$



6) $6 \frac{2}{5}$



7) $4 \frac{1}{2}$



Respuestas

Ej. 52 cm³

1. _____

2. _____

3. _____

4. _____

5. _____

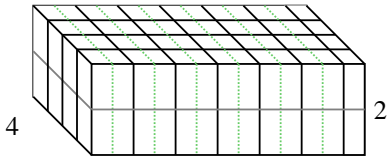
6. _____

7. _____

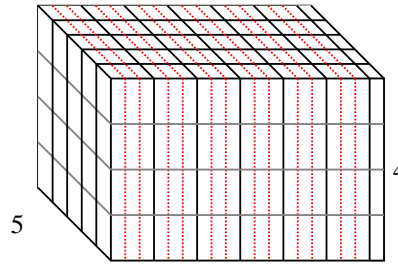


Rellenar cada prisma rectangular con cubos para determinar el volumen. Cada unidad de prisma es medida en cm (no a escala).

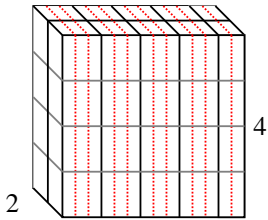
Ej) $6 \frac{1}{2}$



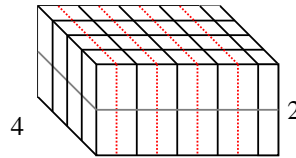
1) $6 \frac{1}{3}$



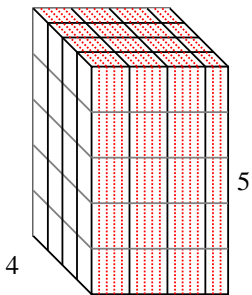
2) $4 \frac{2}{3}$



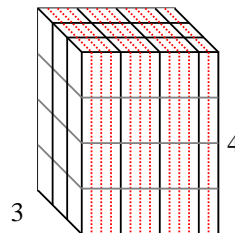
3) $4 \frac{1}{2}$



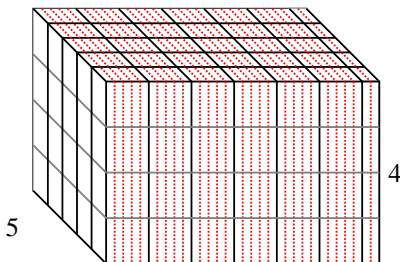
4) $3 \frac{3}{5}$



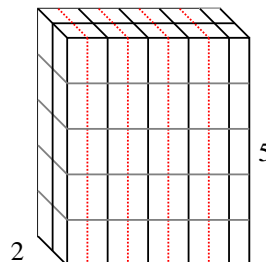
5) $3 \frac{2}{4}$



6) $6 \frac{2}{5}$



7) $4 \frac{1}{2}$



Respuestas

Ej. 52 cm^3

1. $126 \frac{2}{3} \text{ cm}^3$

2. $37 \frac{1}{3} \text{ cm}^3$

3. 36 cm^3

4. 72 cm^3

5. 42 cm^3

6. 128 cm^3

7. 45 cm^3