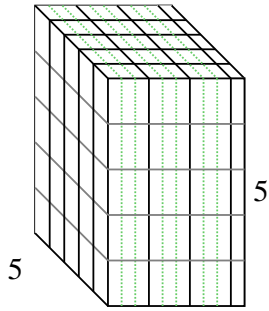


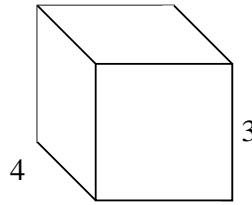


Rellenar cada prisma rectangular con cubos para determinar el volumen. Cada unidad de prisma es medida en cm (no a escala).

Ej) $3 \frac{1}{3}$



1) $3 \frac{1}{4}$

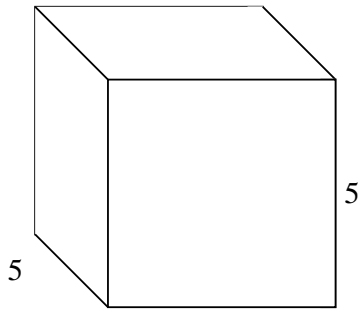


Respuestas

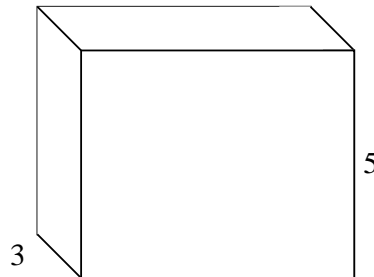
Ej. $83 \frac{1}{3} \text{ cm}^3$

1. _____
2. _____
3. _____
4. _____
5. _____
6. _____
7. _____

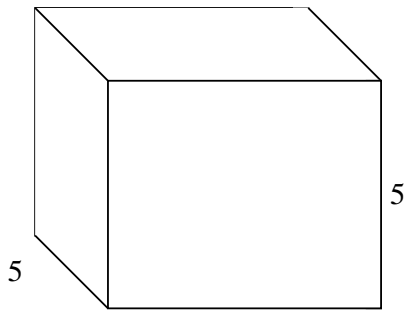
2) $5 \frac{1}{3}$



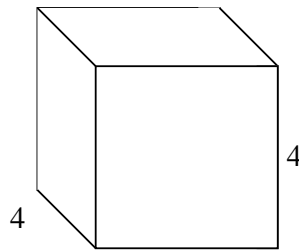
3) $6 \frac{3}{4}$




4) $6 \frac{1}{3}$



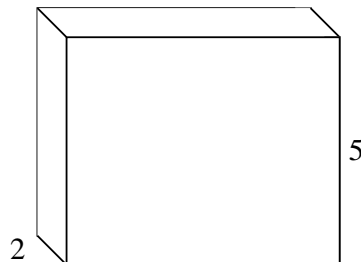
5) $4 \frac{1}{2}$



6) $6 \frac{3}{4}$



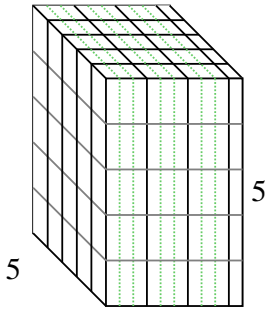
7) $6 \frac{1}{3}$



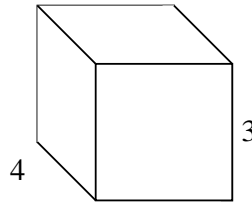


Rellenar cada prisma rectangular con cubos para determinar el volumen. Cada unidad de prisma es medida en cm (no a escala).

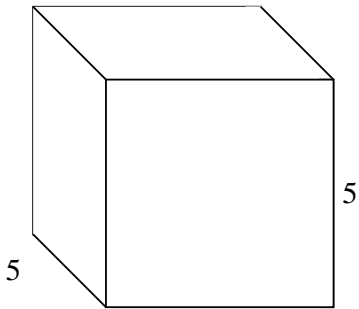
Ej) $3 \frac{1}{3}$



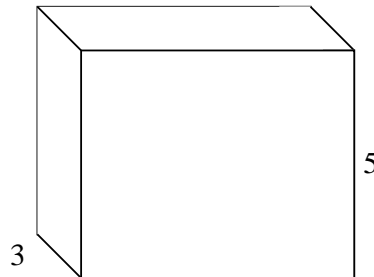
1) $3 \frac{1}{4}$



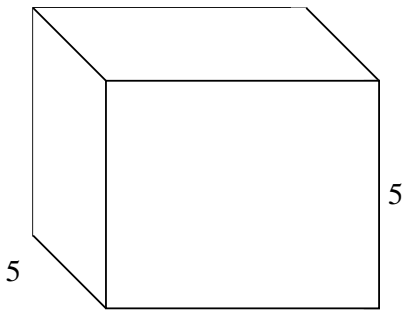
2) $5 \frac{1}{3}$



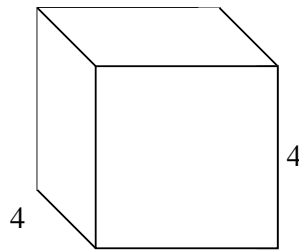
3) $6 \frac{3}{4}$




4) $6 \frac{1}{3}$



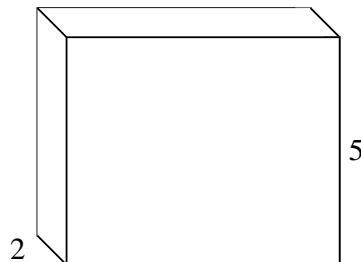
5) $4 \frac{1}{2}$



6) $6 \frac{3}{4}$



7) $6 \frac{1}{3}$



Respuestas

Ej. $83 \frac{1}{3} \text{ cm}^3$

1. 39 cm^3

2. $133 \frac{1}{3} \text{ cm}^3$

3. $101 \frac{1}{4} \text{ cm}^3$

4. $158 \frac{1}{3} \text{ cm}^3$

5. 72 cm^3

6. 54 cm^3

7. $63 \frac{1}{3} \text{ cm}^3$