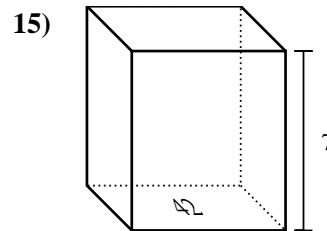
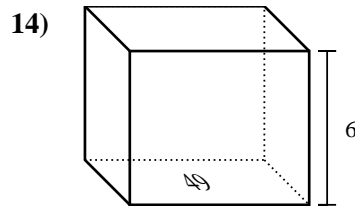
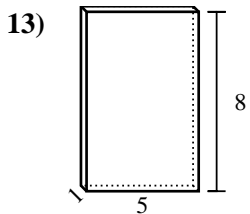
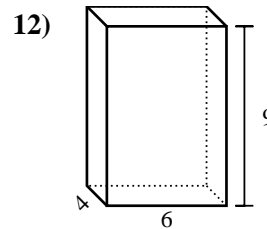
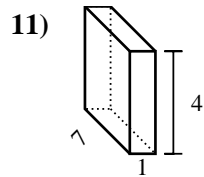
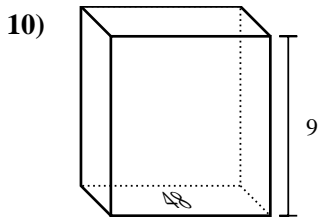
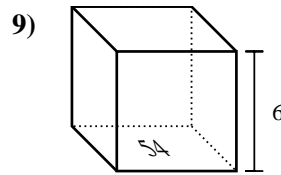
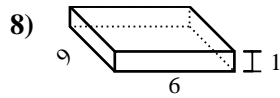
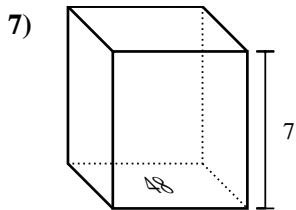
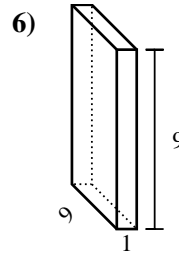
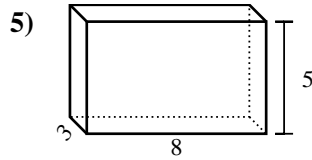
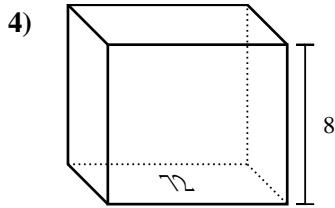
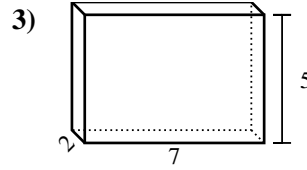
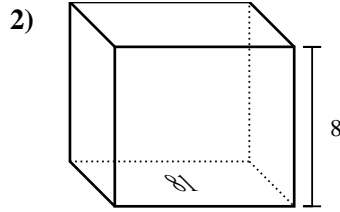
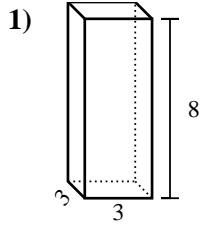




Encontrar el volumen de cada prisma rectangular. Recuerda  $V = \text{Base} \times \text{Altura}$  y

$V = \text{Largo} \times \text{ancho} \times \text{alto}$ .



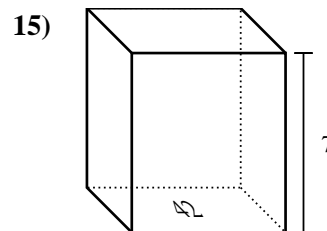
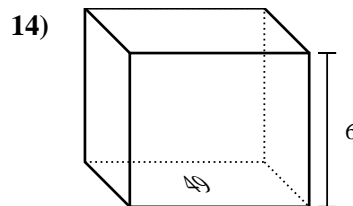
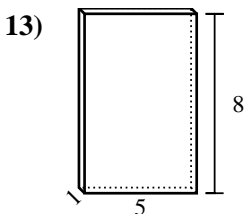
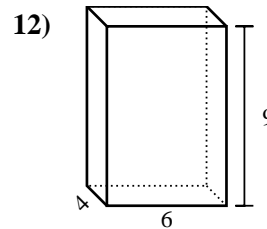
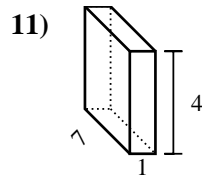
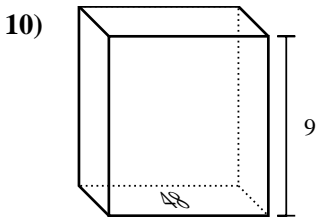
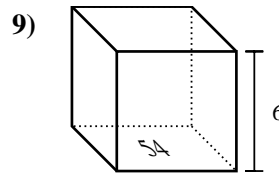
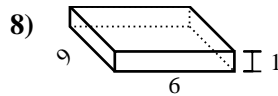
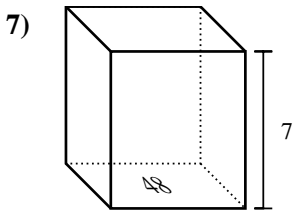
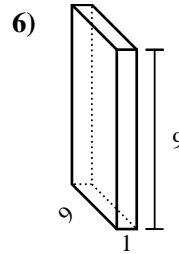
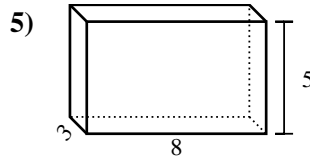
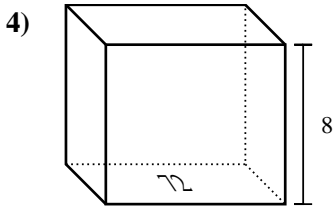
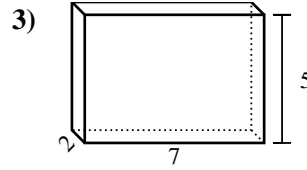
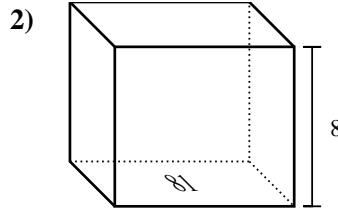
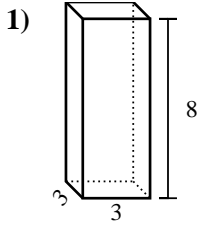
**Respuestas**

1. \_\_\_\_\_
2. \_\_\_\_\_
3. \_\_\_\_\_
4. \_\_\_\_\_
5. \_\_\_\_\_
6. \_\_\_\_\_
7. \_\_\_\_\_
8. \_\_\_\_\_
9. \_\_\_\_\_
10. \_\_\_\_\_
11. \_\_\_\_\_
12. \_\_\_\_\_
13. \_\_\_\_\_
14. \_\_\_\_\_
15. \_\_\_\_\_



Encontrar el volumen de cada prisma rectangular. Recuerda  $V = \text{Base} \times \text{Altura}$  y

$V = \text{Largo} \times \text{ancho} \times \text{alto}$ .



**Respuestas**

1. 72 cm<sup>3</sup>

2. 648 cm<sup>3</sup>

3. 70 cm<sup>3</sup>

4. 576 cm<sup>3</sup>

5. 120 cm<sup>3</sup>

6. 81 cm<sup>3</sup>

7. 336 cm<sup>3</sup>

8. 54 cm<sup>3</sup>

9. 324 cm<sup>3</sup>

10. 432 cm<sup>3</sup>

11. 28 cm<sup>3</sup>

12. 216 cm<sup>3</sup>

13. 40 cm<sup>3</sup>

14. 294 cm<sup>3</sup>

15. 294 cm<sup>3</sup>