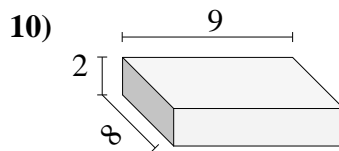
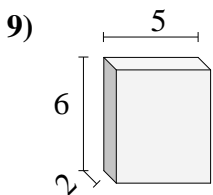
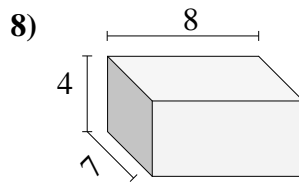
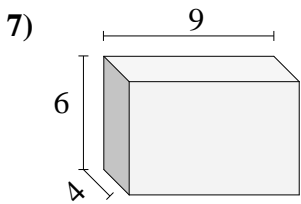
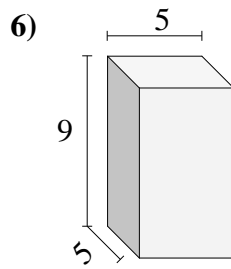
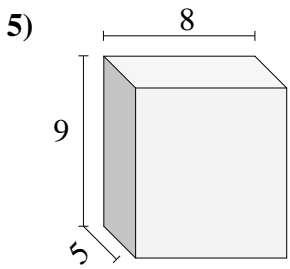
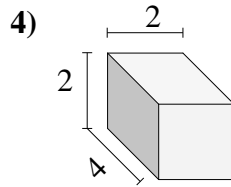
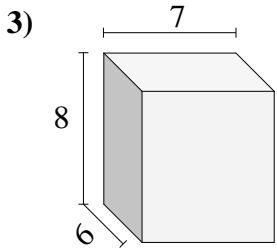
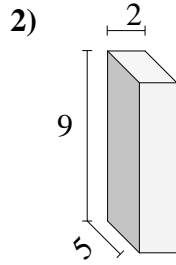
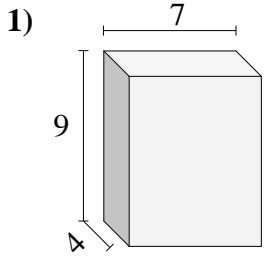




Encontrar el volumen de cada prisma rectangular. En cm (no estan a escala).



**Respuestas**

1. \_\_\_\_\_

2. \_\_\_\_\_

3. \_\_\_\_\_

4. \_\_\_\_\_

5. \_\_\_\_\_

6. \_\_\_\_\_

7. \_\_\_\_\_

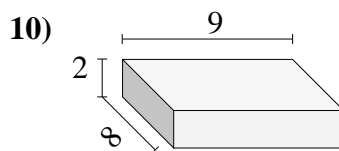
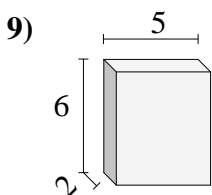
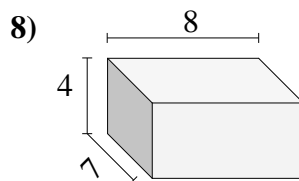
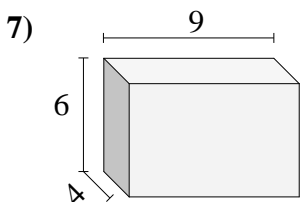
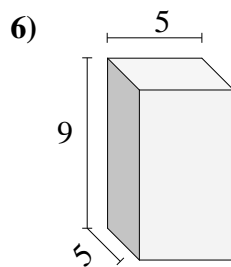
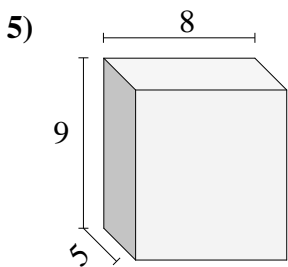
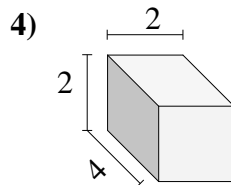
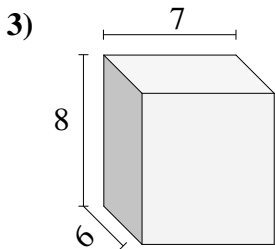
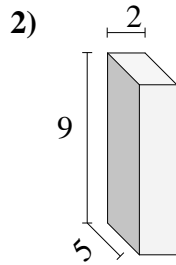
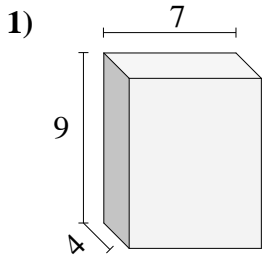
8. \_\_\_\_\_

9. \_\_\_\_\_

10. \_\_\_\_\_



Encontrar el volumen de cada prisma rectangular. En cm (no estan a escala).



**Respuestas**

1. 252 cm<sup>3</sup>
2. 90 cm<sup>3</sup>
3. 336 cm<sup>3</sup>
4. 16 cm<sup>3</sup>
5. 360 cm<sup>3</sup>
6. 225 cm<sup>3</sup>
7. 216 cm<sup>3</sup>
8. 224 cm<sup>3</sup>
9. 60 cm<sup>3</sup>
10. 144 cm<sup>3</sup>