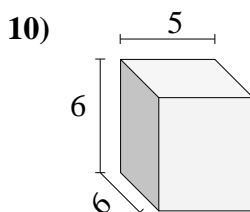
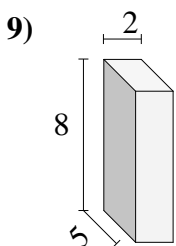
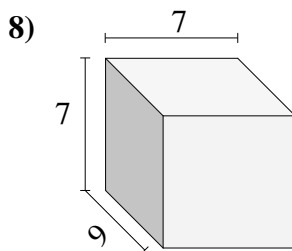
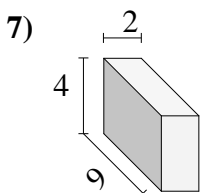
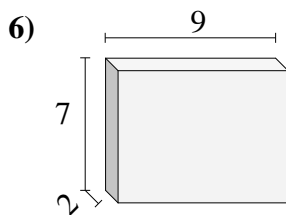
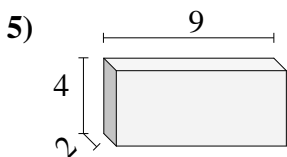
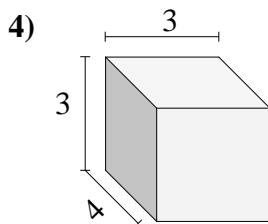
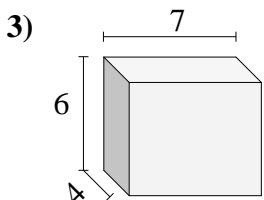
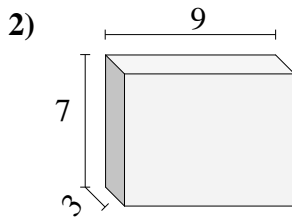
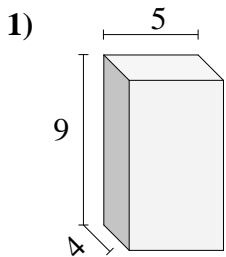




Encontrar el volumen de cada prisma rectangular. En cm (no estan a escala).



Respuestas

1. _____

2. _____

3. _____

4. _____

5. _____

6. _____

7. _____

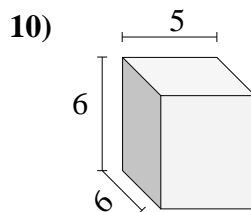
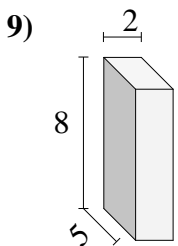
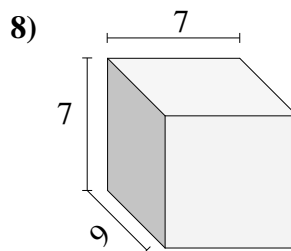
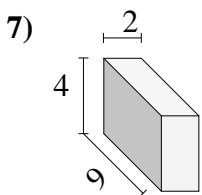
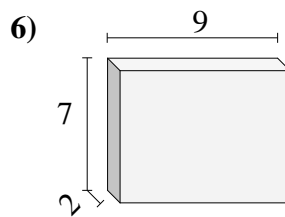
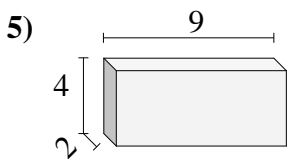
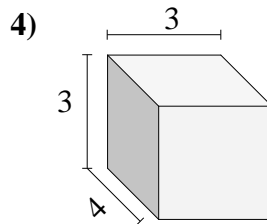
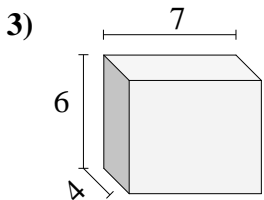
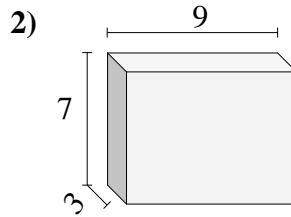
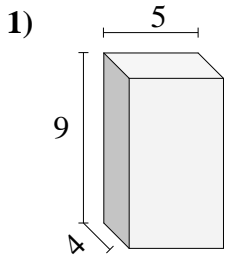
8. _____

9. _____

10. _____



Encontrar el volumen de cada prisma rectangular. En cm (no estan a escala).

**Respuestas**1. 180 cm³2. 189 cm³3. 168 cm³4. 36 cm³5. 72 cm³6. 126 cm³7. 72 cm³8. 441 cm³9. 80 cm³10. 180 cm³