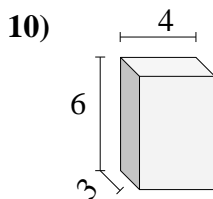
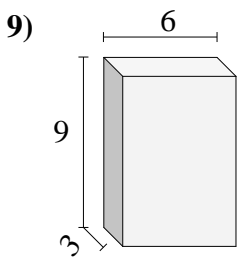
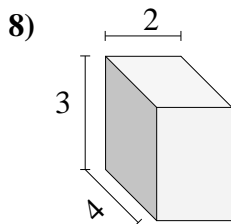
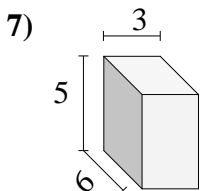
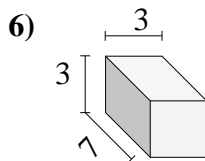
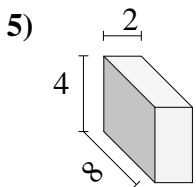
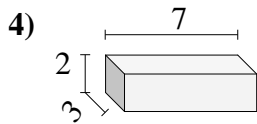
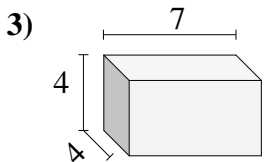
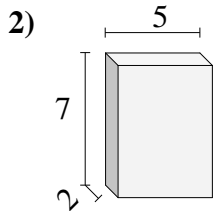
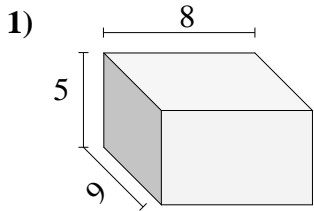




Encontrar el volumen de cada prisma rectangular. En cm (no estan a escala).

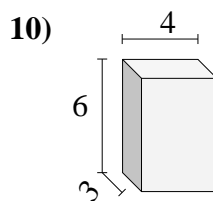
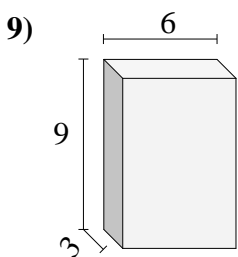
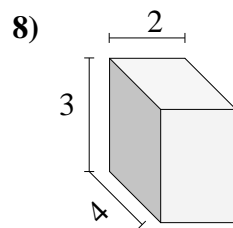
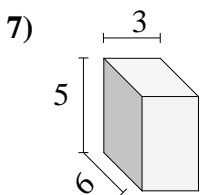
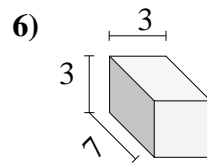
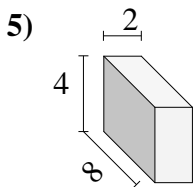
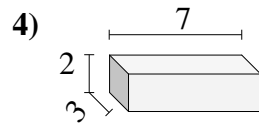
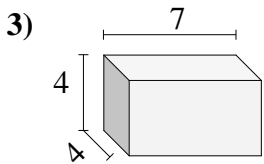
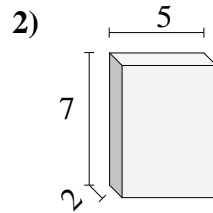
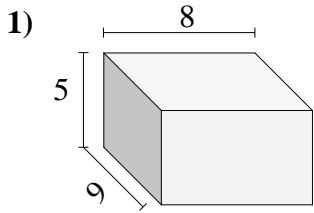


Respuestas

1. _____
2. _____
3. _____
4. _____
5. _____
6. _____
7. _____
8. _____
9. _____
10. _____



Encontrar el volumen de cada prisma rectangular. En cm (no estan a escala).

**Respuestas**1. 360 cm³2. 70 cm³3. 112 cm³4. 42 cm³5. 64 cm³6. 63 cm³7. 90 cm³8. 24 cm³9. 162 cm³10. 72 cm³