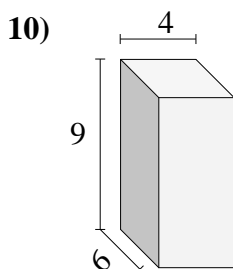
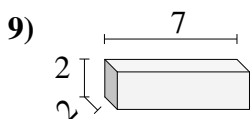
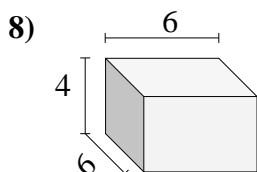
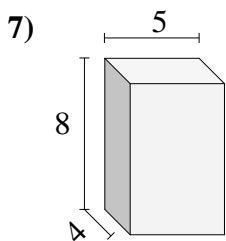
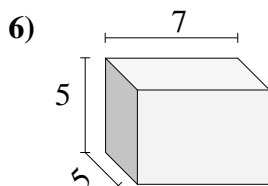
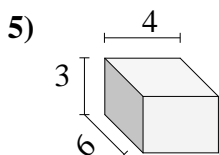
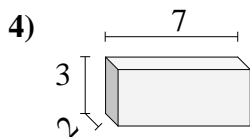
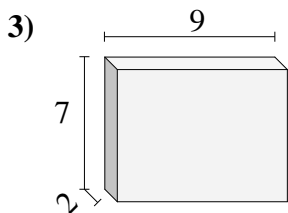
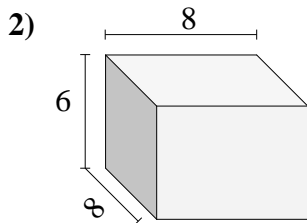
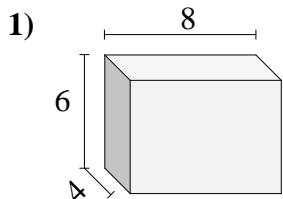




Encontrar el volumen de cada prisma rectangular. En cm (no estan a escala).

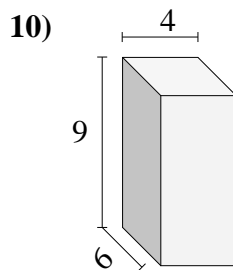
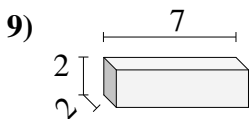
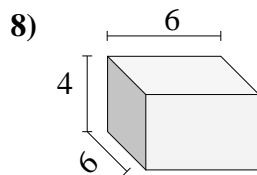
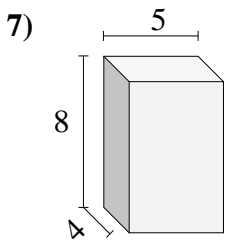
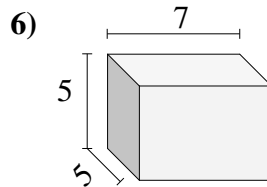
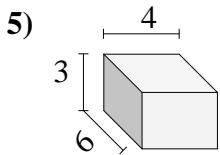
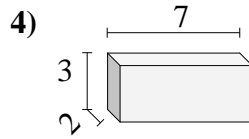
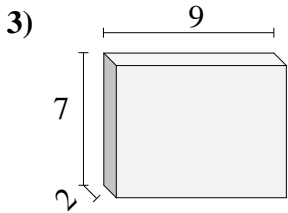
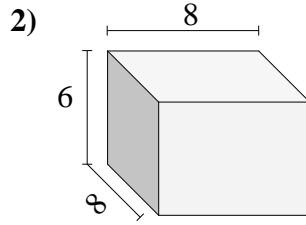
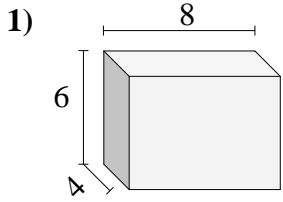


Respuestas

- 1. _____
- 2. _____
- 3. _____
- 4. _____
- 5. _____
- 6. _____
- 7. _____
- 8. _____
- 9. _____
- 10. _____



Encontrar el volumen de cada prisma rectangular. En cm (no estan a escala).



Respuestas

1. 192 cm³
2. 384 cm³
3. 126 cm³
4. 42 cm³
5. 72 cm³
6. 175 cm³
7. 160 cm³
8. 144 cm³
9. 28 cm³
10. 216 cm³