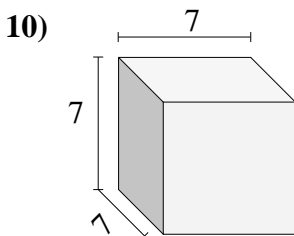
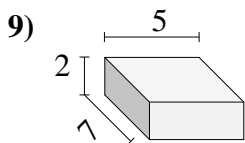
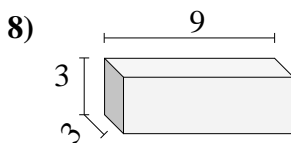
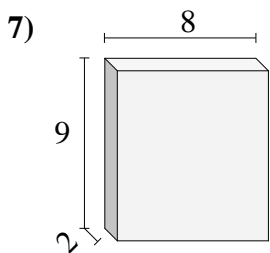
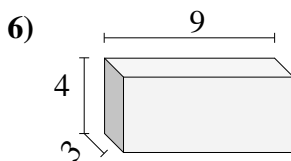
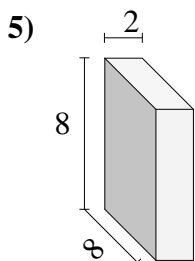
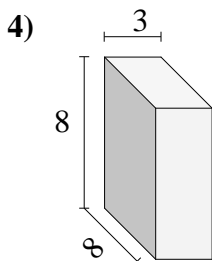
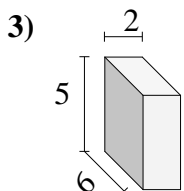
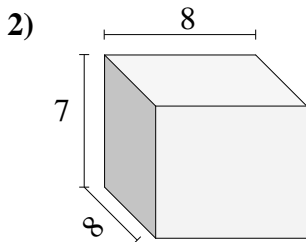
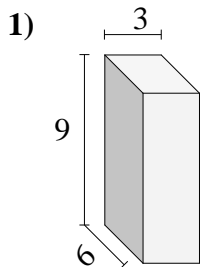




Encontrar el volumen de cada prisma rectangular. En cm (no estan a escala).

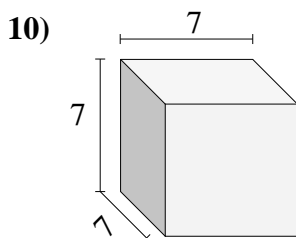
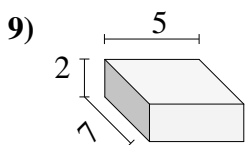
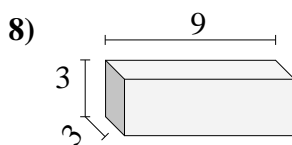
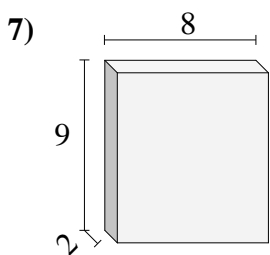
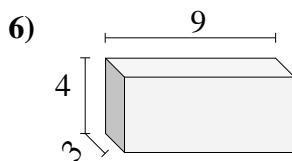
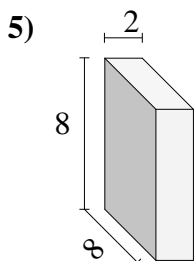
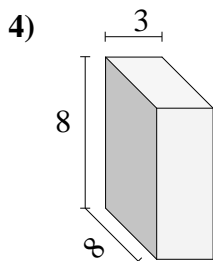
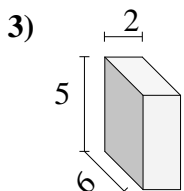
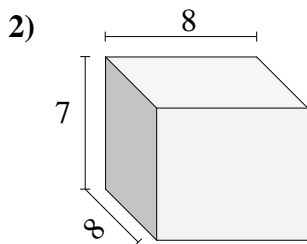
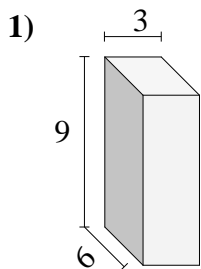


Respuestas

- 1. _____
- 2. _____
- 3. _____
- 4. _____
- 5. _____
- 6. _____
- 7. _____
- 8. _____
- 9. _____
- 10. _____



Encontrar el volumen de cada prisma rectangular. En cm (no estan a escala).



Respuestas

1. 162 cm³

2. 448 cm³

3. 60 cm³

4. 192 cm³

5. 128 cm³

6. 108 cm³

7. 144 cm³

8. 81 cm³

9. 70 cm³

10. 343 cm³