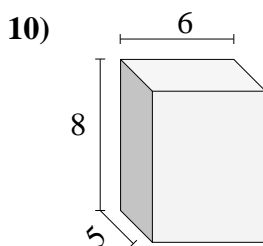
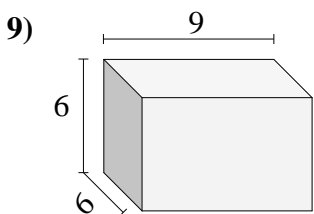
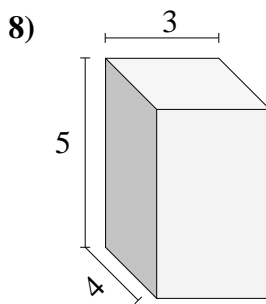
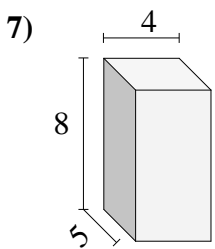
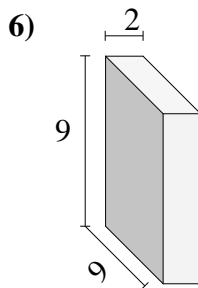
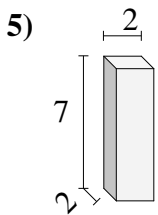
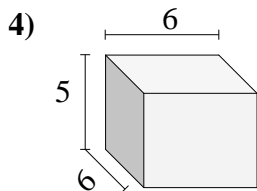
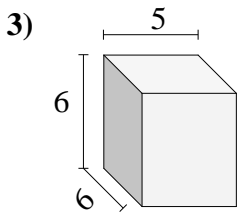
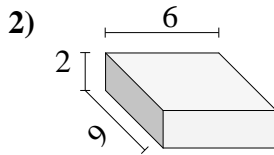
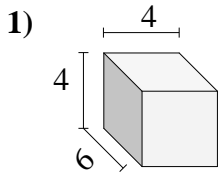




Encontrar el volumen de cada prisma rectangular. En cm (no estan a escala).

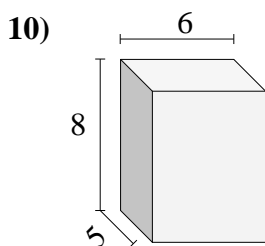
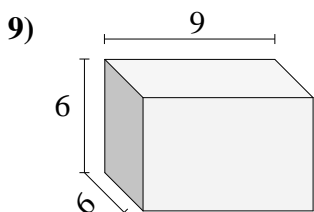
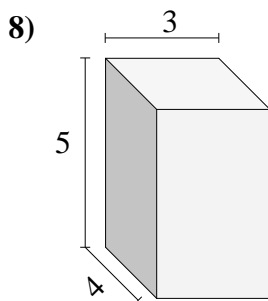
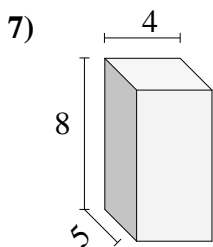
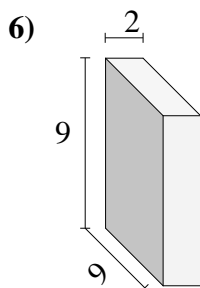
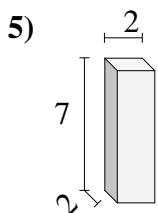
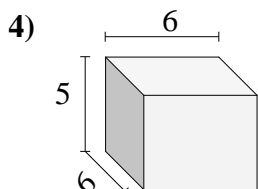
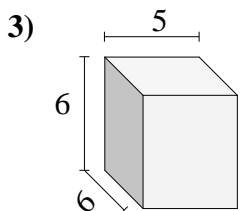
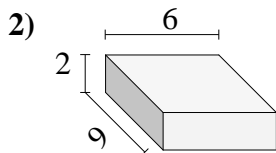
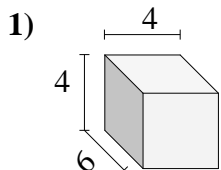


**Respuestas**

- 1. \_\_\_\_\_
- 2. \_\_\_\_\_
- 3. \_\_\_\_\_
- 4. \_\_\_\_\_
- 5. \_\_\_\_\_
- 6. \_\_\_\_\_
- 7. \_\_\_\_\_
- 8. \_\_\_\_\_
- 9. \_\_\_\_\_
- 10. \_\_\_\_\_



Encontrar el volumen de cada prisma rectangular. En cm (no estan a escala).



**Respuestas**

1. 96 cm<sup>3</sup>

2. 108 cm<sup>3</sup>

3. 180 cm<sup>3</sup>

4. 180 cm<sup>3</sup>

5. 28 cm<sup>3</sup>

6. 162 cm<sup>3</sup>

7. 160 cm<sup>3</sup>

8. 60 cm<sup>3</sup>

9. 324 cm<sup>3</sup>

10. 240 cm<sup>3</sup>