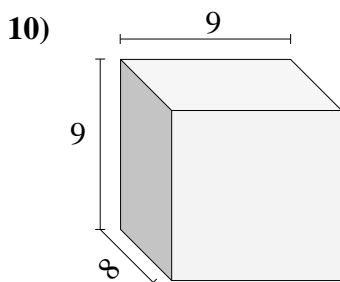
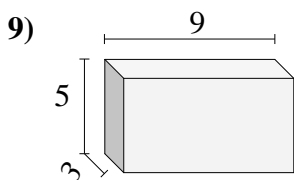
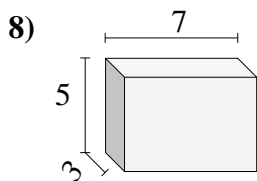
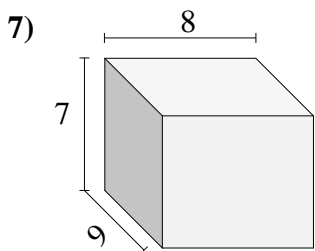
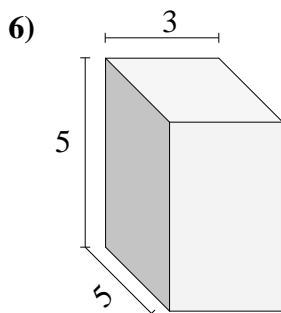
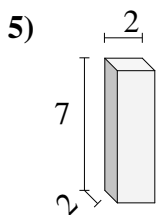
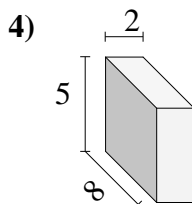
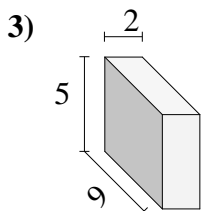
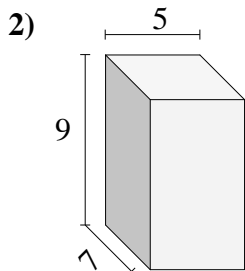
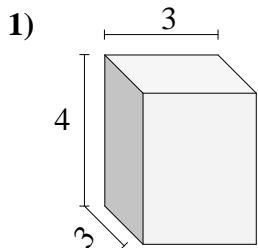




Encontrar el volumen de cada prisma rectangular. En cm (no estan a escala).



Respuestas

1. _____

2. _____

3. _____

4. _____

5. _____

6. _____

7. _____

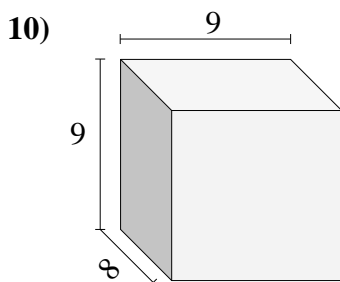
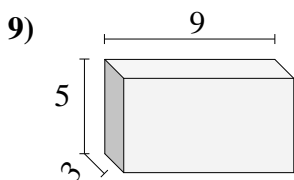
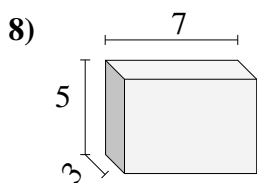
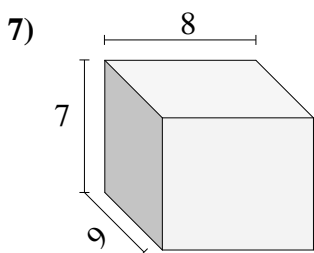
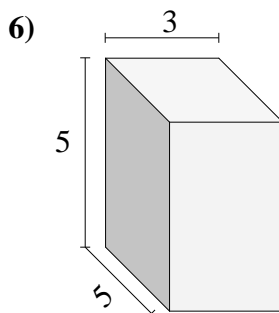
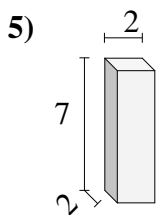
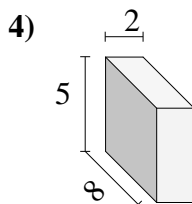
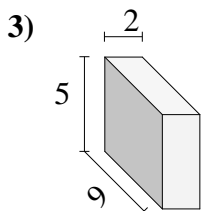
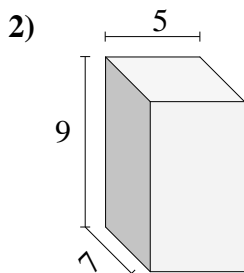
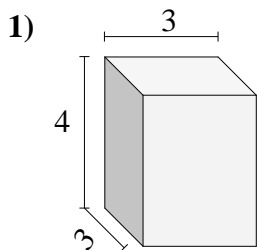
8. _____

9. _____

10. _____



Encontrar el volumen de cada prisma rectangular. En cm (no estan a escala).



Respuestas

1. 36 cm³

2. 315 cm³

3. 90 cm³

4. 80 cm³

5. 28 cm³

6. 75 cm³

7. 504 cm³

8. 105 cm³

9. 135 cm³

10. 648 cm³