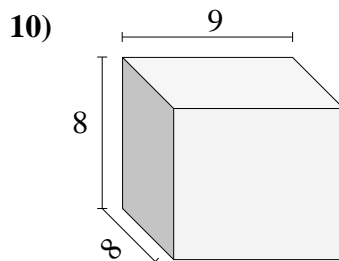
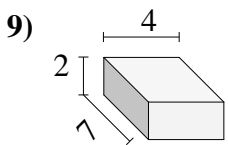
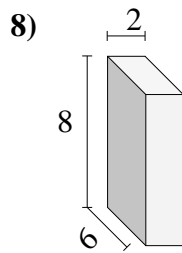
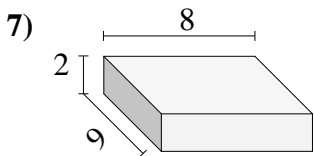
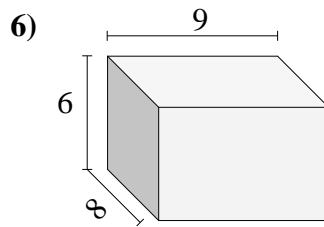
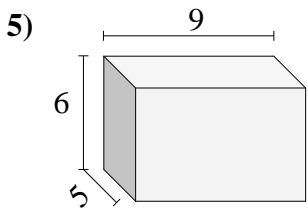
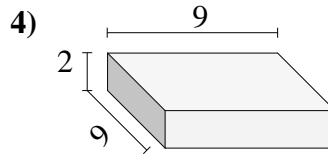
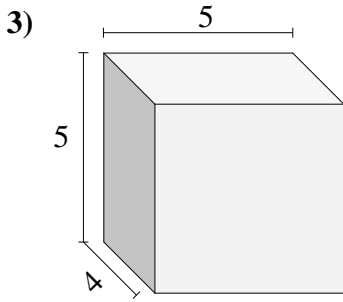
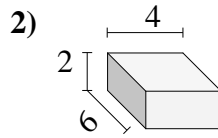
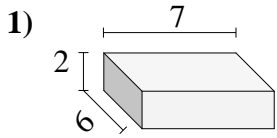




Encontrar el volumen de cada prisma rectangular. En cm (no estan a escala).

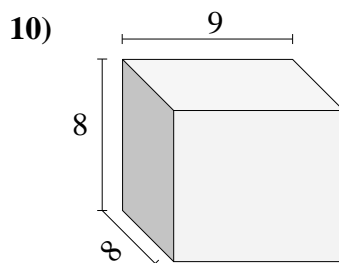
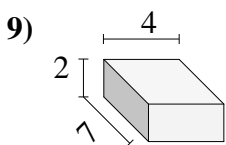
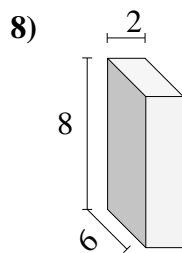
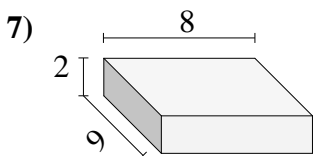
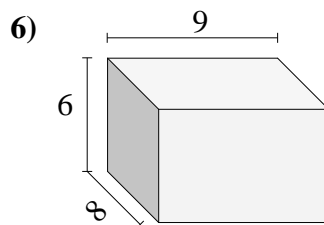
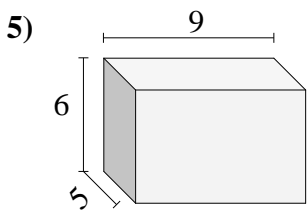
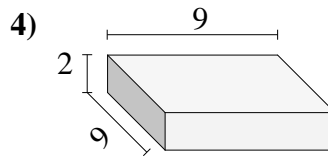
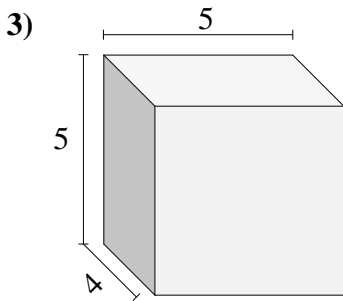
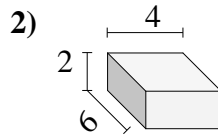
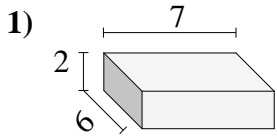


Respuestas

- 1. _____
- 2. _____
- 3. _____
- 4. _____
- 5. _____
- 6. _____
- 7. _____
- 8. _____
- 9. _____
- 10. _____



Encontrar el volumen de cada prisma rectangular. En cm (no estan a escala).



Respuestas

1. 84 cm³
2. 48 cm³
3. 100 cm³
4. 162 cm³
5. 270 cm³
6. 432 cm³
7. 144 cm³
8. 96 cm³
9. 56 cm³
10. 576 cm³