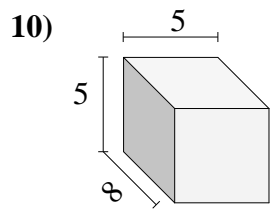
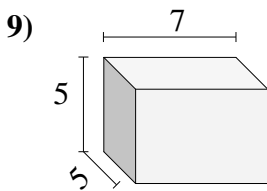
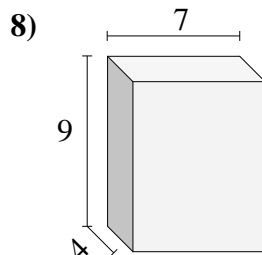
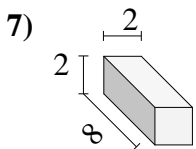
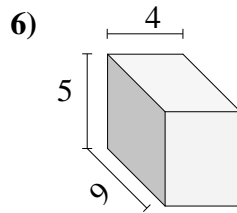
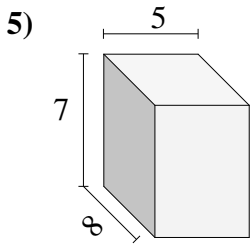
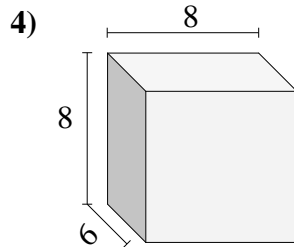
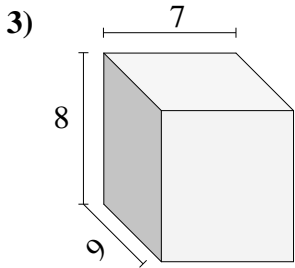
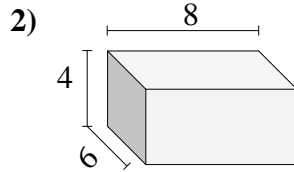
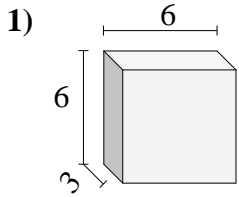




Encontrar el volumen de cada prisma rectangular. En cm (no estan a escala).

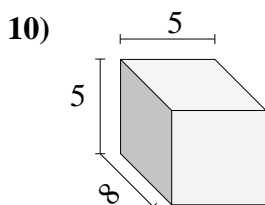
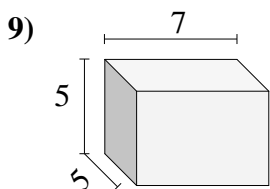
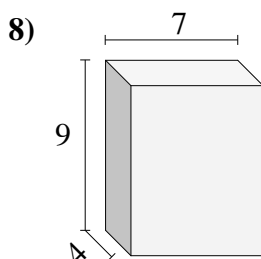
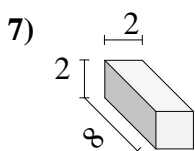
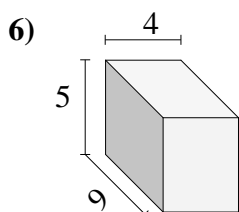
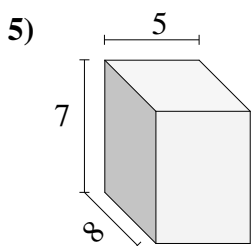
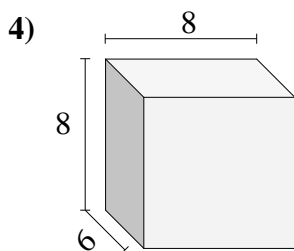
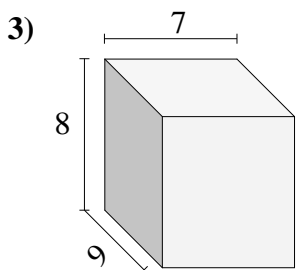
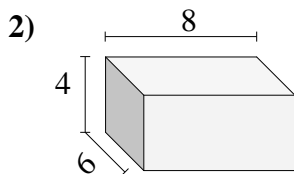
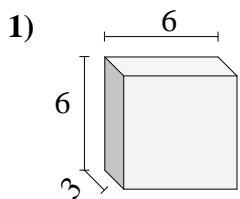


Respuestas

- 1. _____
- 2. _____
- 3. _____
- 4. _____
- 5. _____
- 6. _____
- 7. _____
- 8. _____
- 9. _____
- 10. _____



Encontrar el volumen de cada prisma rectangular. En cm (no estan a escala).



Respuestas

1. 108 cm³

2. 192 cm³

3. 504 cm³

4. 384 cm³

5. 280 cm³

6. 180 cm³

7. 32 cm³

8. 252 cm³

9. 175 cm³

10. 200 cm³