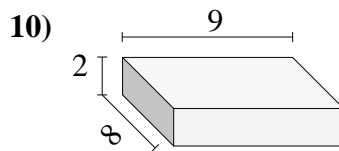
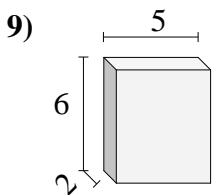
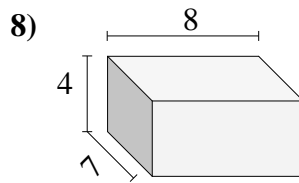
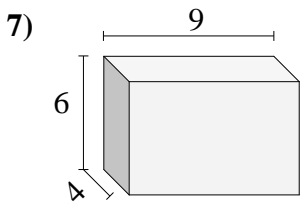
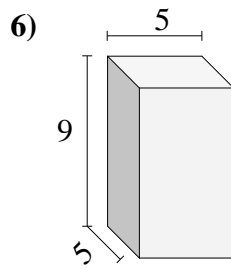
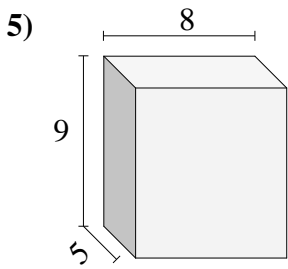
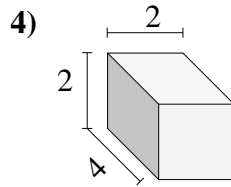
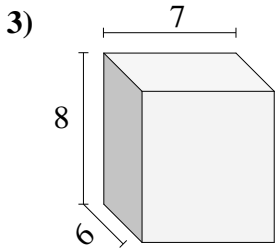
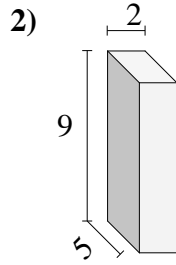
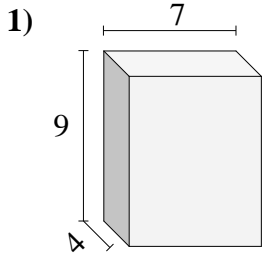




Encontrar el volumen de cada prisma rectangular. En cm (no estan a escala).

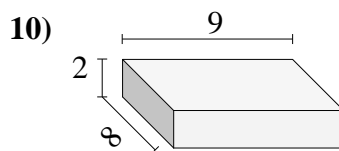
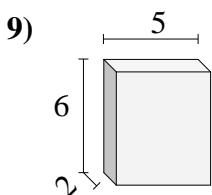
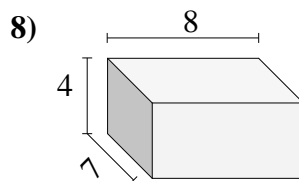
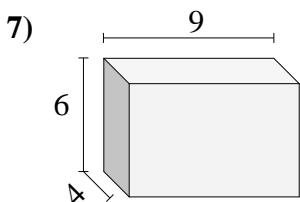
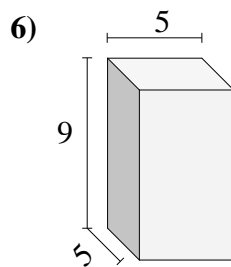
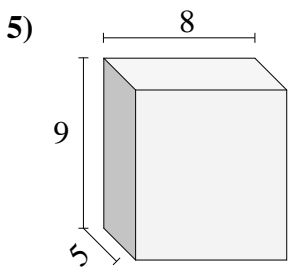
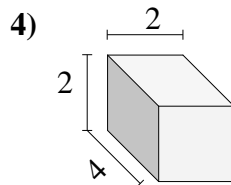
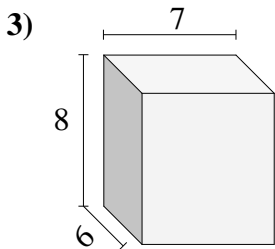
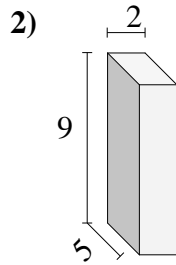
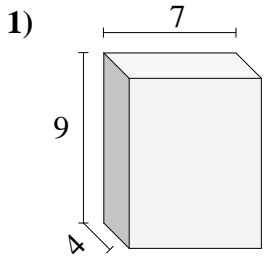


Respuestas

- 1. _____
- 2. _____
- 3. _____
- 4. _____
- 5. _____
- 6. _____
- 7. _____
- 8. _____
- 9. _____
- 10. _____



Encontrar el volumen de cada prisma rectangular. En cm (no estan a escala).

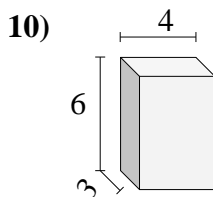
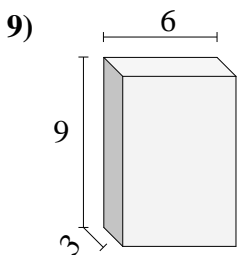
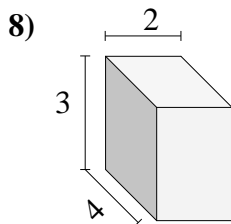
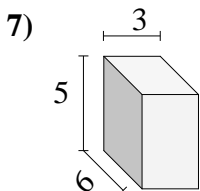
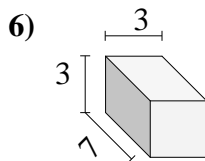
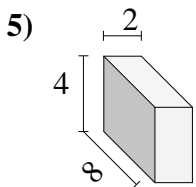
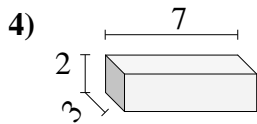
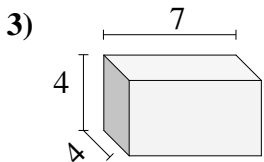
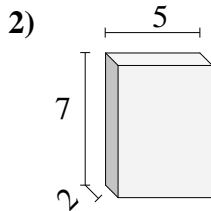
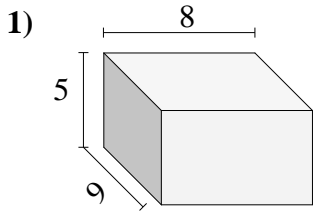


Respuestas

1. 252 cm³
2. 90 cm³
3. 336 cm³
4. 16 cm³
5. 360 cm³
6. 225 cm³
7. 216 cm³
8. 224 cm³
9. 60 cm³
10. 144 cm³



Encontrar el volumen de cada prisma rectangular. En cm (no estan a escala).

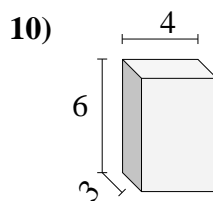
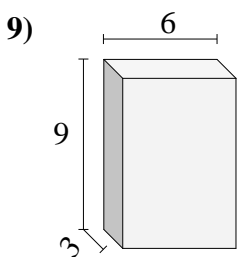
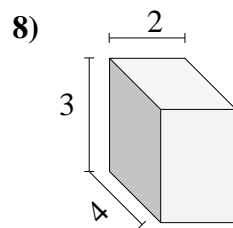
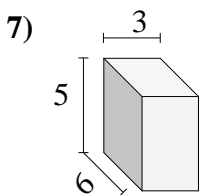
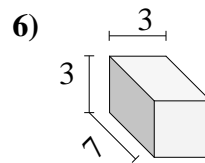
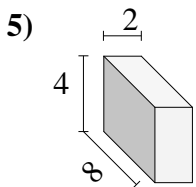
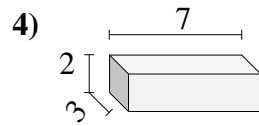
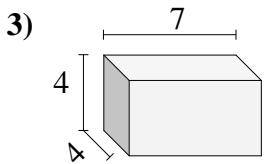
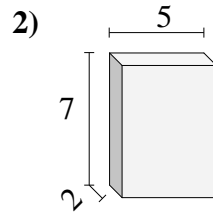
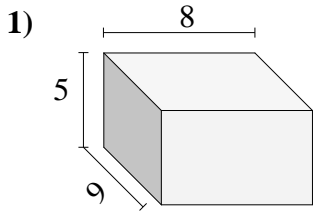


Respuestas

- 1. _____
- 2. _____
- 3. _____
- 4. _____
- 5. _____
- 6. _____
- 7. _____
- 8. _____
- 9. _____
- 10. _____

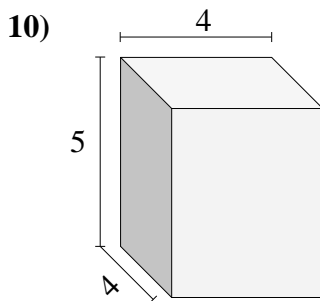
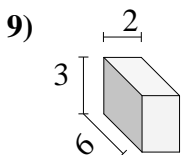
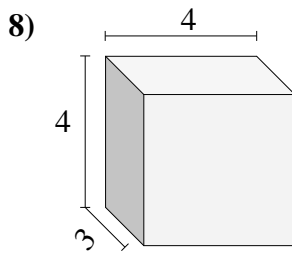
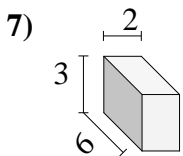
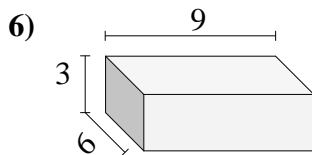
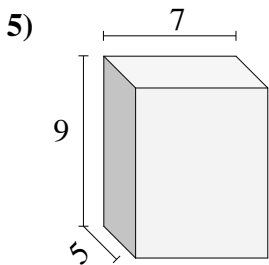
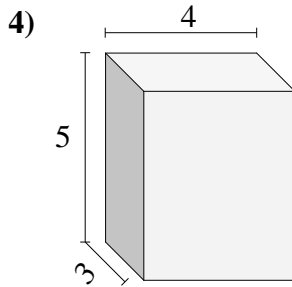
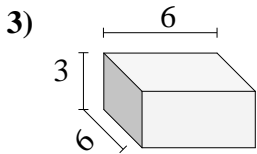
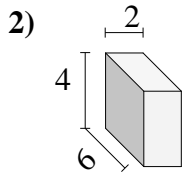
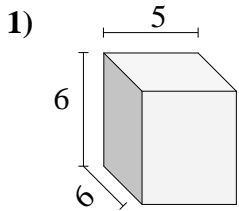


Encontrar el volumen de cada prisma rectangular. En cm (no estan a escala).

**Respuestas**1. 360 cm³2. 70 cm³3. 112 cm³4. 42 cm³5. 64 cm³6. 63 cm³7. 90 cm³8. 24 cm³9. 162 cm³10. 72 cm³



Encontrar el volumen de cada prisma rectangular. En cm (no estan a escala).

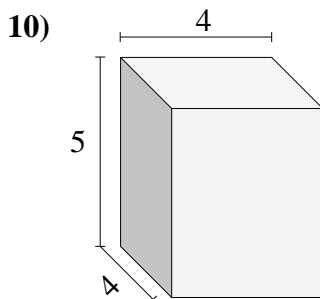
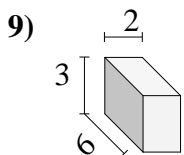
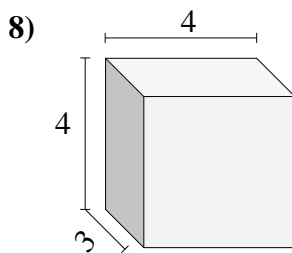
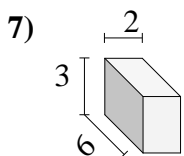
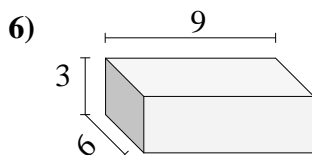
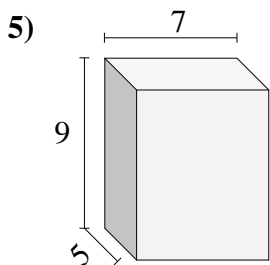
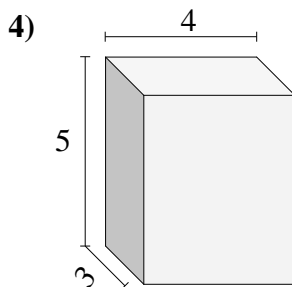
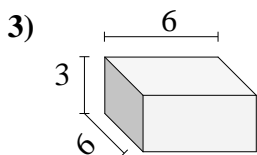
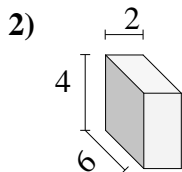
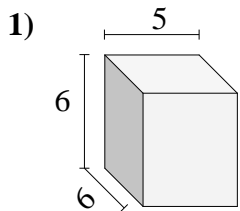


Respuestas

- 1. _____
- 2. _____
- 3. _____
- 4. _____
- 5. _____
- 6. _____
- 7. _____
- 8. _____
- 9. _____
- 10. _____



Encontrar el volumen de cada prisma rectangular. En cm (no estan a escala).



Respuestas

1. 180 cm³

2. 48 cm³

3. 108 cm³

4. 60 cm³

5. 315 cm³

6. 162 cm³

7. 36 cm³

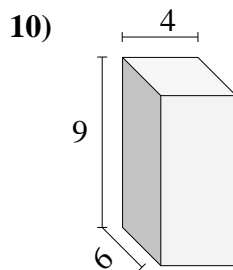
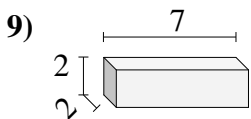
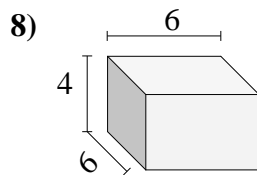
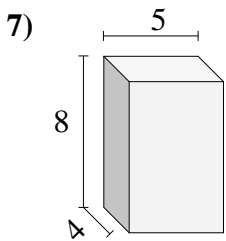
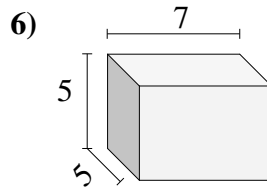
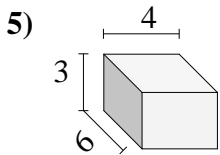
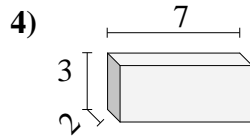
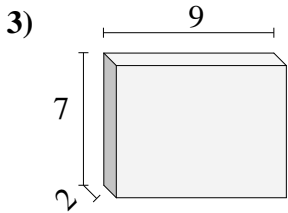
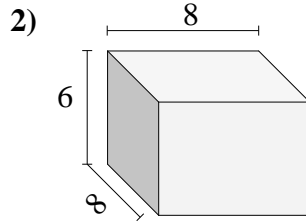
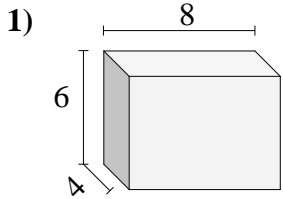
8. 48 cm³

9. 36 cm³

10. 80 cm³



Encontrar el volumen de cada prisma rectangular. En cm (no estan a escala).



Respuestas

1. _____

2. _____

3. _____

4. _____

5. _____

6. _____

7. _____

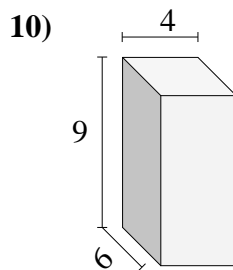
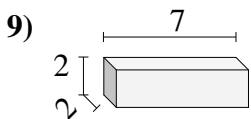
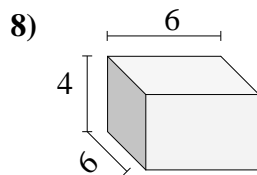
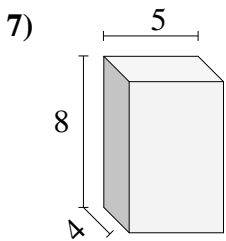
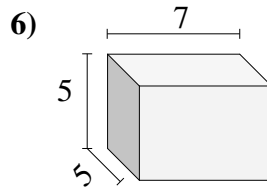
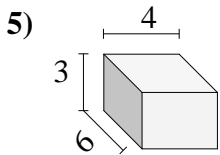
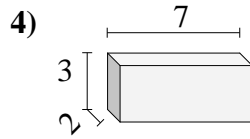
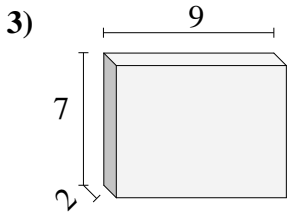
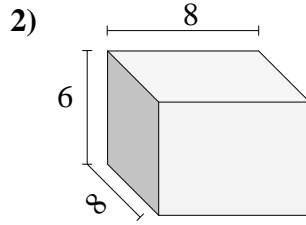
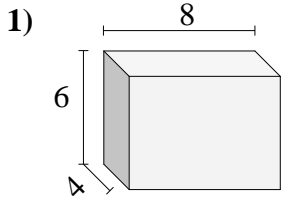
8. _____

9. _____

10. _____



Encontrar el volumen de cada prisma rectangular. En cm (no estan a escala).

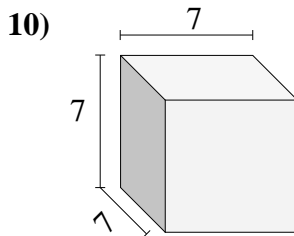
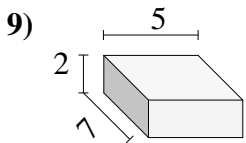
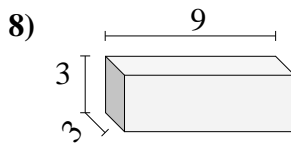
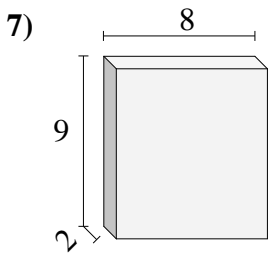
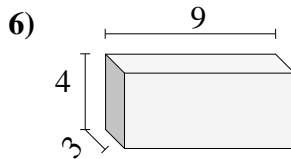
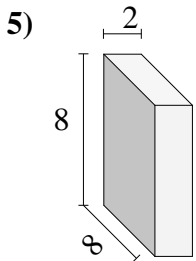
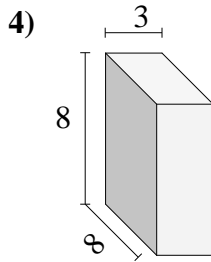
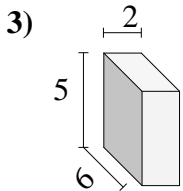
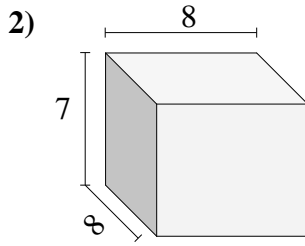
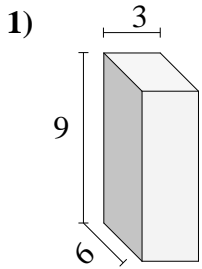


Respuestas

1. 192 cm³
2. 384 cm³
3. 126 cm³
4. 42 cm³
5. 72 cm³
6. 175 cm³
7. 160 cm³
8. 144 cm³
9. 28 cm³
10. 216 cm³



Encontrar el volumen de cada prisma rectangular. En cm (no estan a escala).

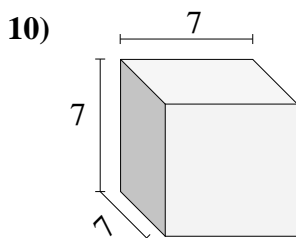
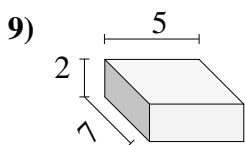
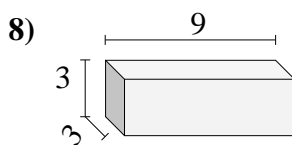
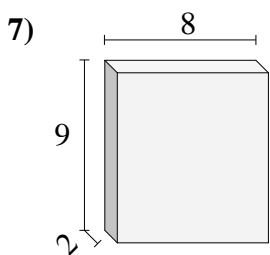
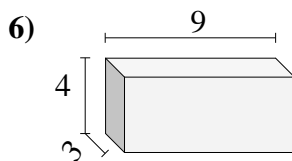
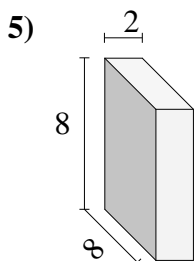
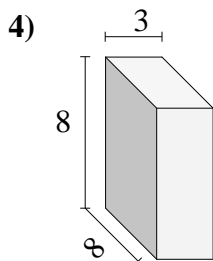
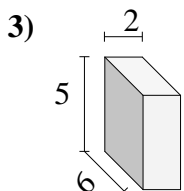
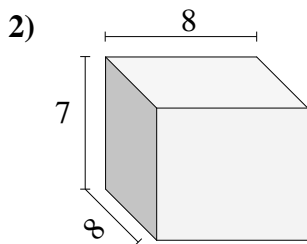
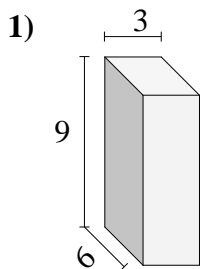


Respuestas

- 1. _____
- 2. _____
- 3. _____
- 4. _____
- 5. _____
- 6. _____
- 7. _____
- 8. _____
- 9. _____
- 10. _____



Encontrar el volumen de cada prisma rectangular. En cm (no estan a escala).



Respuestas

1. 162 cm³

2. 448 cm³

3. 60 cm³

4. 192 cm³

5. 128 cm³

6. 108 cm³

7. 144 cm³

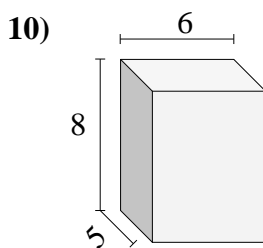
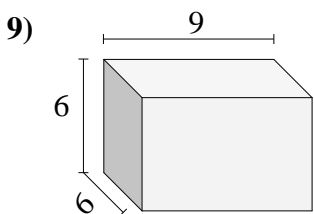
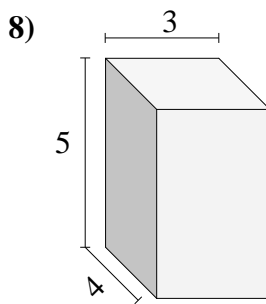
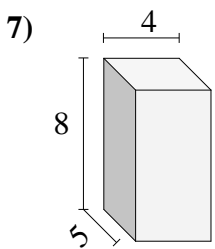
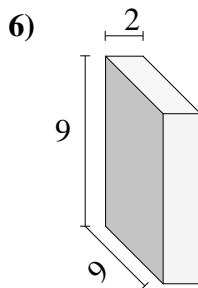
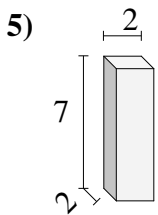
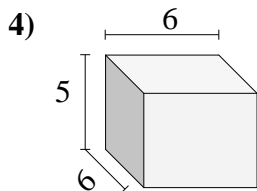
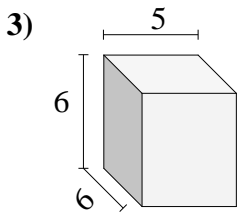
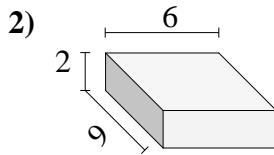
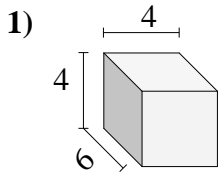
8. 81 cm³

9. 70 cm³

10. 343 cm³



Encontrar el volumen de cada prisma rectangular. En cm (no estan a escala).

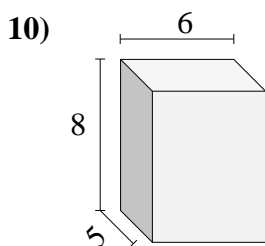
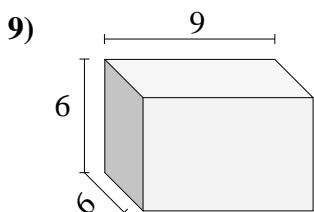
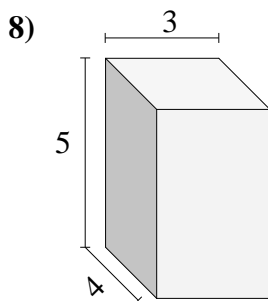
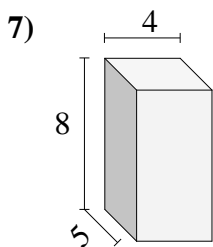
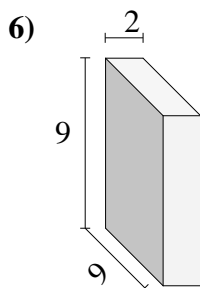
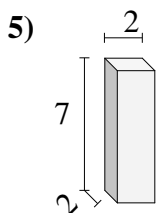
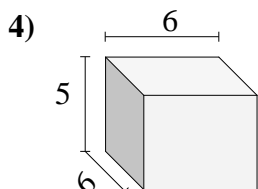
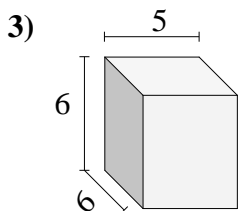
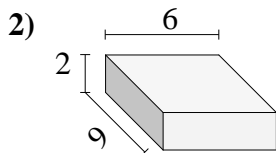
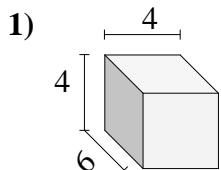


Respuestas

- 1. _____
- 2. _____
- 3. _____
- 4. _____
- 5. _____
- 6. _____
- 7. _____
- 8. _____
- 9. _____
- 10. _____



Encontrar el volumen de cada prisma rectangular. En cm (no estan a escala).



Respuestas

1. 96 cm³

2. 108 cm³

3. 180 cm³

4. 180 cm³

5. 28 cm³

6. 162 cm³

7. 160 cm³

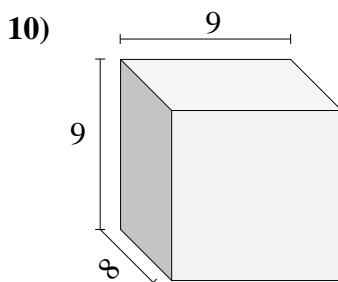
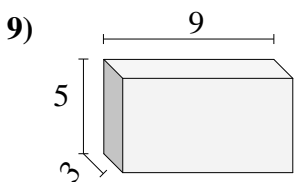
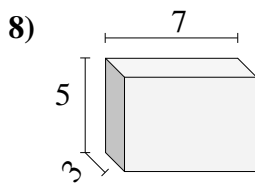
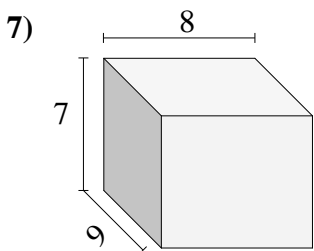
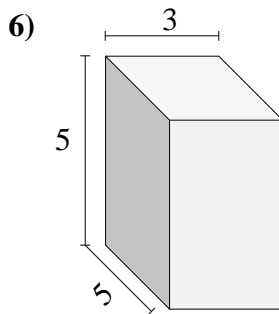
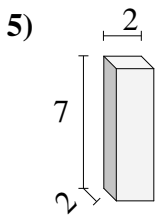
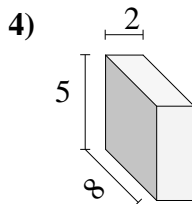
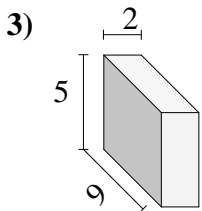
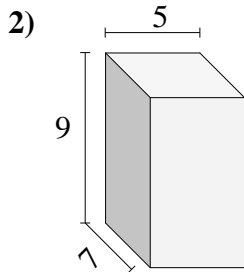
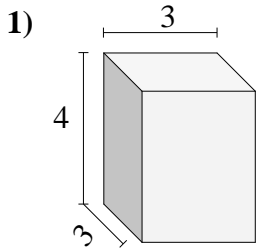
8. 60 cm³

9. 324 cm³

10. 240 cm³



Encontrar el volumen de cada prisma rectangular. En cm (no estan a escala).



Respuestas

1. _____

2. _____

3. _____

4. _____

5. _____

6. _____

7. _____

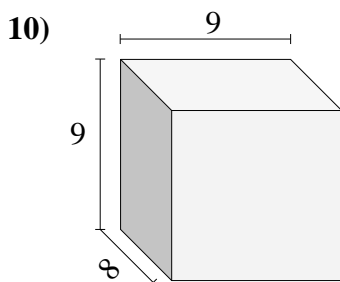
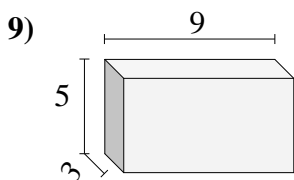
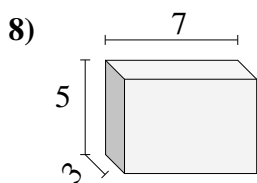
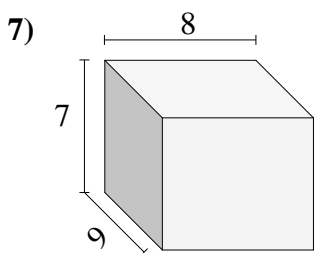
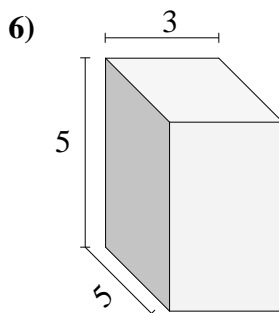
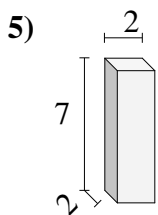
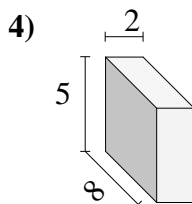
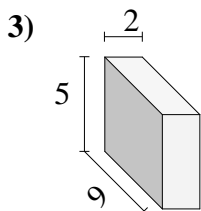
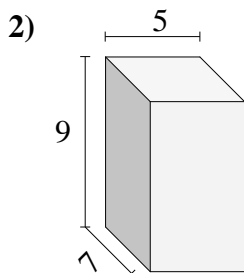
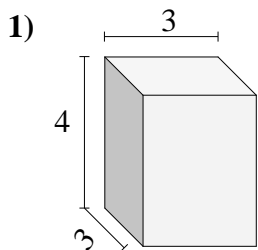
8. _____

9. _____

10. _____



Encontrar el volumen de cada prisma rectangular. En cm (no estan a escala).



Respuestas

1. 36 cm³

2. 315 cm³

3. 90 cm³

4. 80 cm³

5. 28 cm³

6. 75 cm³

7. 504 cm³

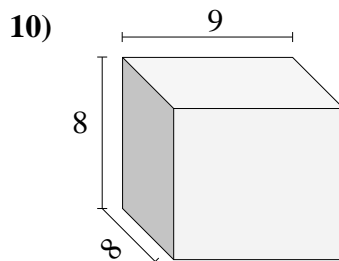
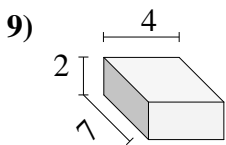
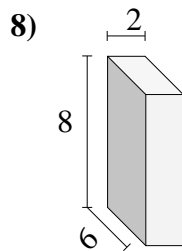
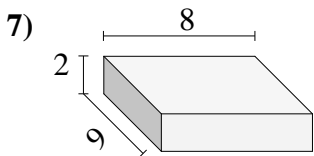
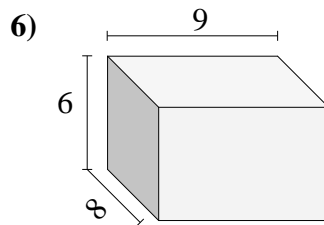
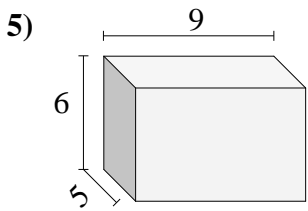
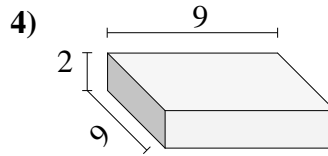
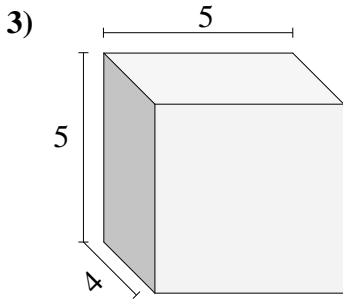
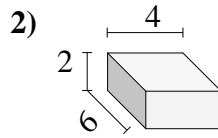
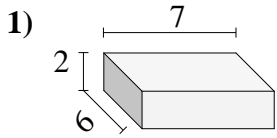
8. 105 cm³

9. 135 cm³

10. 648 cm³



Encontrar el volumen de cada prisma rectangular. En cm (no estan a escala).

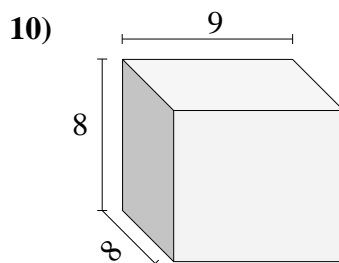
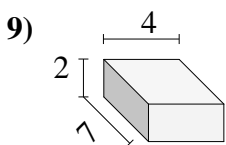
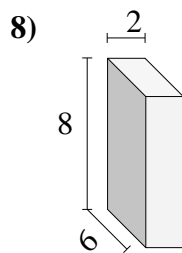
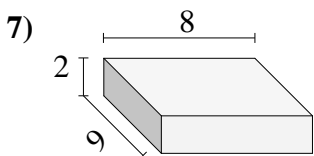
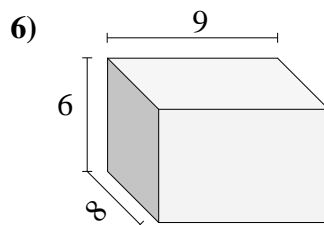
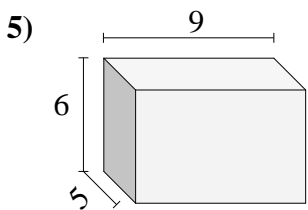
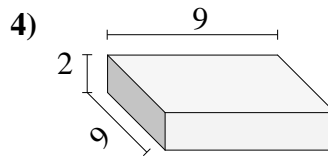
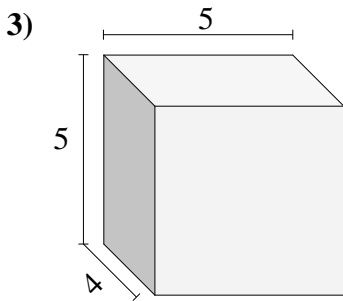
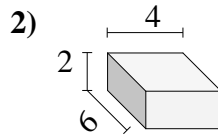
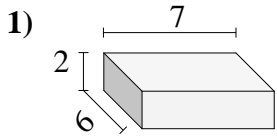


Respuestas

- 1. _____
- 2. _____
- 3. _____
- 4. _____
- 5. _____
- 6. _____
- 7. _____
- 8. _____
- 9. _____
- 10. _____



Encontrar el volumen de cada prisma rectangular. En cm (no estan a escala).

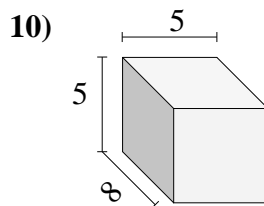
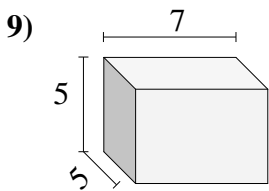
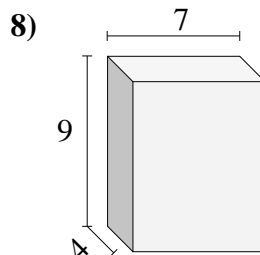
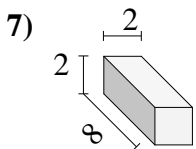
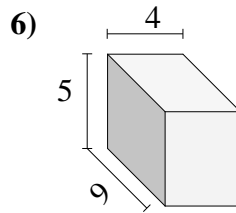
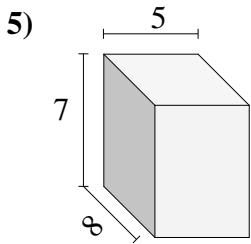
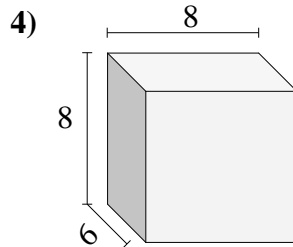
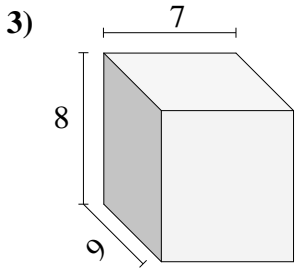
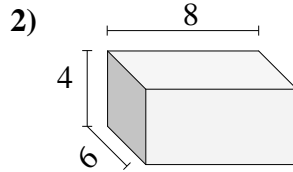
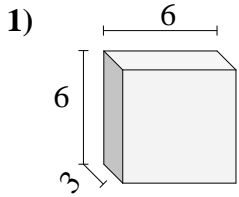


Respuestas

1. 84 cm³
2. 48 cm³
3. 100 cm³
4. 162 cm³
5. 270 cm³
6. 432 cm³
7. 144 cm³
8. 96 cm³
9. 56 cm³
10. 576 cm³



Encontrar el volumen de cada prisma rectangular. En cm (no estan a escala).

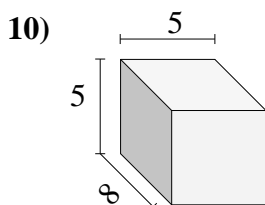
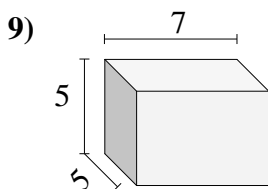
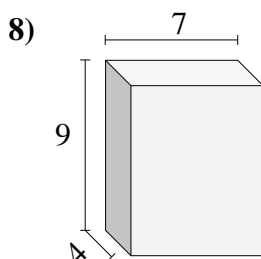
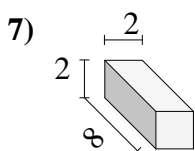
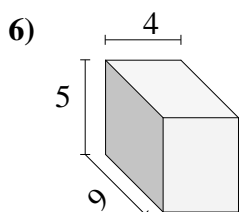
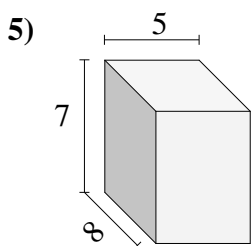
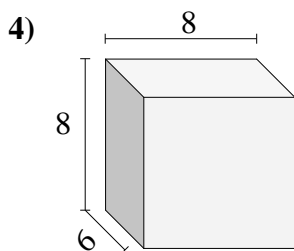
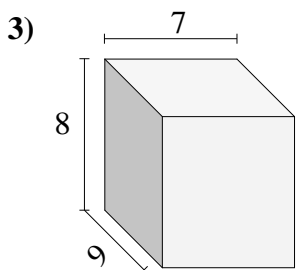
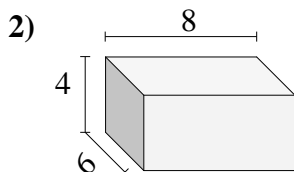
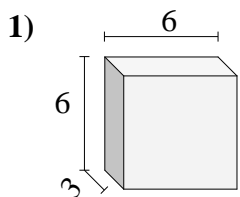


Respuestas

- 1. _____
- 2. _____
- 3. _____
- 4. _____
- 5. _____
- 6. _____
- 7. _____
- 8. _____
- 9. _____
- 10. _____



Encontrar el volumen de cada prisma rectangular. En cm (no estan a escala).



Respuestas

1. 108 cm³

2. 192 cm³

3. 504 cm³

4. 384 cm³

5. 280 cm³

6. 180 cm³

7. 32 cm³

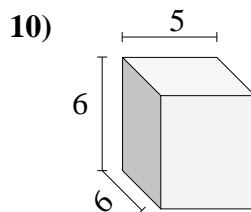
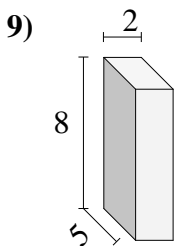
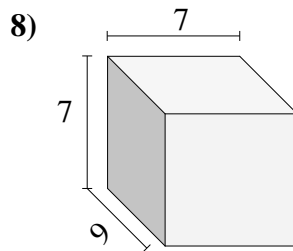
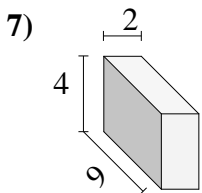
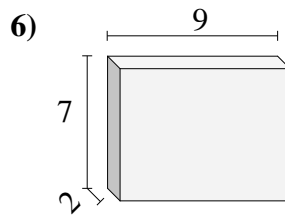
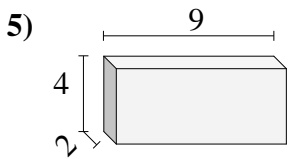
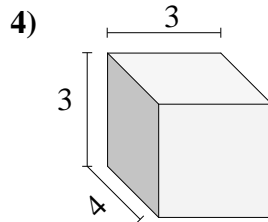
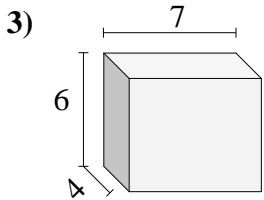
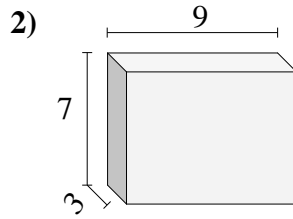
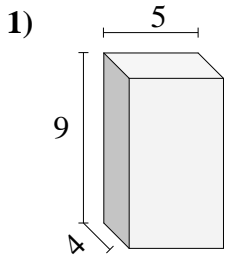
8. 252 cm³

9. 175 cm³

10. 200 cm³



Encontrar el volumen de cada prisma rectangular. En cm (no estan a escala).

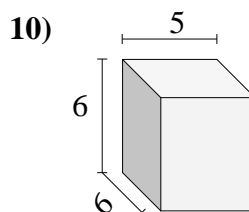
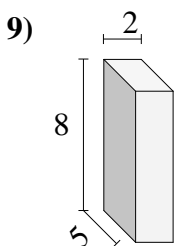
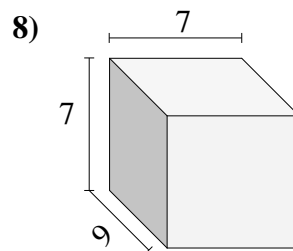
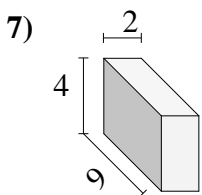
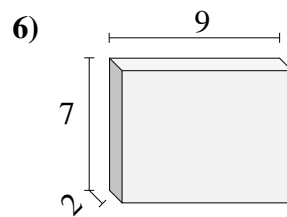
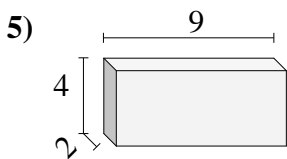
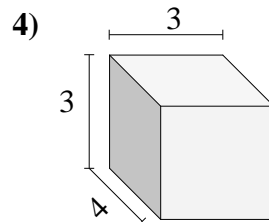
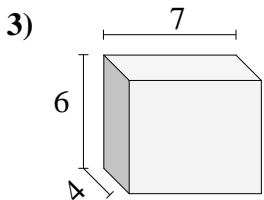
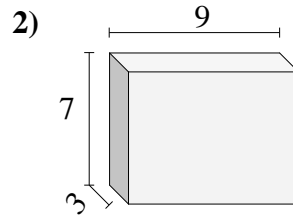
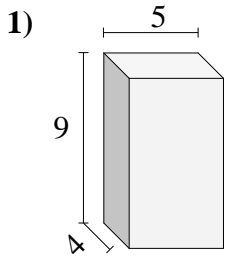


Respuestas

- 1. _____
- 2. _____
- 3. _____
- 4. _____
- 5. _____
- 6. _____
- 7. _____
- 8. _____
- 9. _____
- 10. _____



Encontrar el volumen de cada prisma rectangular. En cm (no estan a escala).

**Respuestas**1. 180 cm³2. 189 cm³3. 168 cm³4. 36 cm³5. 72 cm³6. 126 cm³7. 72 cm³8. 441 cm³9. 80 cm³10. 180 cm³