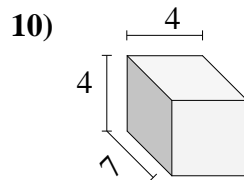
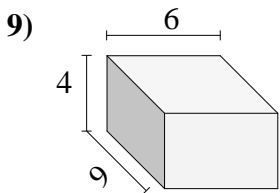
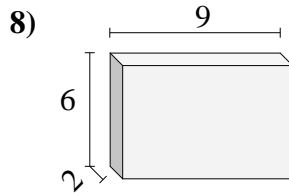
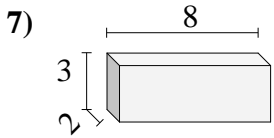
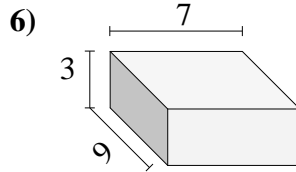
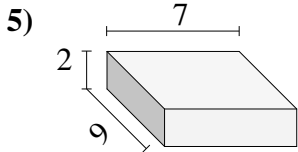
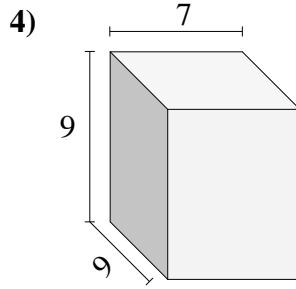
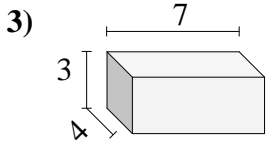
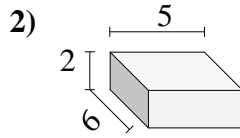
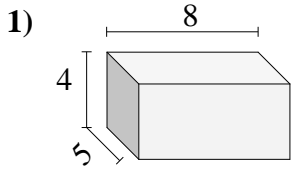




Encontrar el volumen de cada prisma rectangular. En cm (no estan a escala).

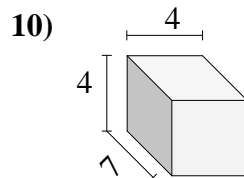
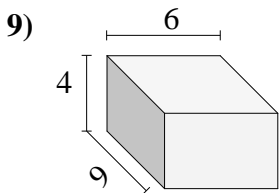
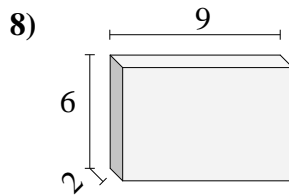
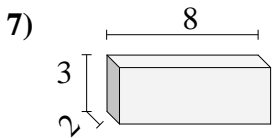
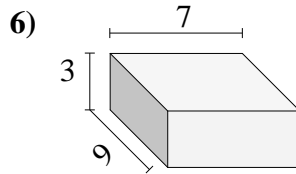
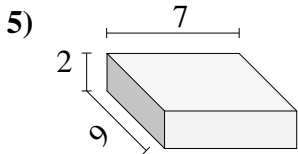
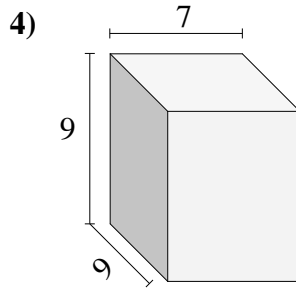
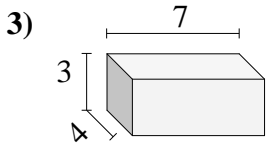
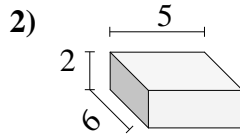
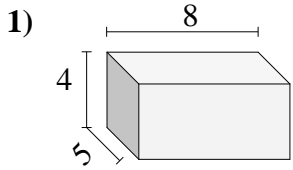


**Respuestas**

- 1. \_\_\_\_\_
- 2. \_\_\_\_\_
- 3. \_\_\_\_\_
- 4. \_\_\_\_\_
- 5. \_\_\_\_\_
- 6. \_\_\_\_\_
- 7. \_\_\_\_\_
- 8. \_\_\_\_\_
- 9. \_\_\_\_\_
- 10. \_\_\_\_\_



Encontrar el volumen de cada prisma rectangular. En cm (no estan a escala).



Respuestas

1. 160

2. 60

3. 84

4. 567

5. 126

6. 189

7. 48

8. 108

9. 216

10. 112