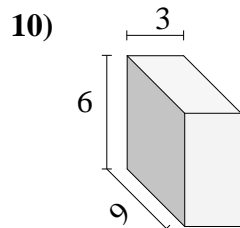
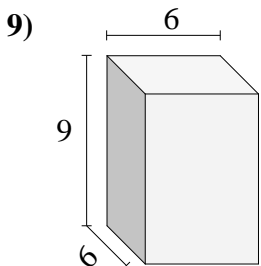
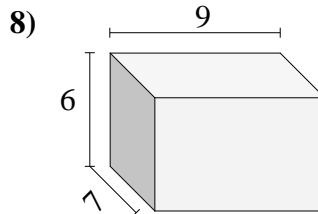
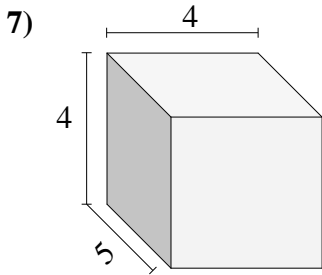
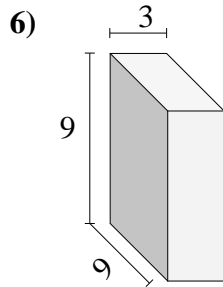
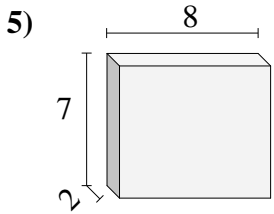
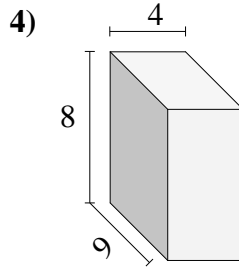
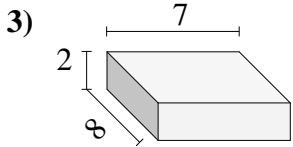
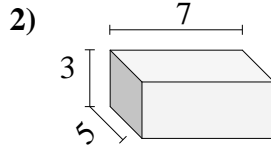
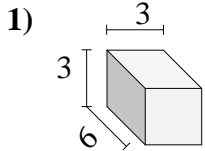




Encontrar el volumen de cada prisma rectangular. En cm (no estan a escala).

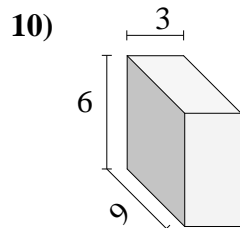
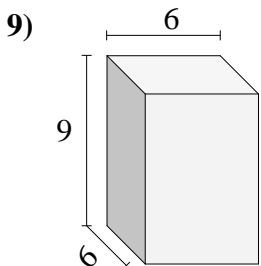
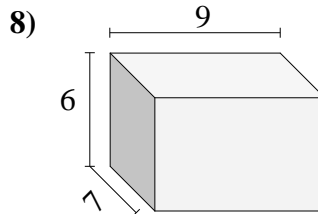
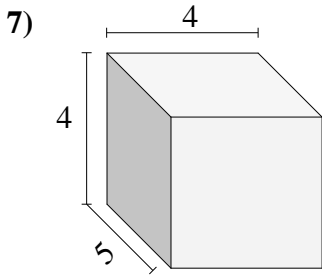
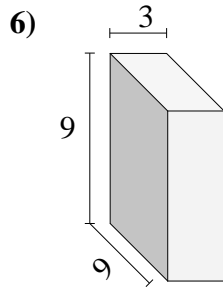
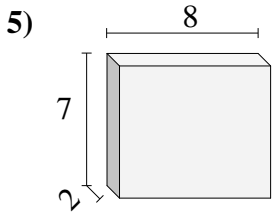
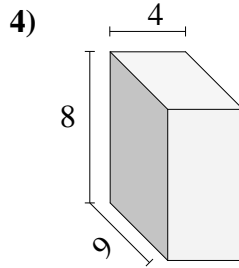
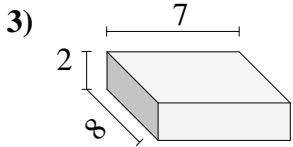
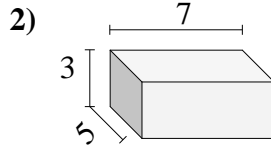
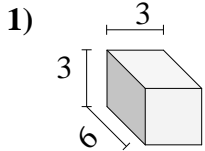


Respuestas

- 1. _____
- 2. _____
- 3. _____
- 4. _____
- 5. _____
- 6. _____
- 7. _____
- 8. _____
- 9. _____
- 10. _____



Encontrar el volumen de cada prisma rectangular. En cm (no estan a escala).



Respuestas

1. 54

2. 105

3. 112

4. 288

5. 112

6. 243

7. 80

8. 378

9. 324

10. 162