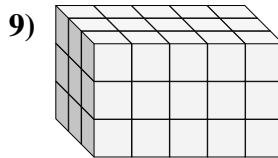
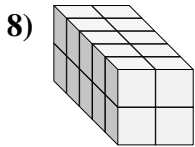
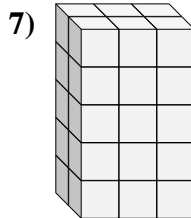
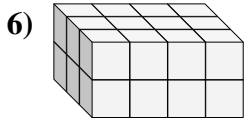
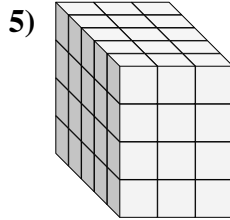
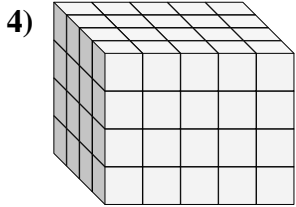
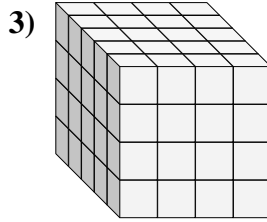
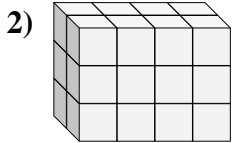
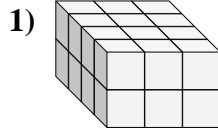
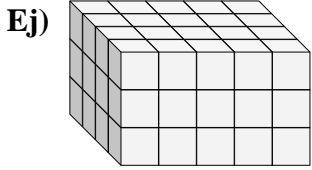




Encontrar el largo, ancho y alto del prisma rectangular. Después encontrar el volumen.



**Respuestas**

A L H V

Ej. 4 5 3 60

1. \_\_\_\_\_

2. \_\_\_\_\_

3. \_\_\_\_\_

4. \_\_\_\_\_

5. \_\_\_\_\_

6. \_\_\_\_\_

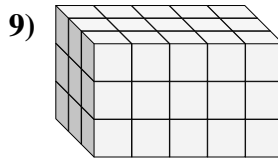
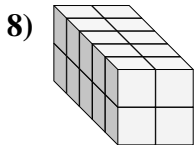
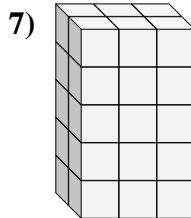
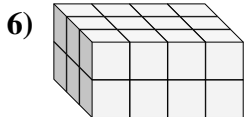
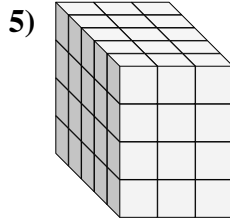
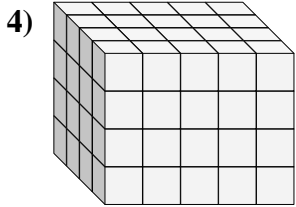
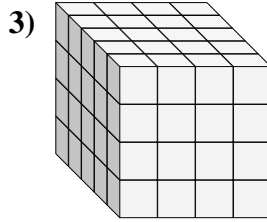
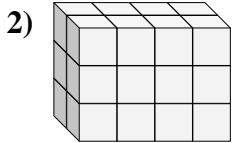
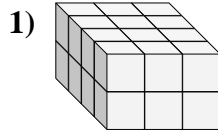
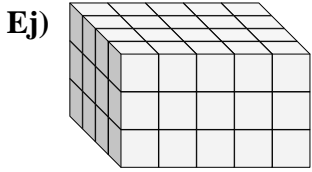
7. \_\_\_\_\_

8. \_\_\_\_\_

9. \_\_\_\_\_



Encontrar el largo, ancho y alto del prisma rectangular. Después encontrar el volumen.



**Respuestas**

A L H V

Ej. 4 5 3 60

1. 4 3 2 24

2. 2 4 3 24

3. 5 4 4 80

4. 4 5 4 80

5. 5 3 4 60

6. 3 4 2 24

7. 2 3 5 30

8. 5 2 2 20

9. 3 5 3 45