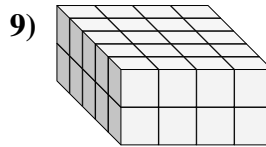
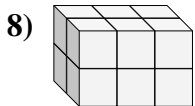
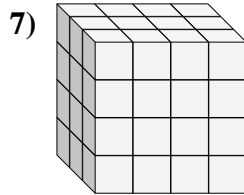
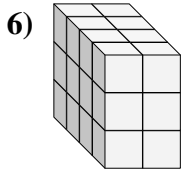
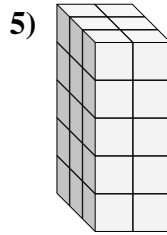
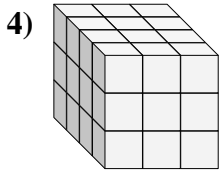
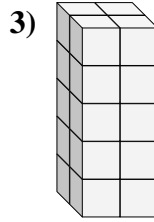
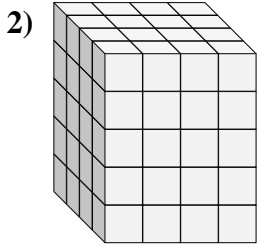
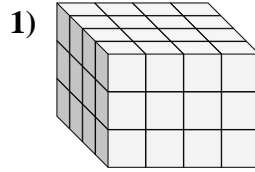
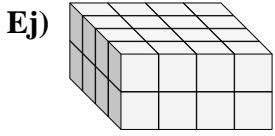




Encontrar el largo, ancho y alto del prisma rectangular. Después encontrar el volumen.



Respuestas

A L H V

Ej. 4 4 2 32

1. _____

2. _____

3. _____

4. _____

5. _____

6. _____

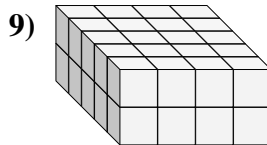
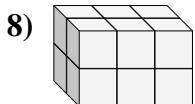
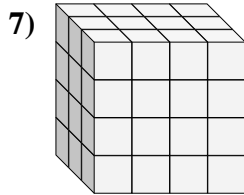
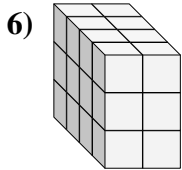
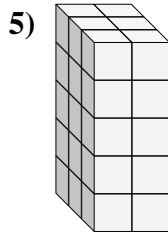
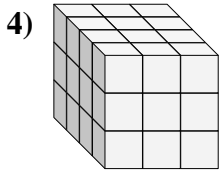
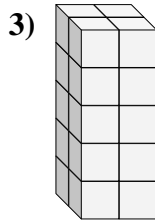
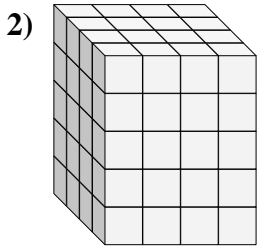
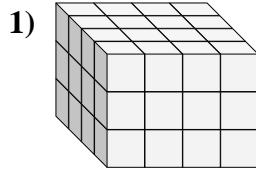
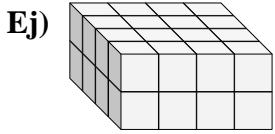
7. _____

8. _____

9. _____



Encontrar el largo, ancho y alto del prisma rectangular. Después encontrar el volumen.



Respuestas

A L H V

Ej. 4 4 2 32

1. 4 4 3 48

2. 4 4 5 80

3. 2 2 5 20

4. 4 3 3 36

5. 3 2 5 30

6. 4 2 3 24

7. 3 4 4 48

8. 2 3 2 12

9. 5 4 2 40