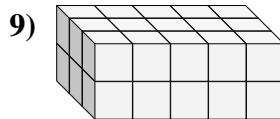
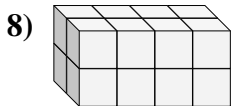
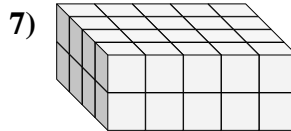
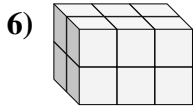
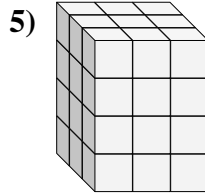
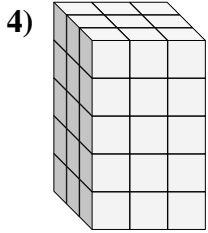
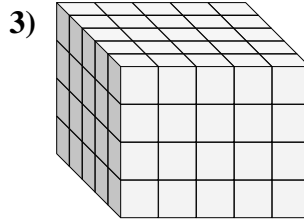
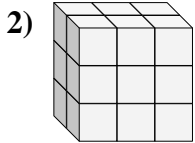
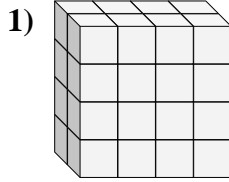
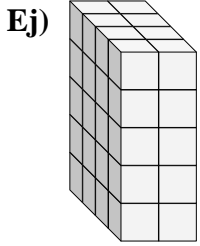




Encontrar el largo, ancho y alto del prisma rectangular. Después encontrar el volumen.



**Respuestas**

A L H V

Ej. 4 2 5 40

1. \_\_\_\_\_

2. \_\_\_\_\_

3. \_\_\_\_\_

4. \_\_\_\_\_

5. \_\_\_\_\_

6. \_\_\_\_\_

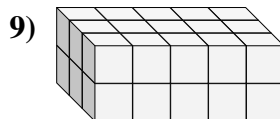
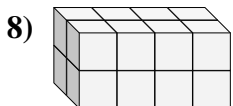
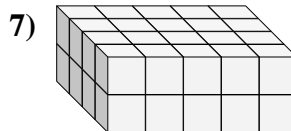
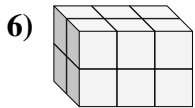
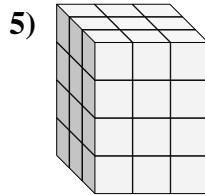
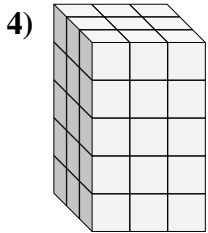
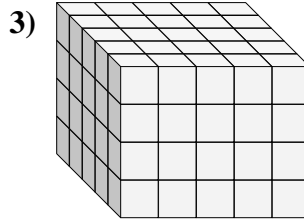
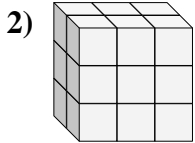
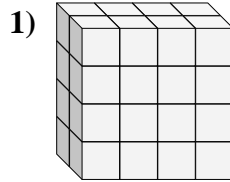
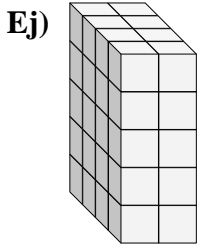
7. \_\_\_\_\_

8. \_\_\_\_\_

9. \_\_\_\_\_



Encontrar el largo, ancho y alto del prisma rectangular. Después encontrar el volumen.



**Respuestas**

A L H V

Ej. 4 2 5 40

1. 2 4 4 32

2. 2 3 3 18

3. 5 5 4 100

4. 3 3 5 45

5. 3 3 4 36

6. 2 3 2 12

7. 4 5 2 40

8. 2 4 2 16

9. 3 5 2 30