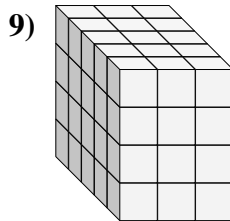
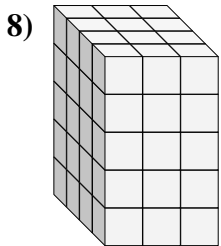
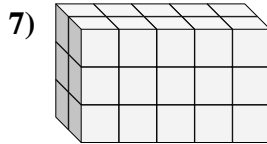
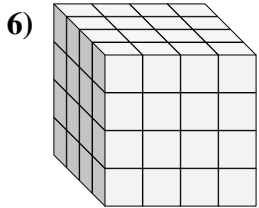
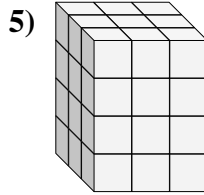
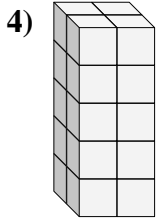
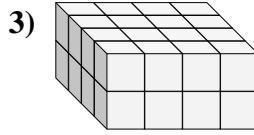
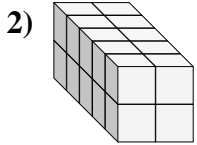
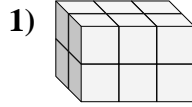
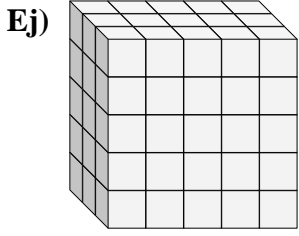




Encontrar el largo, ancho y alto del prisma rectangular. Después encontrar el volumen.



**Respuestas**

A L H V

Ej. 3 5 5 75

1. \_\_\_\_\_

2. \_\_\_\_\_

3. \_\_\_\_\_

4. \_\_\_\_\_

5. \_\_\_\_\_

6. \_\_\_\_\_

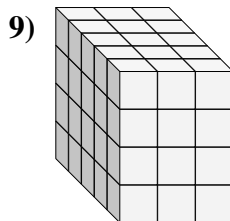
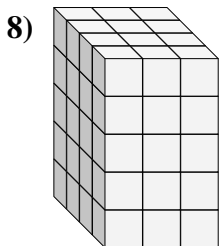
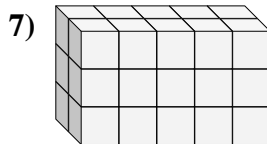
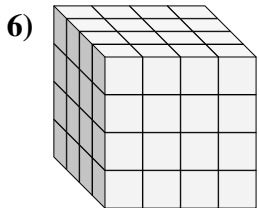
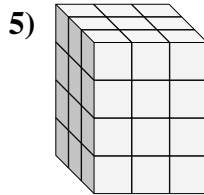
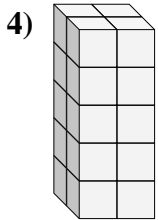
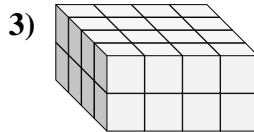
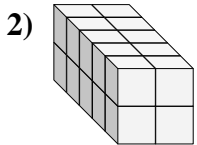
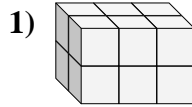
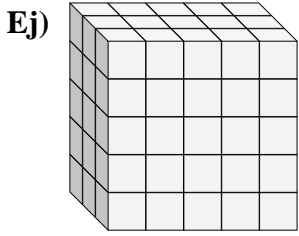
7. \_\_\_\_\_

8. \_\_\_\_\_

9. \_\_\_\_\_



Encontrar el largo, ancho y alto del prisma rectangular. Después encontrar el volumen.



**Respuestas**

A L H V

Ej. 3 5 5 75

1. 2 3 2 12

2. 5 2 2 20

3. 4 4 2 32

4. 2 2 5 20

5. 3 3 4 36

6. 4 4 4 64

7. 2 5 3 30

8. 4 3 5 60

9. 5 3 4 60