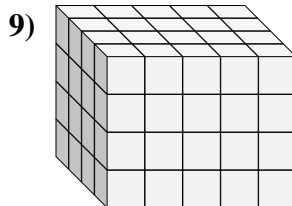
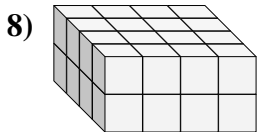
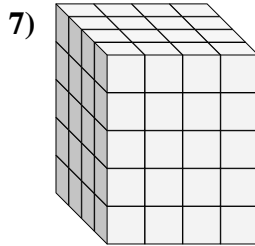
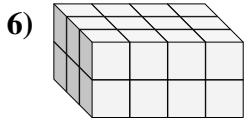
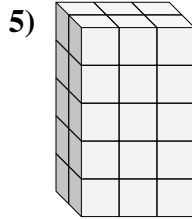
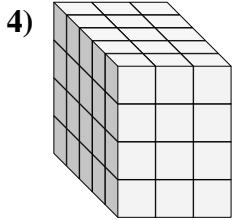
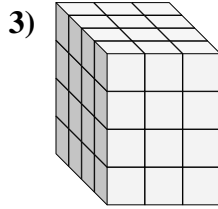
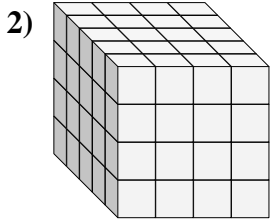
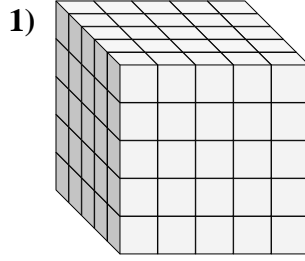
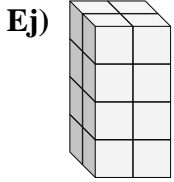




Encontrar el largo, ancho y alto del prisma rectangular. Después encontrar el volumen.



Respuestas

A L H V

Ej. 2 2 4 16

1. _____

2. _____

3. _____

4. _____

5. _____

6. _____

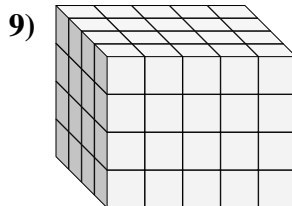
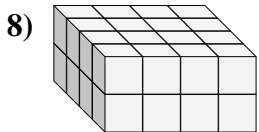
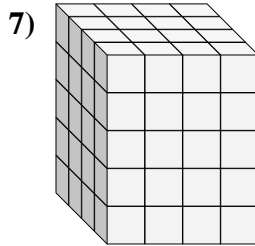
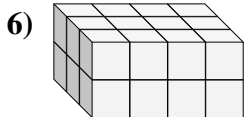
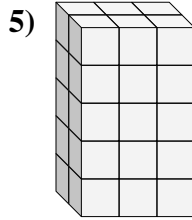
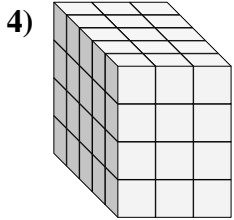
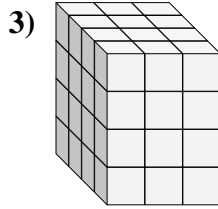
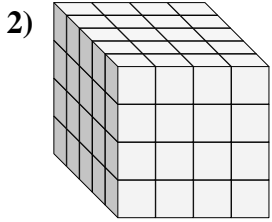
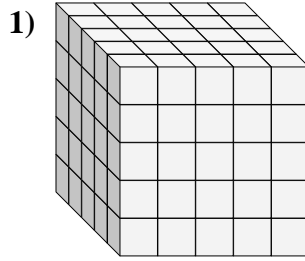
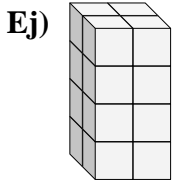
7. _____

8. _____

9. _____



Encontrar el largo, ancho y alto del prisma rectangular. Después encontrar el volumen.



Respuestas

A L H V

Ej. 2 2 4 16

1. 5 5 5 125

2. 5 4 4 80

3. 4 3 4 48

4. 5 3 4 60

5. 2 3 5 30

6. 3 4 2 24

7. 4 4 5 80

8. 4 4 2 32

9. 4 5 4 80