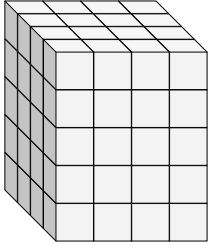


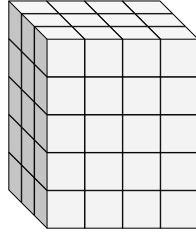


Encontrar el largo, ancho y alto del prisma rectangular. Después encontrar el volumen.

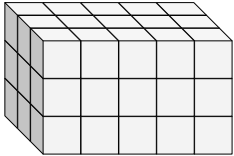
Ej)



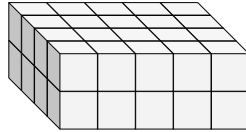
1)



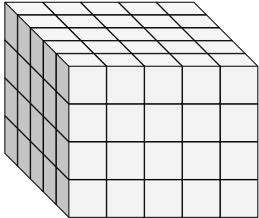
2)



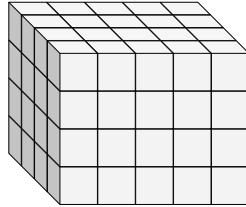
3)



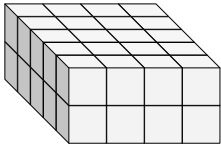
4)



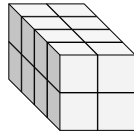
5)



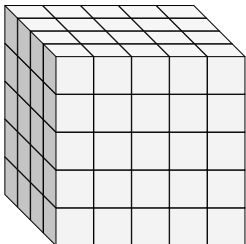
6)



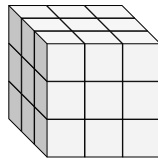
7)



8)



9)



Respuestas

A L H V

Ej. 4 4 5 80

1. _____

2. _____

3. _____

4. _____

5. _____

6. _____

7. _____

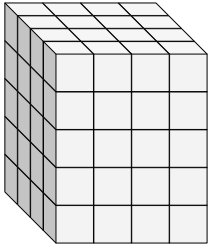
8. _____

9. _____

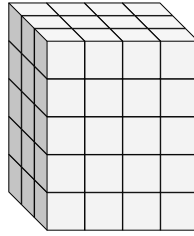


Encontrar el largo, ancho y alto del prisma rectangular. Después encontrar el volumen.

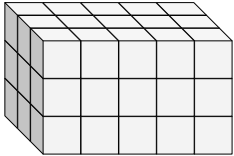
Ej)



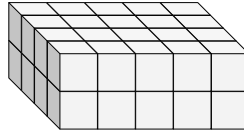
1)



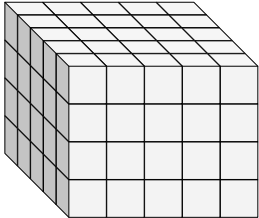
2)



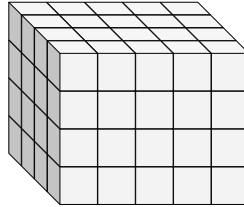
3)



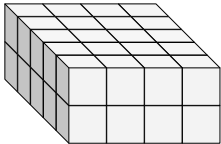
4)



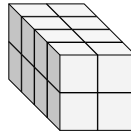
5)



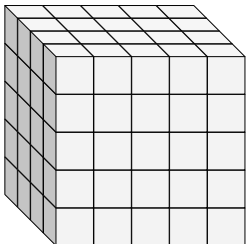
6)



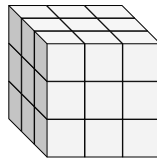
7)



8)



9)



Respuestas

A L H V

Ej. 4 4 5 80

1. 3 4 5 60

2. 3 5 3 45

3. 4 5 2 40

4. 5 5 4 100

5. 4 5 4 80

6. 5 4 2 40

7. 4 2 2 16

8. 4 5 5 100

9. 3 3 3 27