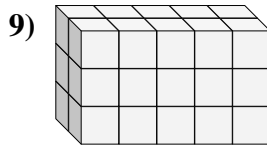
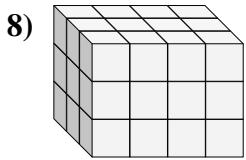
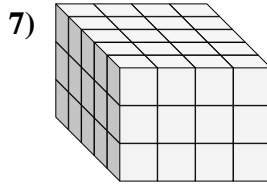
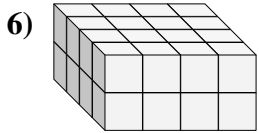
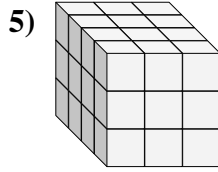
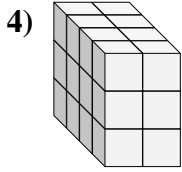
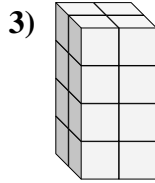
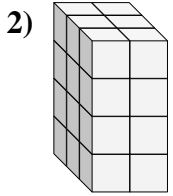
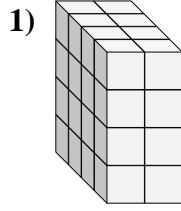
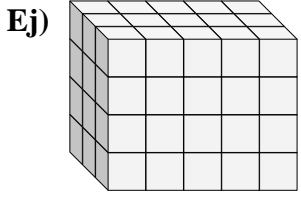




Encontrar el largo, ancho y alto del prisma rectangular. Después encontrar el volumen.



**Respuestas**

A L H V

Ej. 3 5 4 60

1. \_\_\_\_\_

2. \_\_\_\_\_

3. \_\_\_\_\_

4. \_\_\_\_\_

5. \_\_\_\_\_

6. \_\_\_\_\_

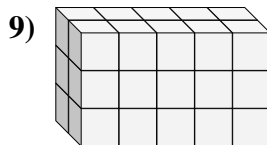
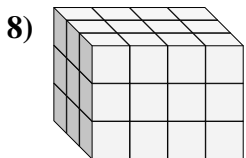
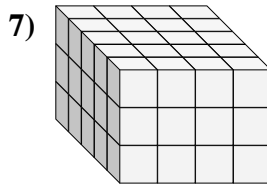
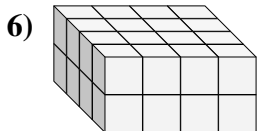
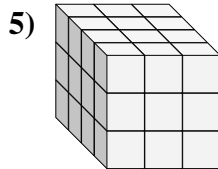
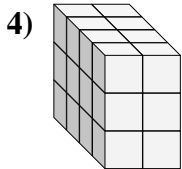
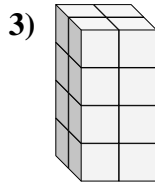
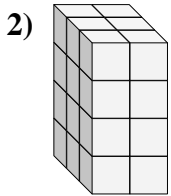
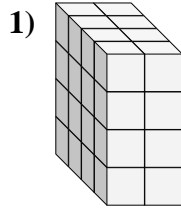
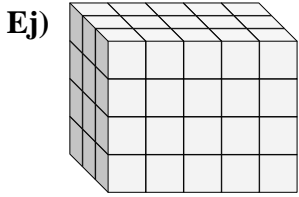
7. \_\_\_\_\_

8. \_\_\_\_\_

9. \_\_\_\_\_



Encontrar el largo, ancho y alto del prisma rectangular. Después encontrar el volumen.



**Respuestas**

	A	L	H	V
Ej.	3	5	4	60
1.	4	2	4	32
2.	3	2	4	24
3.	2	2	4	16
4.	4	2	3	24
5.	4	3	3	36
6.	4	4	2	32
7.	5	4	3	60
8.	3	4	3	36
9.	2	5	3	30