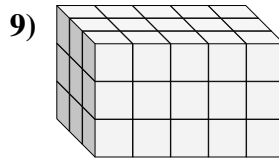
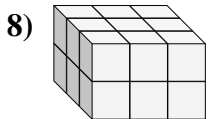
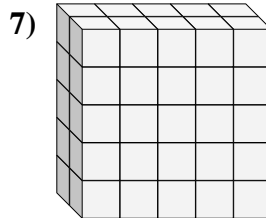
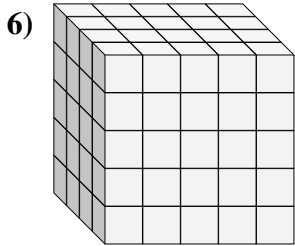
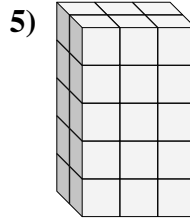
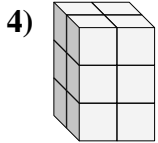
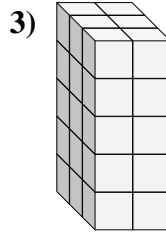
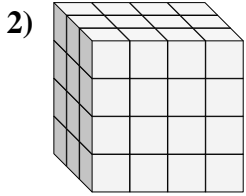
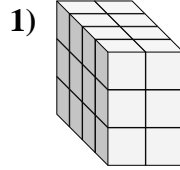
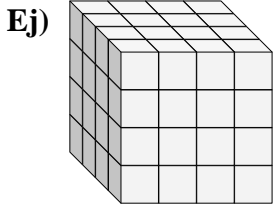




Encontrar el largo, ancho y alto del prisma rectangular. Después encontrar el volumen.



Respuestas

A L H V

Ej. 4 4 4 64

1. _____

2. _____

3. _____

4. _____

5. _____

6. _____

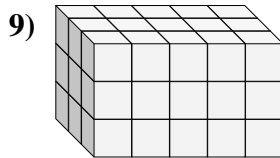
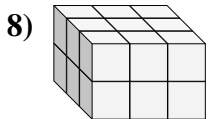
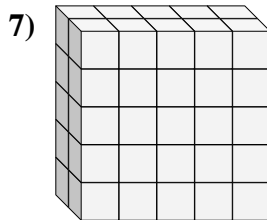
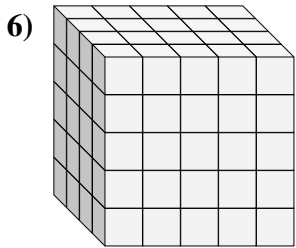
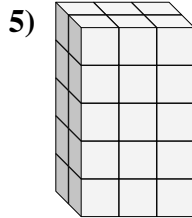
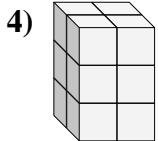
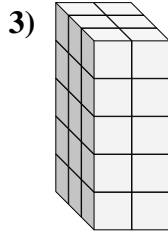
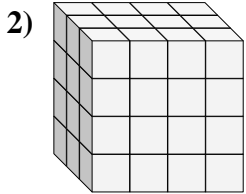
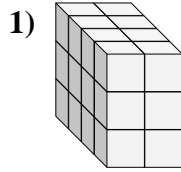
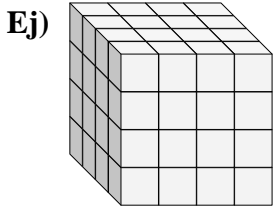
7. _____

8. _____

9. _____



Encontrar el largo, ancho y alto del prisma rectangular. Después encontrar el volumen.



Respuestas

A L H V

Ej. 4 4 4 64

1. 4 2 3 24

2. 3 4 4 48

3. 3 2 5 30

4. 2 2 3 12

5. 2 3 5 30

6. 4 5 5 100

7. 2 5 5 50

8. 3 3 2 18

9. 3 5 3 45