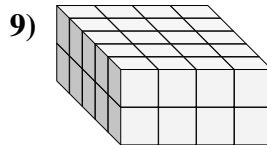
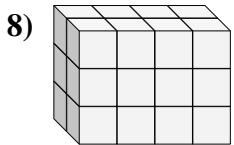
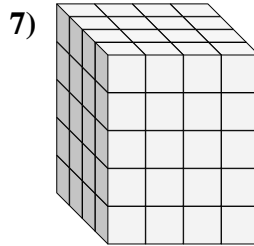
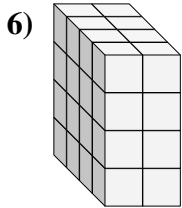
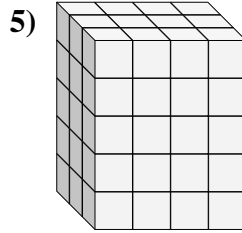
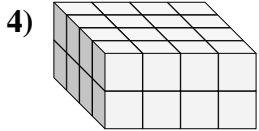
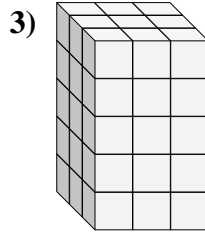
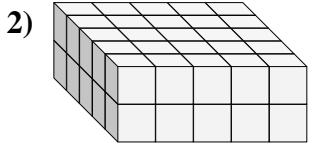
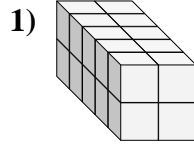
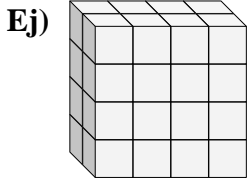




Encontrar el largo, ancho y alto del prisma rectangular. Después encontrar el volumen.



Respuestas

A L H V

Ej. 2 4 4 32

1. _____

2. _____

3. _____

4. _____

5. _____

6. _____

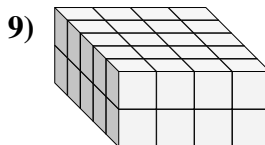
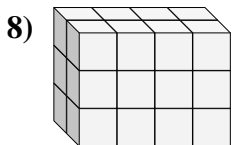
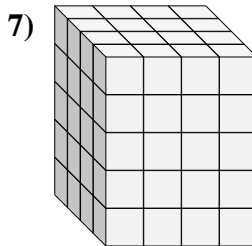
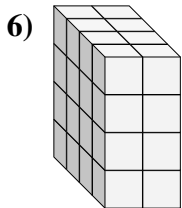
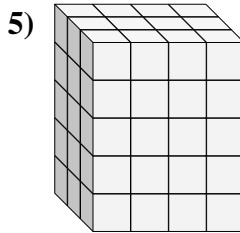
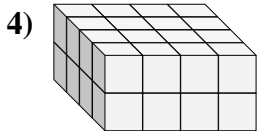
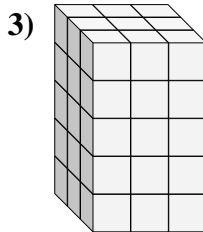
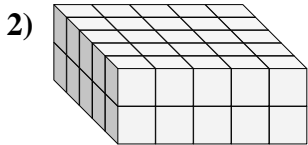
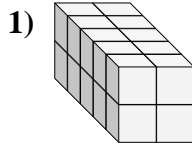
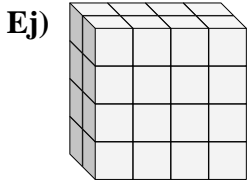
7. _____

8. _____

9. _____



Encontrar el largo, ancho y alto del prisma rectangular. Después encontrar el volumen.



Respuestas

A L H V

Ej. 2 4 4 32

1. 5 2 2 20

2. 5 5 2 50

3. 3 3 5 45

4. 4 4 2 32

5. 3 4 5 60

6. 4 2 4 32

7. 4 4 5 80

8. 2 4 3 24

9. 5 4 2 40