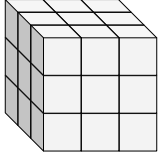


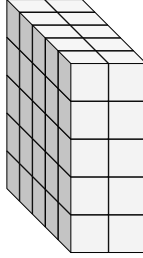


Encontrar el largo, ancho y alto del prisma rectangular. Después encontrar el volumen.

Ej)



1)



Respuestas

A L H V

Ej. 3 3 3 27

1. _____

2. _____

3. _____

4. _____

5. _____

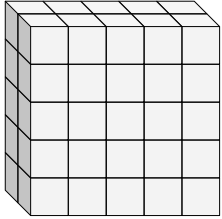
6. _____

7. _____

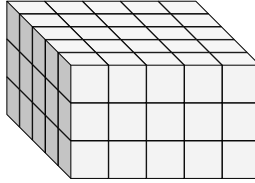
8. _____

9. _____

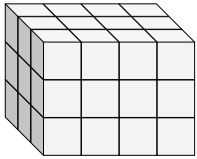
2)



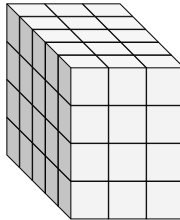
3)



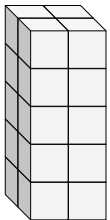
4)



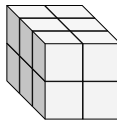
5)



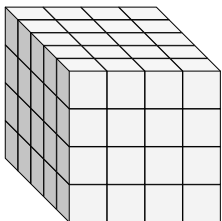
6)



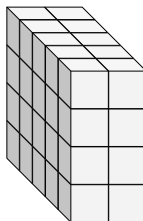
7)



8)



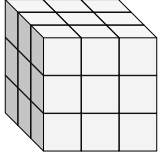
9)



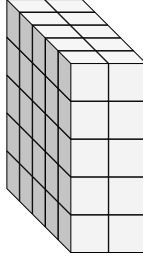


Encontrar el largo, ancho y alto del prisma rectangular. Después encontrar el volumen.

Ej)



1)

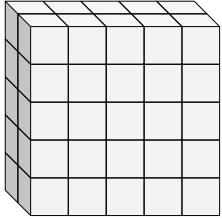


Respuestas

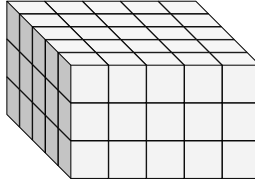
A L H V

Ej. 3 3 3 27

2)



3)



1. 5 2 5 50

2. 2 5 5 50

3. 5 5 3 75

4. 3 4 3 36

5. 5 3 4 60

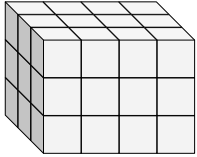
6. 2 2 5 20

7. 3 2 2 12

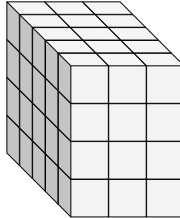
8. 5 4 4 80

9. 5 2 4 40

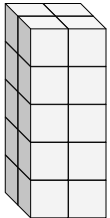
4)



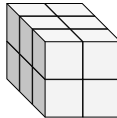
5)



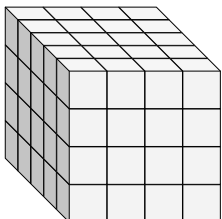
6)



7)



8)



9)

