

**Expresar cada número con líneas de conteo**

1) 61 \_\_\_\_\_

2) 35 \_\_\_\_\_

3) 49 \_\_\_\_\_

4) 15 \_\_\_\_\_

5) 52 \_\_\_\_\_

6) 16 \_\_\_\_\_

7) 75 \_\_\_\_\_

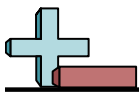
8) 12 \_\_\_\_\_

9) 11 \_\_\_\_\_


10) 31 \_\_\_\_\_

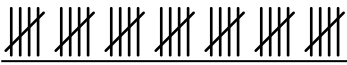
11) 37 \_\_\_\_\_

12) 87 \_\_\_\_\_




**Expresar cada número con líneas de conteo**


1) 61  \_\_\_\_\_

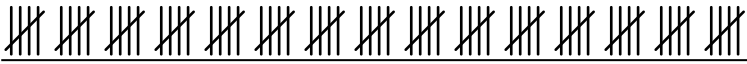
2) 35  \_\_\_\_\_


3) 49  \_\_\_\_\_


4) 15  \_\_\_\_\_


5) 52  \_\_\_\_\_


6) 16  \_\_\_\_\_


7) 75  \_\_\_\_\_

8) 12  \_\_\_\_\_

9) 11  \_\_\_\_\_

10) 31  \_\_\_\_\_

11) 37  \_\_\_\_\_

12) 87  \_\_\_\_\_