

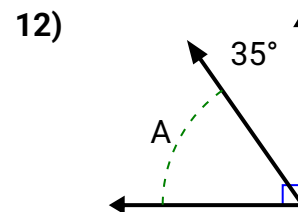
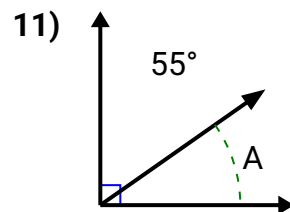
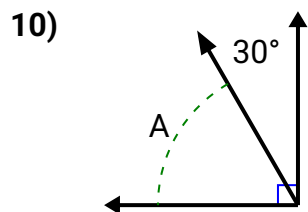
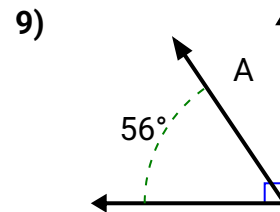
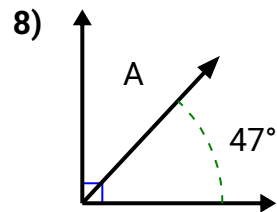
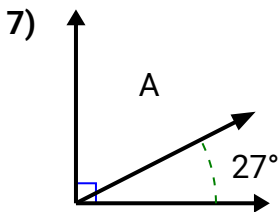
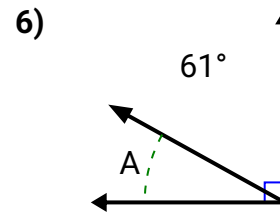
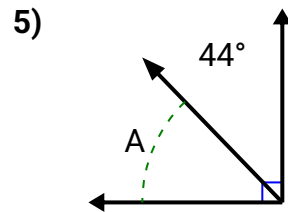
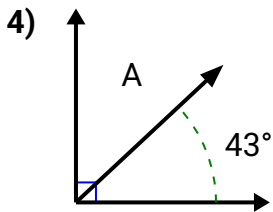
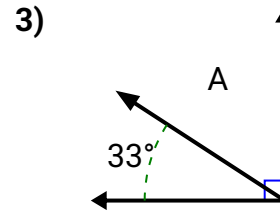
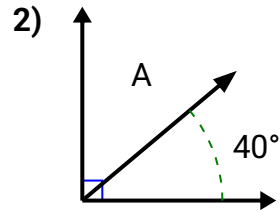
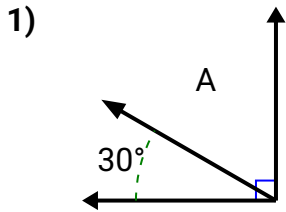


Encuentra los ángulos complementarios

Nombre: _____

Encuentra el valor de 'A' en el conjunto de ángulos complementarios.

Respuestas

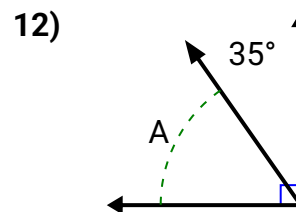
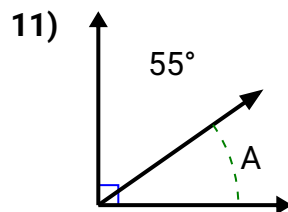
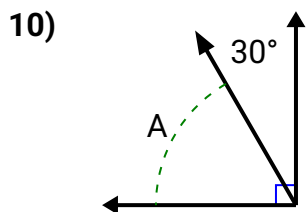
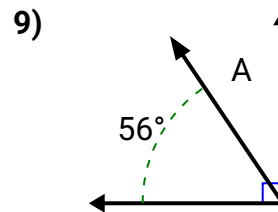
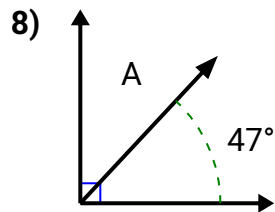
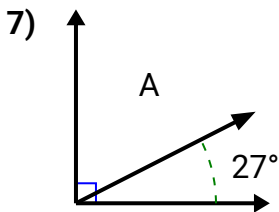
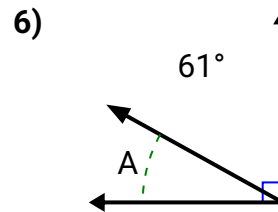
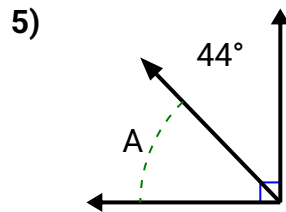
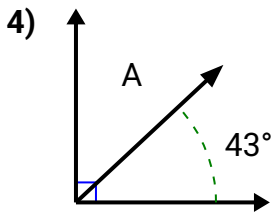
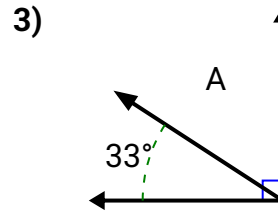
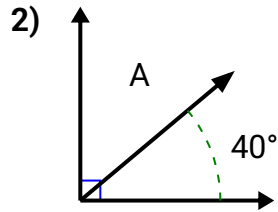
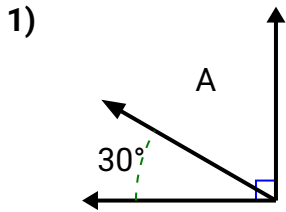


1. _____
2. _____
3. _____
4. _____
5. _____
6. _____
7. _____
8. _____
9. _____
10. _____
11. _____
12. _____



Encuentra el valor de 'A' en el conjunto de ángulos complementarios.

Respuestas



1. **60**

2. **50**

3. **57**

4. **47**

5. **46**

6. **29**

7. **63**

8. **43**

9. **34**

10. **60**

11. **35**

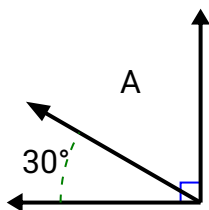
12. **55**



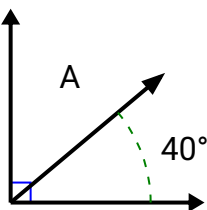
Encuentra el valor de 'A' en el conjunto de ángulos complementarios.

Respuestas

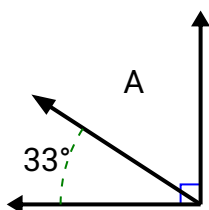
1)



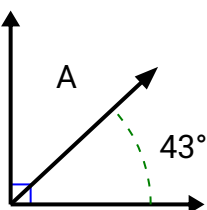
2)



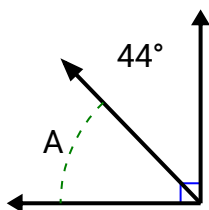
3)



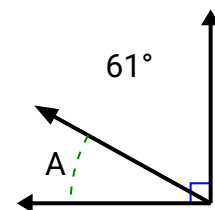
4)



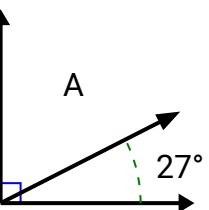
5)



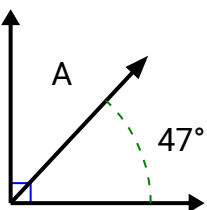
6)



7)



8)



1. _____

2. _____

3. _____

4. _____

5. _____

6. _____

7. _____

8. _____

9. _____

10. _____

11. _____

12. _____