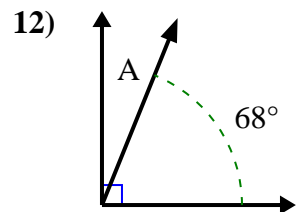
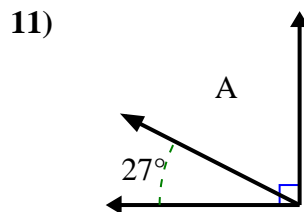
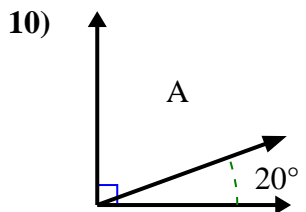
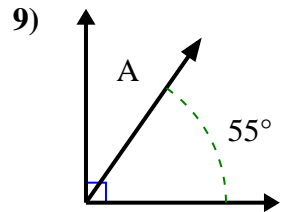
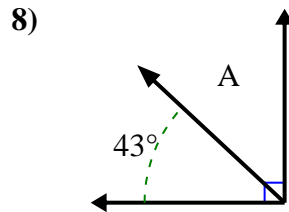
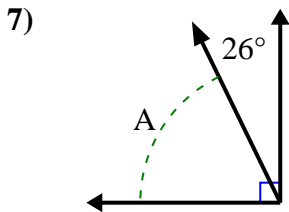
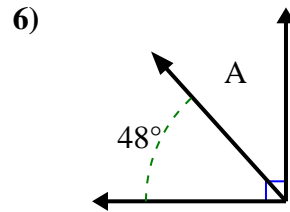
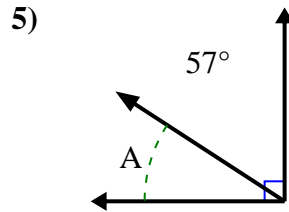
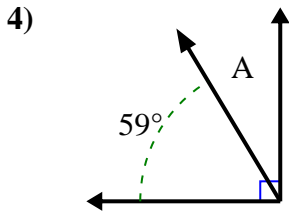
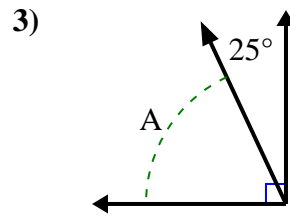
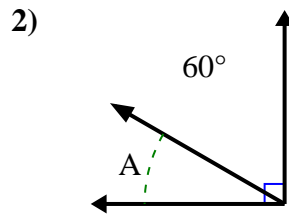
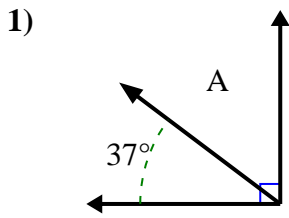




Encuentra el valor de 'A' en el conjunto de ángulos complementarios.

**Respuestas**

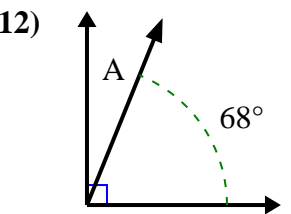
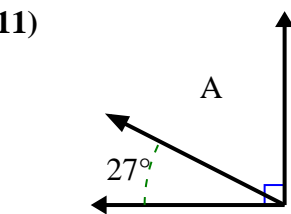
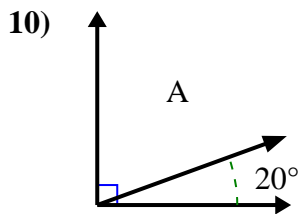
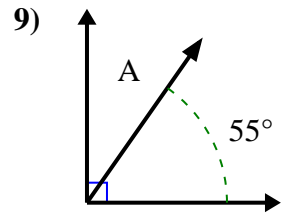
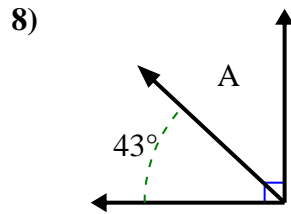
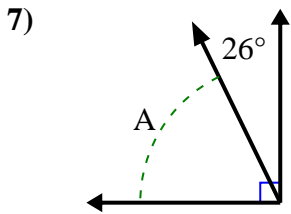
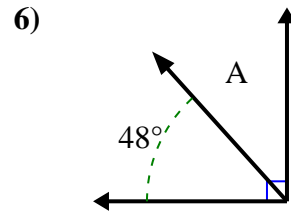
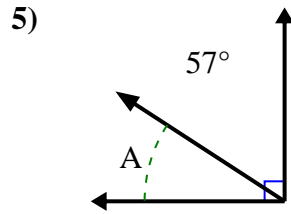
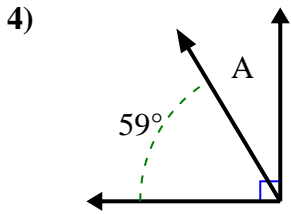
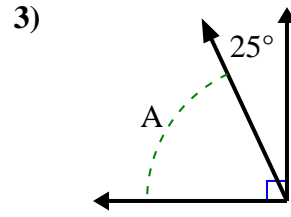
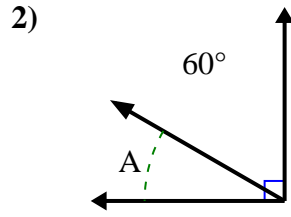
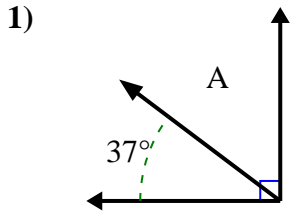


1. \_\_\_\_\_
2. \_\_\_\_\_
3. \_\_\_\_\_
4. \_\_\_\_\_
5. \_\_\_\_\_
6. \_\_\_\_\_
7. \_\_\_\_\_
8. \_\_\_\_\_
9. \_\_\_\_\_
10. \_\_\_\_\_
11. \_\_\_\_\_
12. \_\_\_\_\_



Encuentra el valor de 'A' en el conjunto de ángulos complementarios.

**Respuestas**



1. 53°

2. 30°

3. 65°

4. 31°

5. 33°

6. 42°

7. 64°

8. 47°

9. 35°

10. 70°

11. 63°

12. 22°