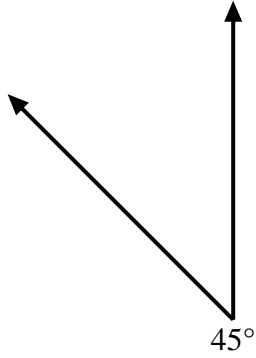


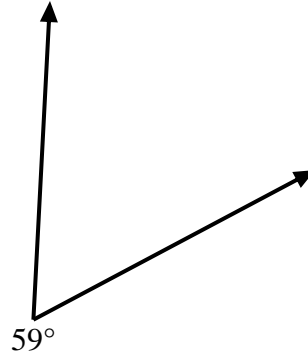


Utiliza un transportador para crear un triángulo a partir de la figura que se muestra. Responde con los ángulos que faltan. Las respuestas variarán.

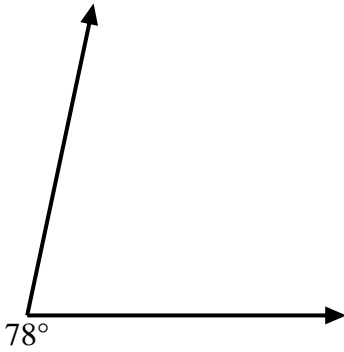
1)



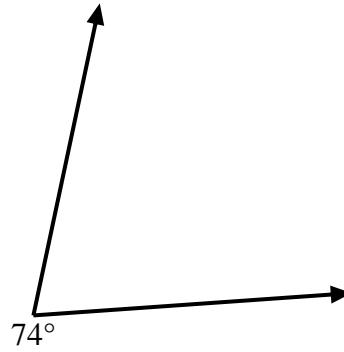
2)



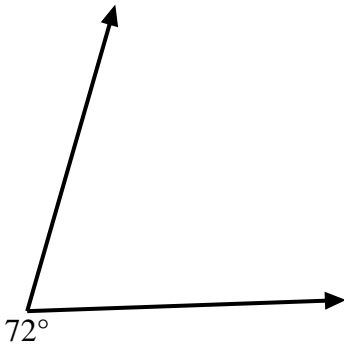
3)



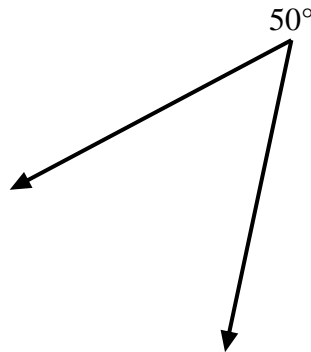
4)



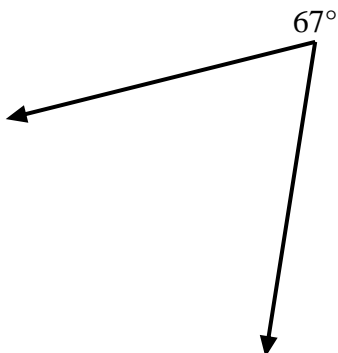
5)



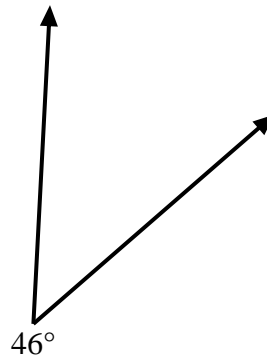
6)



7)



8)



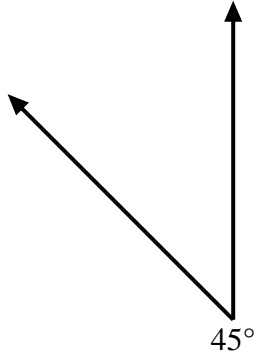
**Respuestas**

1. \_\_\_\_\_
2. \_\_\_\_\_
3. \_\_\_\_\_
4. \_\_\_\_\_
5. \_\_\_\_\_
6. \_\_\_\_\_
7. \_\_\_\_\_
8. \_\_\_\_\_

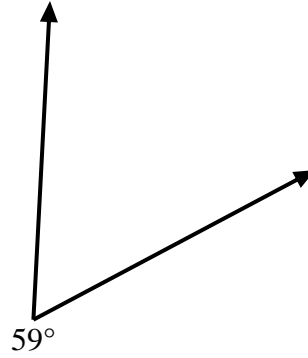


Utiliza un transportador para crear un triángulo a partir de la figura que se muestra. Responde con los ángulos que faltan. Las respuestas variarán.

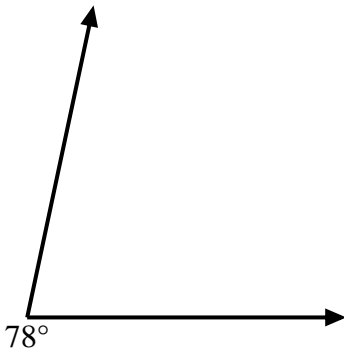
1)



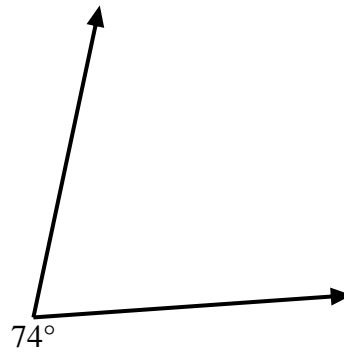
2)



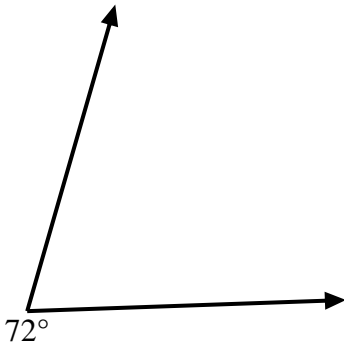
3)



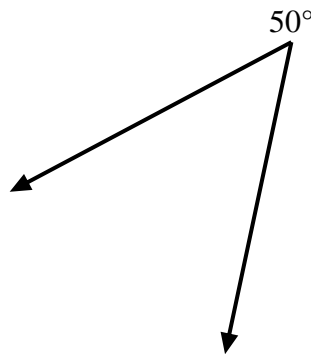
4)



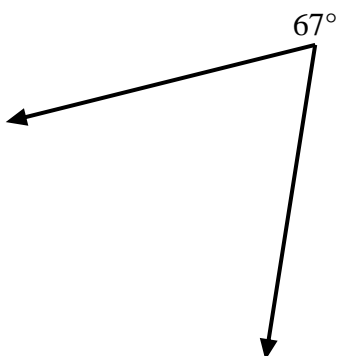
5)



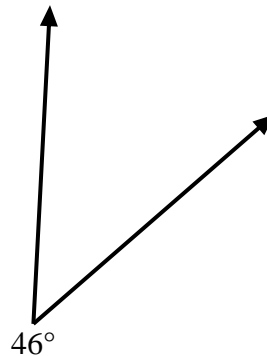
6)



7)



8)



**Respuestas**

1. **=135**

2. **=121**

3. **=102**

4. **=106**

5. **=108**

6. **=130**

7. **=113**

8. **=134**