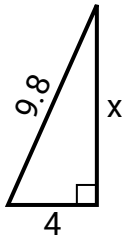


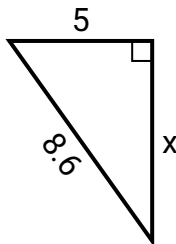


## SPANISH\_INSTRUCTIONS

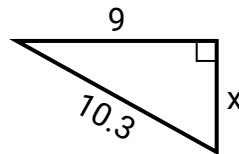
1) perímetro = 22.8 u



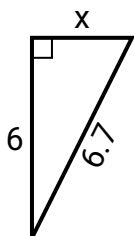
2) perímetro = 20.6 u



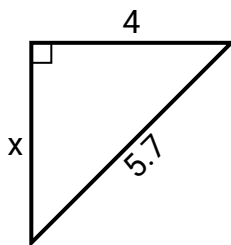
3) perímetro = 24.3 u



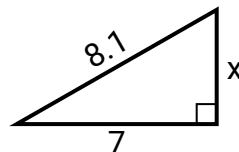
4) perímetro = 15.7 u



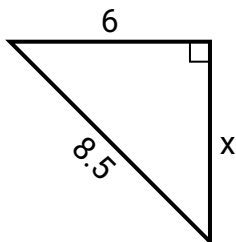
5) perímetro = 13.7 u



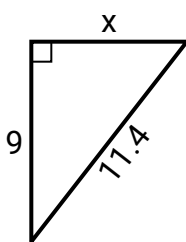
6) perímetro = 19.1 u



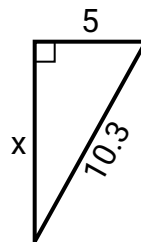
7) perímetro = 20.5 u



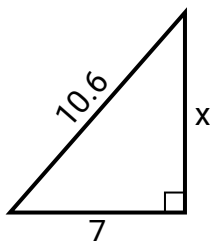
8) perímetro = 27.4 u



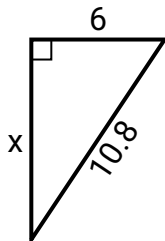
9) perímetro = 24.3 u



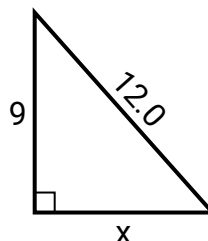
10) perímetro = 25.6 u



11) perímetro = 25.8 u



12) perímetro = 29 u

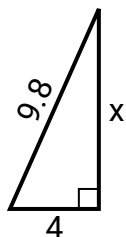


## Respuestas

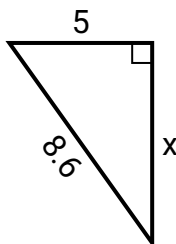
1. \_\_\_\_\_
2. \_\_\_\_\_
3. \_\_\_\_\_
4. \_\_\_\_\_
5. \_\_\_\_\_
6. \_\_\_\_\_
7. \_\_\_\_\_
8. \_\_\_\_\_
9. \_\_\_\_\_
10. \_\_\_\_\_
11. \_\_\_\_\_
12. \_\_\_\_\_

**SPANISH\_INSTRUCTIONS**

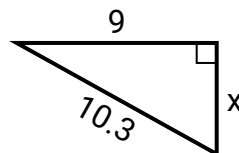
1) perímetro = 22.8 u



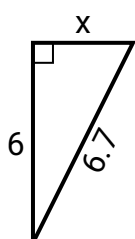
2) perímetro = 20.6 u



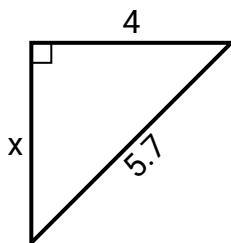
3) perímetro = 24.3 u



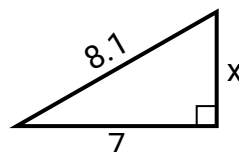
4) perímetro = 15.7 u



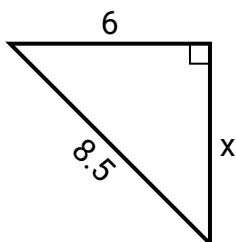
5) perímetro = 13.7 u



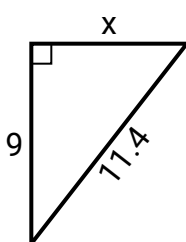
6) perímetro = 19.1 u



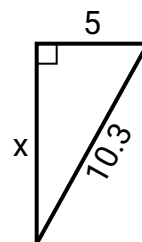
7) perímetro = 20.5 u



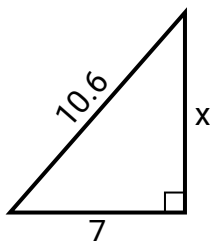
8) perímetro = 27.4 u



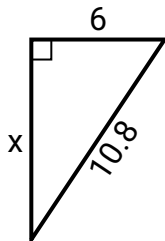
9) perímetro = 24.3 u



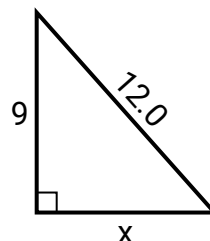
10) perímetro = 25.6 u



11) perímetro = 25.8 u



12) perímetro = 29 u

**Respuestas**

1. **9**
2. **7**
3. **5**
4. **3**
5. **4**
6. **4**
7. **6**
8. **7**
9. **9**
10. **8**
11. **9**
12. **8**